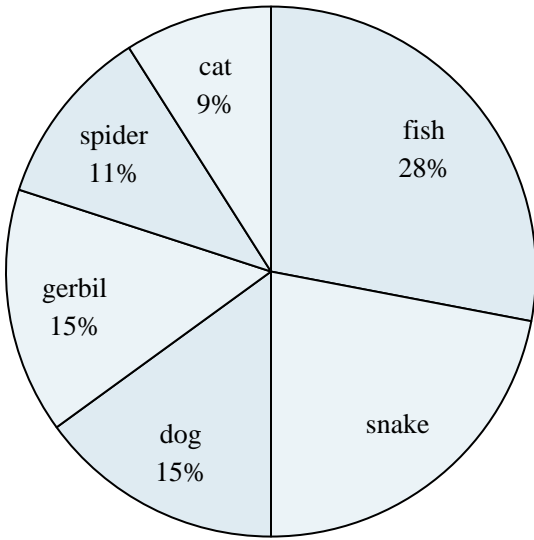




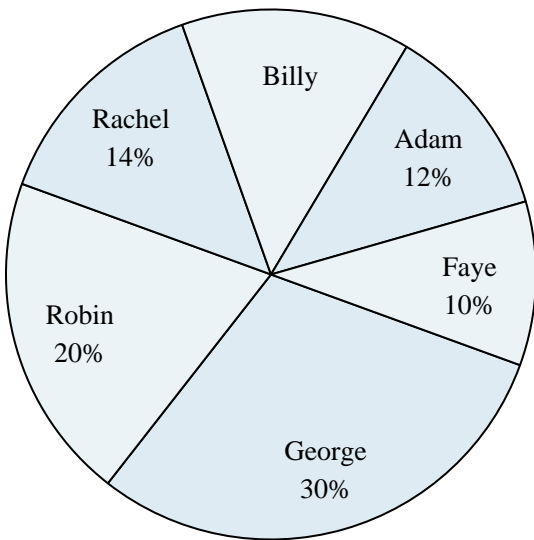
Use the graph to solve.

Favorite Pet



- Which two pets did about half the people say was their favorite?
- What percent of people preferred either the gerbil or the cat?
- Which pet did the greatest number of people like?
- Which pet did the least amount of people say was their favorite?
- What percent of people said the dog was their favorite pet?

Class Election Results



- What percent of people voted for Adam?
- Who won the election?
- Which two candidates had about half the votes?
- What percent of people voted for either Rachel or Faye?
- Who got the least number of votes?

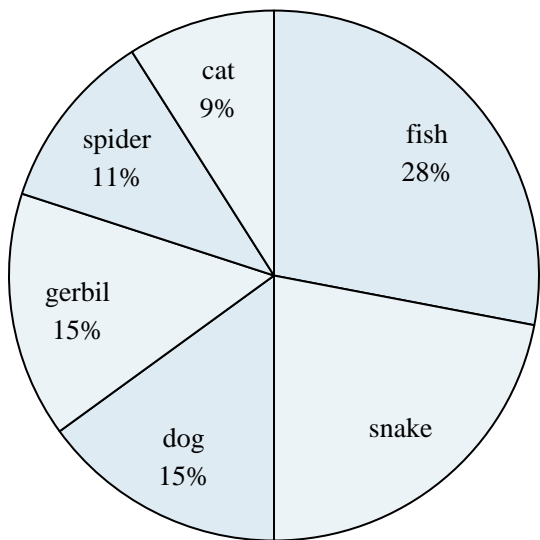
Answers

- _____
- _____
- _____
- _____
- _____
- _____
- _____
- _____
- _____
- _____



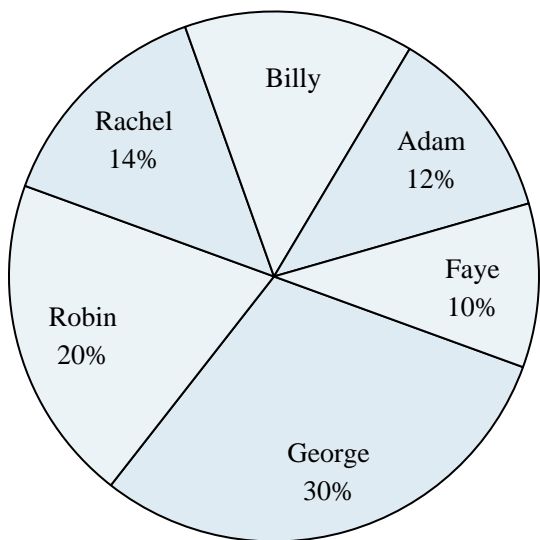
Use the graph to solve.

Favorite Pet



- 1) Which two pets did about half the people say was their favorite?
- 2) What percent of people preferred either the gerbil or the cat?
- 3) Which pet did the greatest number of people like?
- 4) Which pet did the least amount of people say was their favorite?
- 5) What percent of people said the dog was their favorite pet?

Class Election Results



- 6) What percent of people voted for Adam?
- 7) Who won the election?
- 8) Which two candidates had about half the votes?
- 9) What percent of people voted for either Rachel or Faye?
- 10) Who got the least number of votes?

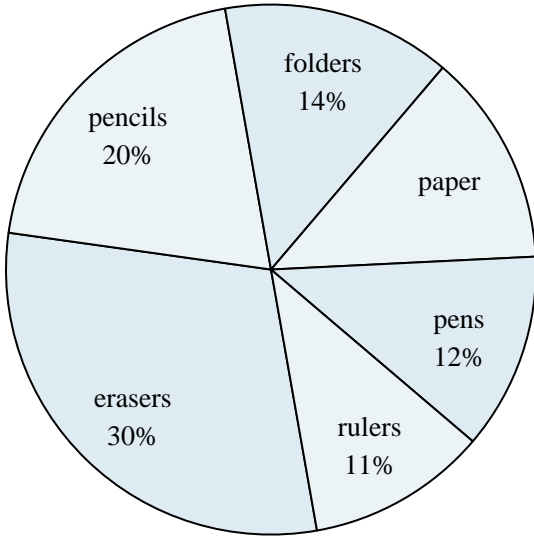
Answers

1. fish & snake
2. 24%
3. fish
4. cat
5. 15%
6. 12%
7. George
8. George & Robin
9. 24%
10. Faye



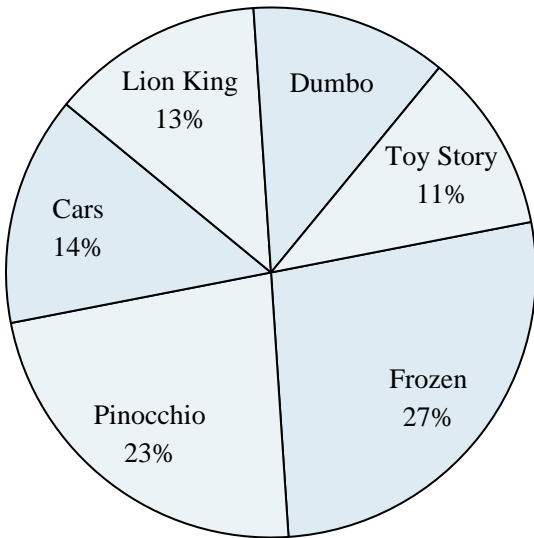
Use the graph to solve.

School Store Sales



- 1) What is the combined amount of folders and paper sold?
- 2) What percent of the sales were erasers?
- 3) Which product sold the worst?
- 4) Which two products accounted for about half the sales?
- 5) Which product sold the best?

Favorite Disney Movie



- 6) Which movie was the most popular?
- 7) What percent of people said Frozen was their favorite?
- 8) What percent of people said either Cars or Dumbo was their favorite?
- 9) Which two movies did about half the people say was their favorite?
- 10) Which movie was the least popular?

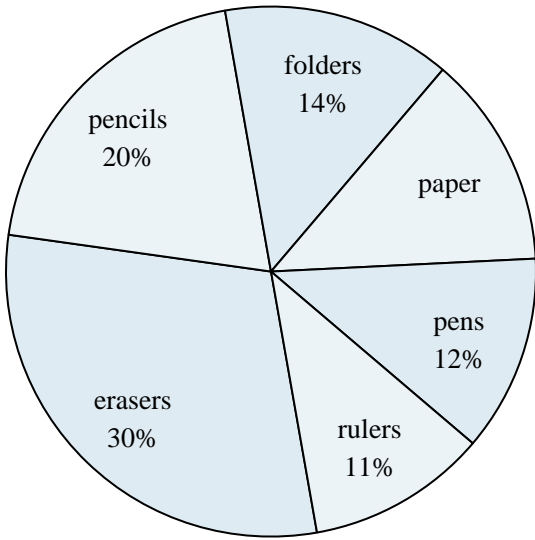
Answers

1. _____
2. _____
3. _____
4. _____
5. _____
6. _____
7. _____
8. _____
9. _____
10. _____



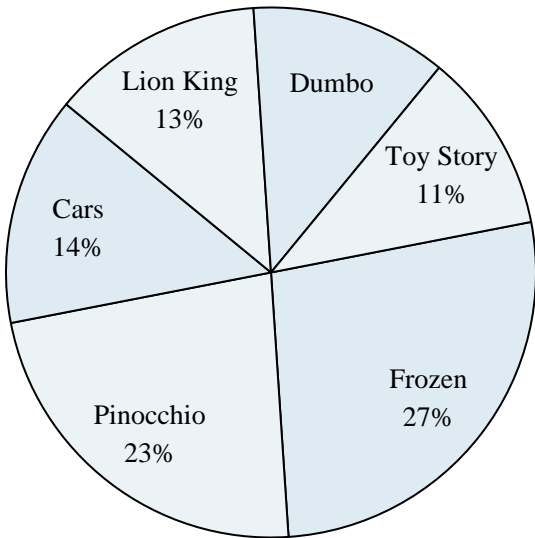
Use the graph to solve.

School Store Sales



- 1) What is the combined amount of folders and paper sold?
- 2) What percent of the sales were erasers?
- 3) Which product sold the worst?
- 4) Which two products accounted for about half the sales?
- 5) Which product sold the best?

Favorite Disney Movie



- 6) Which movie was the most popular?
- 7) What percent of people said Frozen was their favorite?
- 8) What percent of people said either Cars or Dumbo was their favorite?
- 9) Which two movies did about half the people say was their favorite?
- 10) Which movie was the least popular?

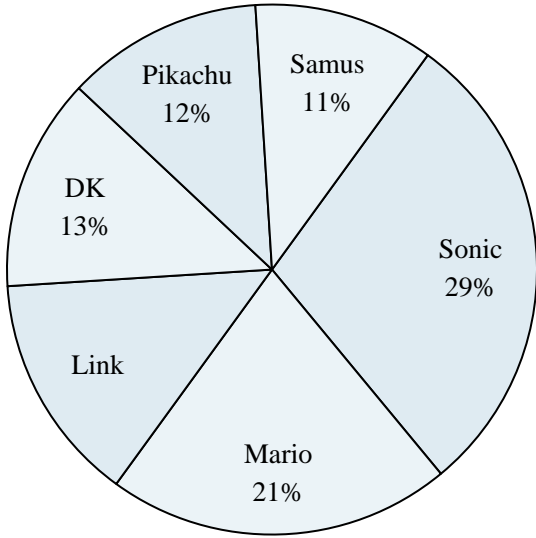
Answers

1. 27%
2. 30%
3. rulers
4. erasers & pencils
5. erasers
6. Frozen
7. 27%
8. 26%
9. Frozen & Pinocchio
10. Toy Story



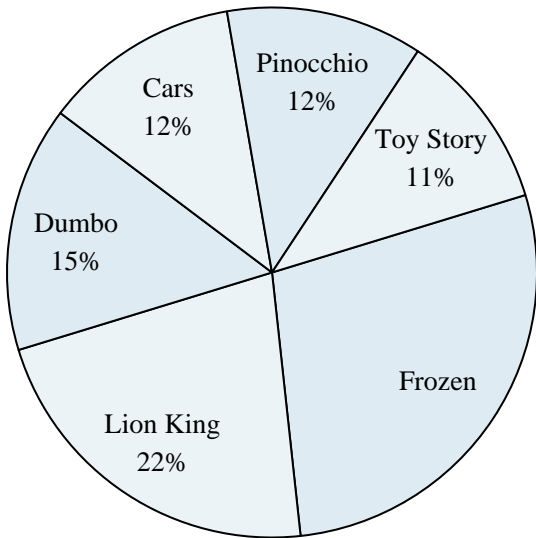
Use the graph to solve.

Favorite Game Character



- 1) What percent of people said either DK or Mario was their favorite?
- 2) Which character was the most popular?
- 3) What percent of people said Link was their favorite?
- 4) Which two characters did about half the people say was their favorite?
- 5) Which character was the least popular?

Favorite Disney Movie



- 6) Which movie was the most popular?
- 7) Which two movies did about half the people say was their favorite?
- 8) Which movie was the least popular?
- 9) What percent of people said Frozen was their favorite?
- 10) What percent of people said either Cars or Toy Story was their favorite?

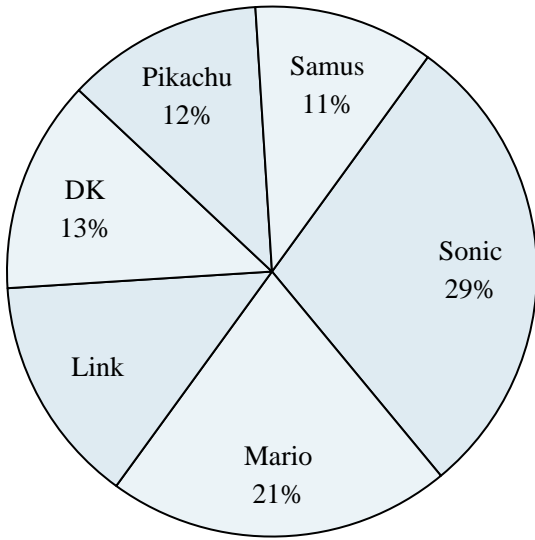
Answers

1. _____
2. _____
3. _____
4. _____
5. _____
6. _____
7. _____
8. _____
9. _____
10. _____



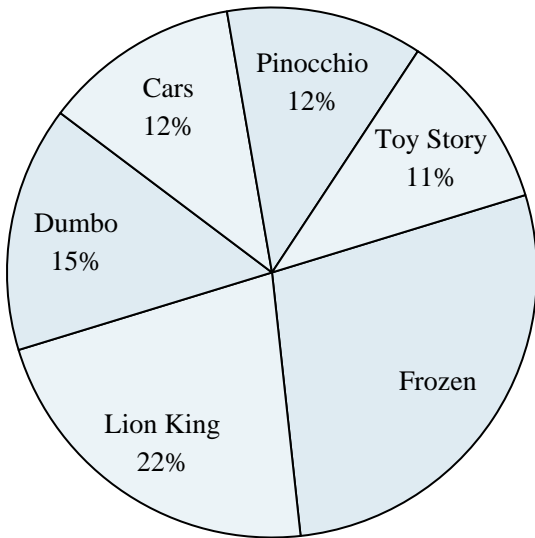
Use the graph to solve.

Favorite Game Character



- 1) What percent of people said either DK or Mario was their favorite?
- 2) Which character was the most popular?
- 3) What percent of people said Link was their favorite?
- 4) Which two characters did about half the people say was their favorite?
- 5) Which character was the least popular?

Favorite Disney Movie



- 6) Which movie was the most popular?
- 7) Which two movies did about half the people say was their favorite?
- 8) Which movie was the least popular?
- 9) What percent of people said Frozen was their favorite?
- 10) What percent of people said either Cars or Toy Story was their favorite?

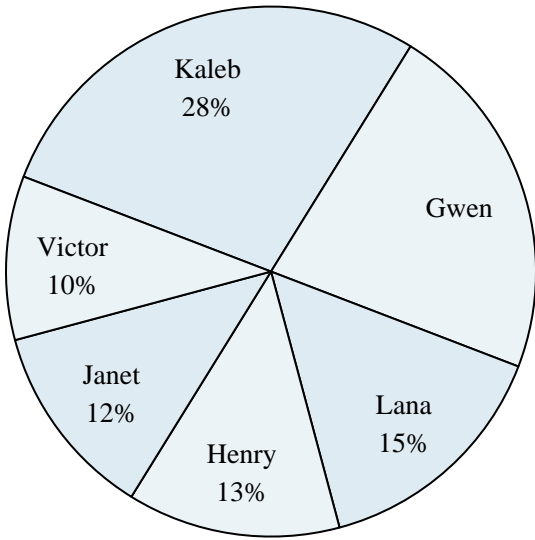
Answers

1. 34%
2. Sonic
3. 14%
4. Sonic & Mario
5. Samus
6. Frozen
7. Frozen & Lion King
8. Toy Story
9. 28%
10. 23%



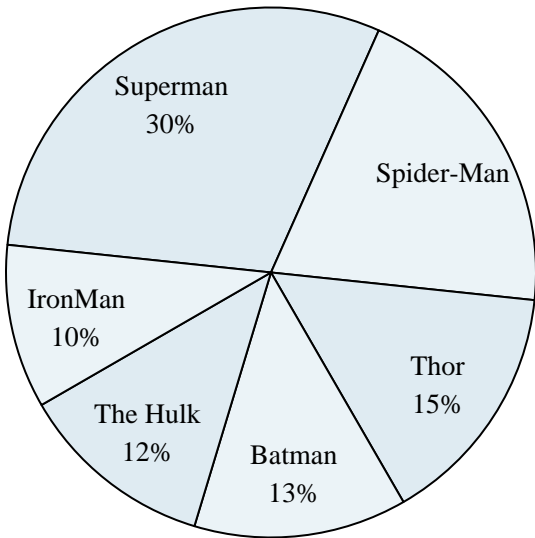
Use the graph to solve.

Class Election Results



- 1) Who won the election?
- 2) What percent of people voted for Janet?
- 3) Who got the least number of votes?
- 4) What percent of people voted for either Henry or Kaleb?
- 5) Which two candidates had about half the votes?

Favorite Superhero



- 6) Which hero was the least popular?
- 7) What percent of people said The Hulk was their favorite?
- 8) What percent of people said either Spider-Man or Thor was their favorite?
- 9) Which hero was the most popular?
- 10) Which two heroes did about half the people say was their favorite?

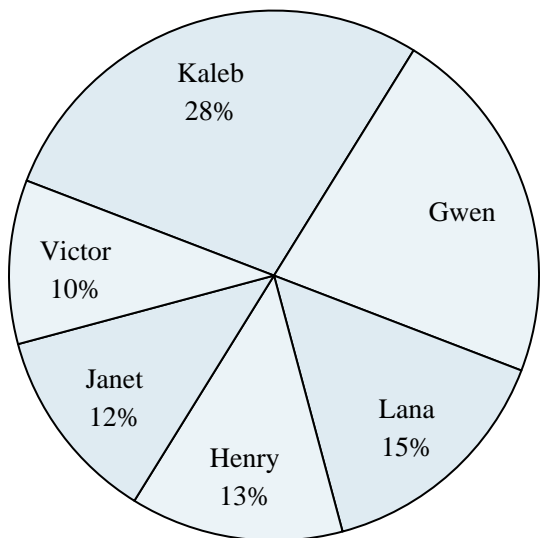
Answers

1. _____
2. _____
3. _____
4. _____
5. _____
6. _____
7. _____
8. _____
9. _____
10. _____



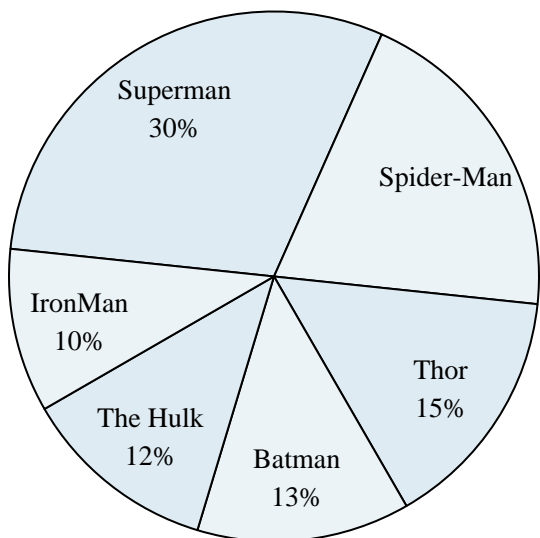
Use the graph to solve.

Class Election Results



- 1) Who won the election?
- 2) What percent of people voted for Janet?
- 3) Who got the least number of votes?
- 4) What percent of people voted for either Henry or Kaleb?
- 5) Which two candidates had about half the votes?

Favorite Superhero



- 6) Which hero was the least popular?
- 7) What percent of people said The Hulk was their favorite?
- 8) What percent of people said either Spider-Man or Thor was their favorite?
- 9) Which hero was the most popular?
- 10) Which two heroes did about half the people say was their favorite?

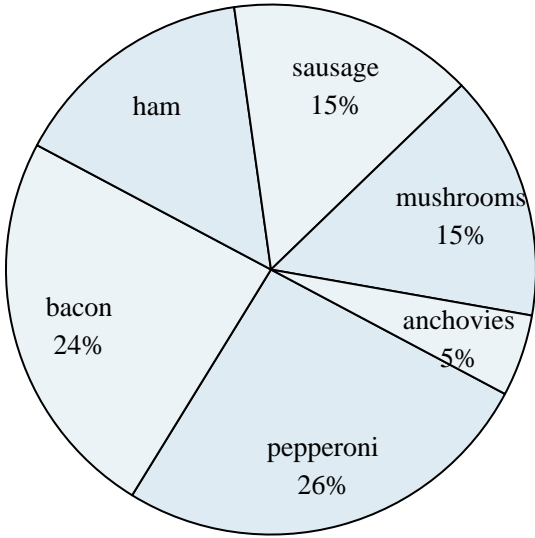
Answers

1. Kaleb
2. 12%
3. Victor
4. 41%
5. Kaleb & Gwen
6. IronMan
7. 12%
8. 35%
9. Superman
10. Superman & Spider-Man



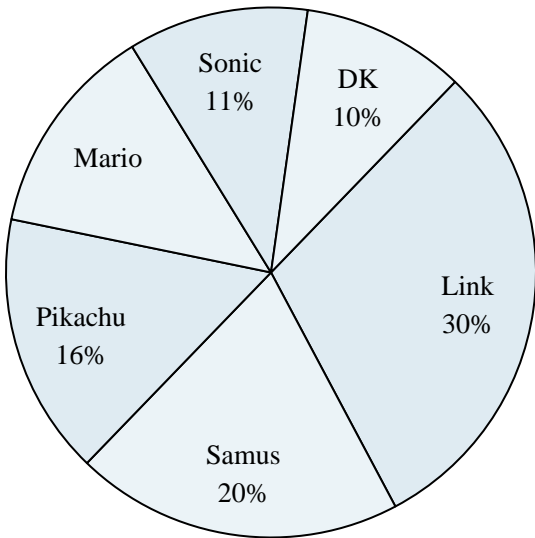
Use the graph to solve.

Favorite Pizza Topping



- 1) What percent of people said ham was their favorite?
- 2) Which topping was the least popular?
- 3) Which two toppings did about half the people like the best?
- 4) What percent of people said either sausage or mushrooms was their favorite?
- 5) Which topping was the most popular?

Favorite Game Character



- 6) Which character was the least popular?
- 7) What percent of people said Pikachu was their favorite?
- 8) Which two characters did about half the people say was their favorite?
- 9) What percent of people said either Samus or Sonic was their favorite?
- 10) Which character was the most popular?


Answers

1. _____
2. _____
3. _____
4. _____
5. _____
6. _____
7. _____
8. _____
9. _____
10. _____



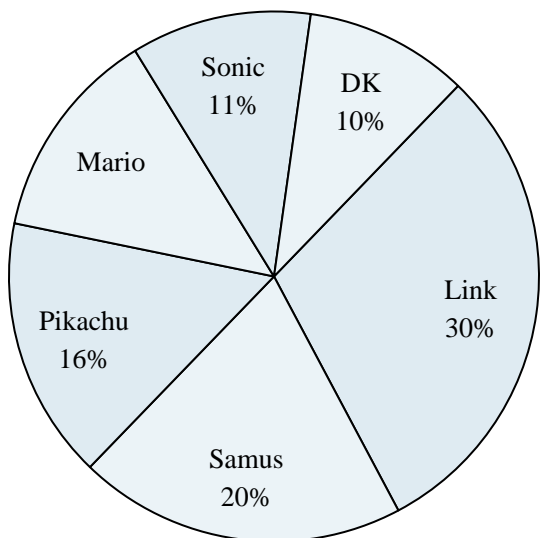
Use the graph to solve.

Favorite Pizza Topping



- 1) What percent of people said ham was their favorite?
- 2) Which topping was the least popular?
- 3) Which two toppings did about half the people like the best?
- 4) What percent of people said either sausage or mushrooms was their favorite?
- 5) Which topping was the most popular?

Favorite Game Character



- 6) Which character was the least popular?
- 7) What percent of people said Pikachu was their favorite?
- 8) Which two characters did about half the people say was their favorite?
- 9) What percent of people said either Samus or Sonic was their favorite?
- 10) Which character was the most popular?


Answers

1. 15%
2. anchovies
3. pepperoni & bacon
4. 30%
5. pepperoni
6. DK
7. 16%
8. Link & Samus
9. 31%
10. Link



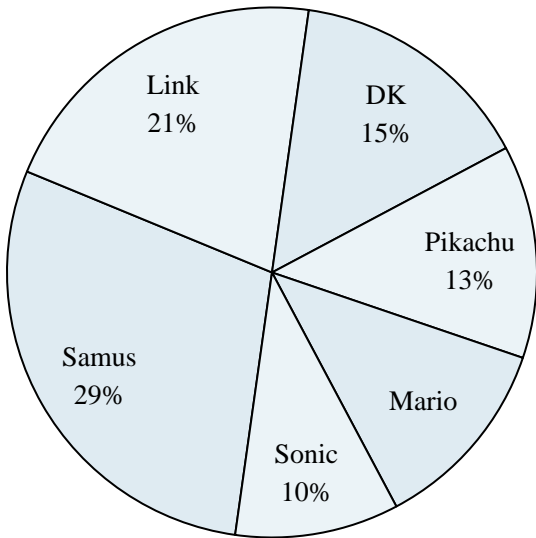
Use the graph to solve.

Time Spent on Homework



- 1) What is the combined amount of time spent on spelling and social studies?
- 2) The most time was spent on which subject?
- 3) What percent of the time was spent working on reading?
- 4) The least time was spent on which subject?
- 5) Which two subjects accounted for about half the time spent?

Favorite Game Character



- 6) What percent of people said DK was their favorite?
- 7) Which two characters did about half the people say was their favorite?
- 8) What percent of people said either Pikachu or Mario was their favorite?
- 9) Which character was the least popular?
- 10) Which character was the most popular?


Answers

1. _____
2. _____
3. _____
4. _____
5. _____
6. _____
7. _____
8. _____
9. _____
10. _____



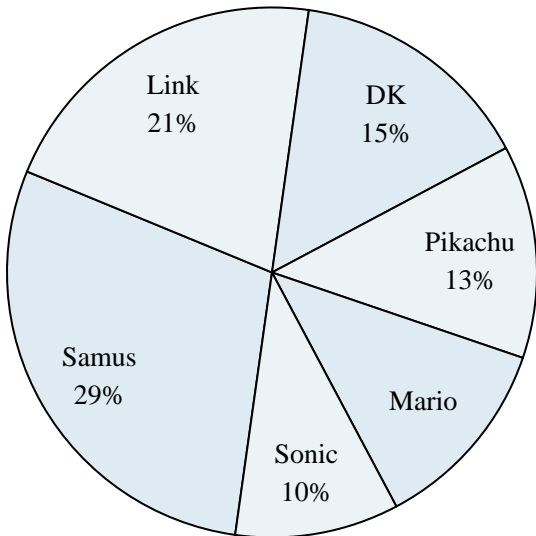
Use the graph to solve.

Time Spent on Homework



- 1) What is the combined amount of time spent on spelling and social studies?
- 2) The most time was spent on which subject?
- 3) What percent of the time was spent working on reading?
- 4) The least time was spent on which subject?
- 5) Which two subjects accounted for about half the time spent?

Favorite Game Character



- 6) What percent of people said DK was their favorite?
- 7) Which two characters did about half the people say was their favorite?
- 8) What percent of people said either Pikachu or Mario was their favorite?
- 9) Which character was the least popular?
- 10) Which character was the most popular?

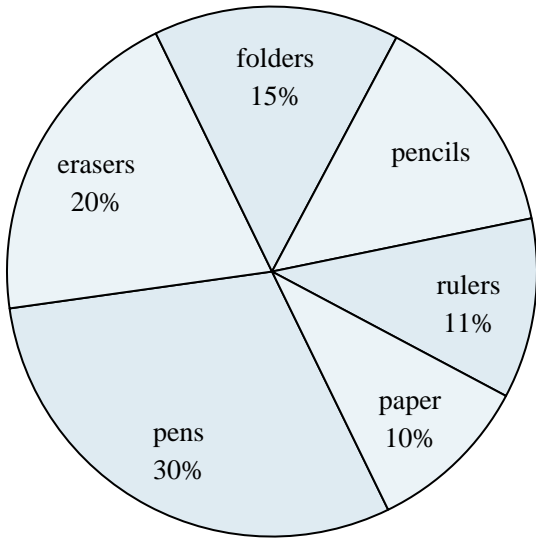
Answers

1. 25%
2. science
3. 20%
4. social studies
5. science & reading
6. 15%
7. Samus & Link
8. 25%
9. Sonic
10. Samus




Use the graph to solve.

School Store Sales



- 1) Which product sold the best?
- 2) Which two products accounted for about half the sales?
- 3) What percent of the sales were pencils?
- 4) Which product sold the worst?
- 5) What is the combined amount of pens and folders sold?

Favorite Pizza Topping



- 6) Which topping was the least popular?
- 7) What percent of people said anchovies was their favorite?
- 8) Which two toppings did about half the people like the best?
- 9) Which topping was the most popular?
- 10) What percent of people said either sausage or ham was their favorite?

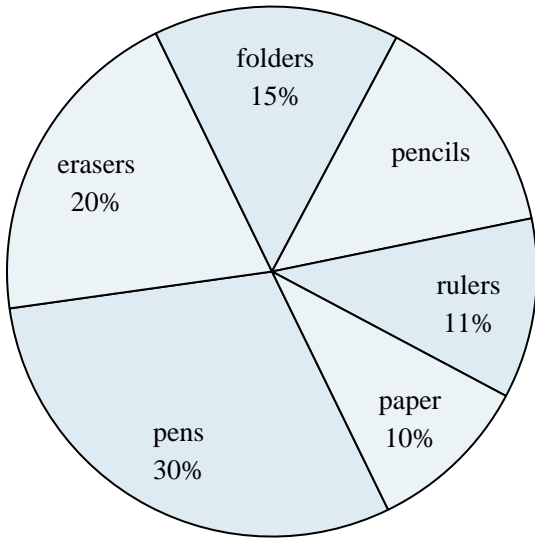
Answers

1. _____
2. _____
3. _____
4. _____
5. _____
6. _____
7. _____
8. _____
9. _____
10. _____



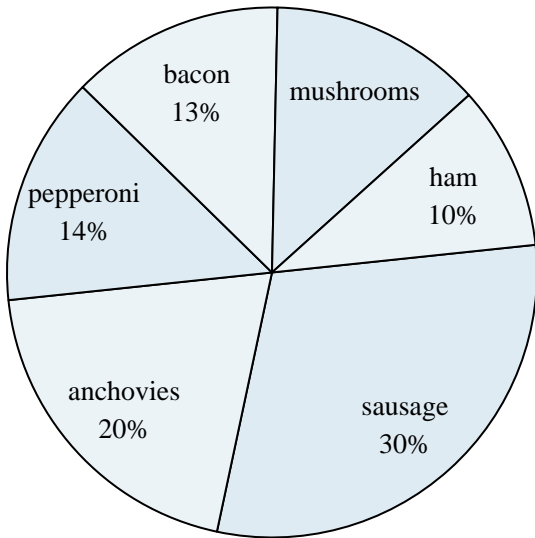
Use the graph to solve.

School Store Sales



- 1) Which product sold the best?
- 2) Which two products accounted for about half the sales?
- 3) What percent of the sales were pencils?
- 4) Which product sold the worst?
- 5) What is the combined amount of pens and folders sold?

Favorite Pizza Topping



- 6) Which topping was the least popular?
- 7) What percent of people said anchovies was their favorite?
- 8) Which two toppings did about half the people like the best?
- 9) Which topping was the most popular?
- 10) What percent of people said either sausage or ham was their favorite?

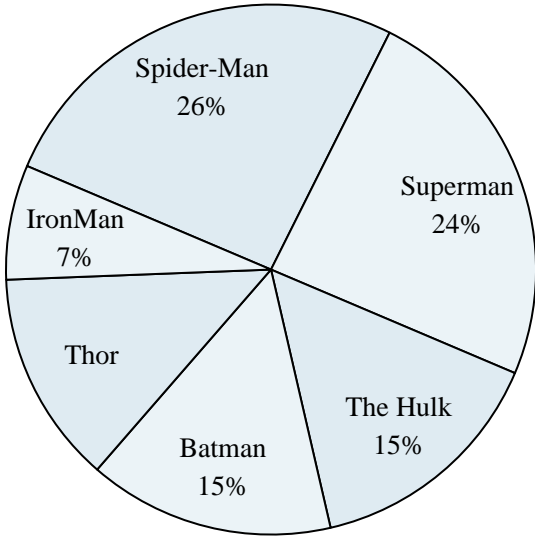
Answers

1. pens
2. pens & erasers
3. 14%
4. paper
5. 45%
6. ham
7. 20%
8. sausage & anchovies
9. sausage
10. 40%



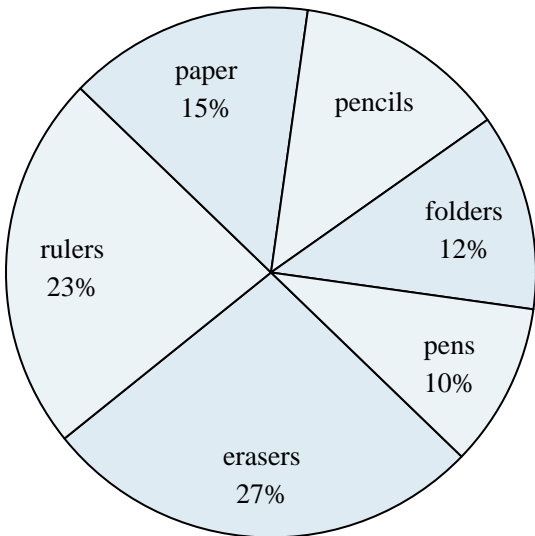
Use the graph to solve.

Favorite Superhero



- 1) Which hero was the least popular?
- 2) What percent of people said either Superman or Thor was their favorite?
- 3) Which two heroes did about half the people say was their favorite?
- 4) What percent of people said Spider-Man was their favorite?
- 5) Which hero was the most popular?

School Store Sales



- 6) What is the combined amount of paper and erasers sold?
- 7) Which two products accounted for about half the sales?
- 8) Which product sold the worst?
- 9) What percent of the sales were rulers?
- 10) Which product sold the best?

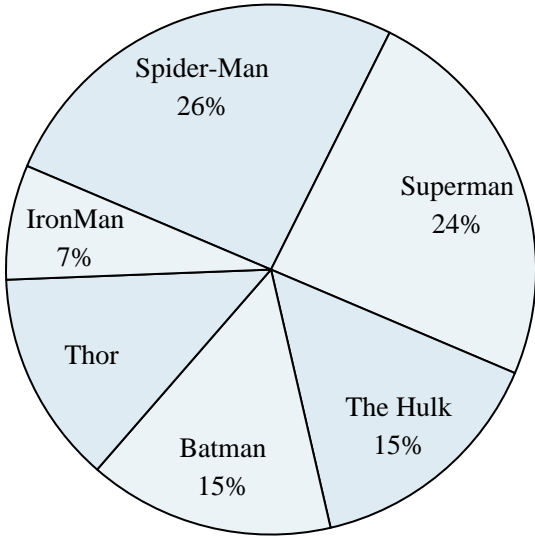
Answers

1. _____
2. _____
3. _____
4. _____
5. _____
6. _____
7. _____
8. _____
9. _____
10. _____



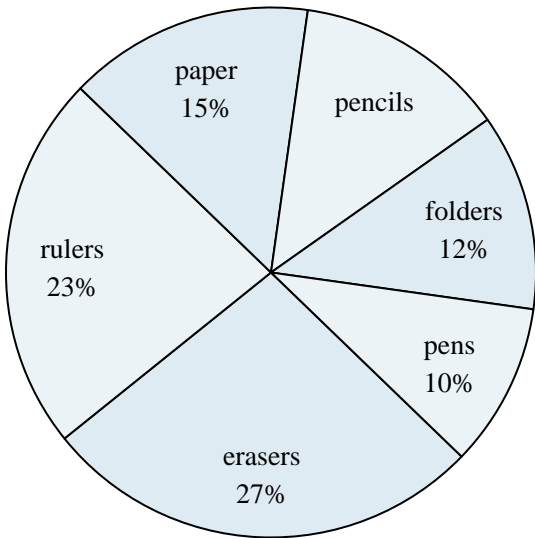
Use the graph to solve.

Favorite Superhero



- 1) Which hero was the least popular?
- 2) What percent of people said either Superman or Thor was their favorite?
- 3) Which two heroes did about half the people say was their favorite?
- 4) What percent of people said Spider-Man was their favorite?
- 5) Which hero was the most popular?

School Store Sales



- 6) What is the combined amount of paper and erasers sold?
- 7) Which two products accounted for about half the sales?
- 8) Which product sold the worst?
- 9) What percent of the sales were rulers?
- 10) Which product sold the best?

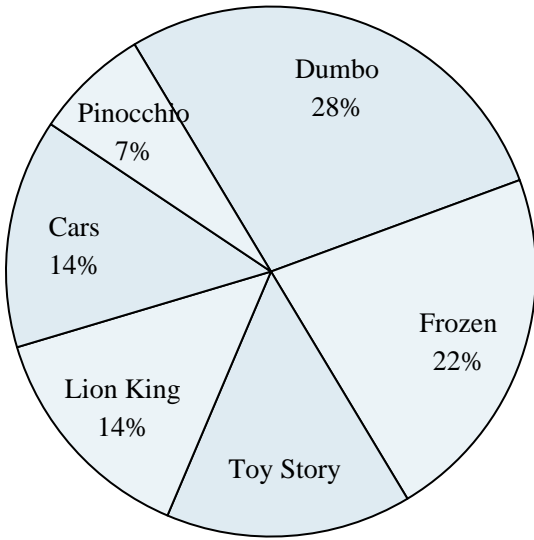
Answers

1. IronMan
2. 37%
3. Spider-Man & Superman
4. 26%
5. Spider-Man
6. 42%
7. erasers & rulers
8. pens
9. 23%
10. erasers



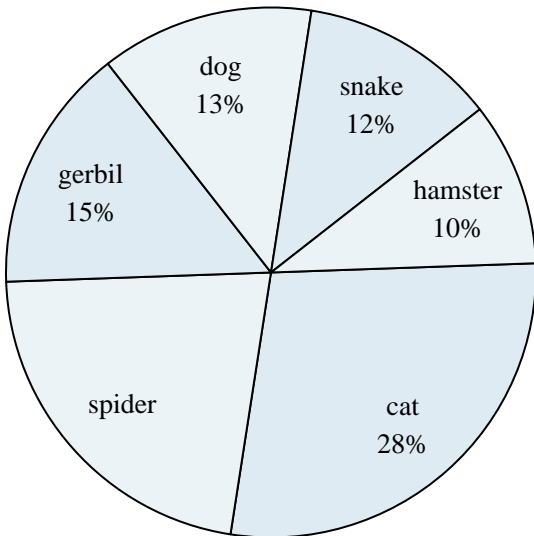
Use the graph to solve.

Favorite Disney Movie



- 1) What percent of people said either Cars or Dumbo was their favorite?
- 2) Which movie was the most popular?
- 3) Which movie was the least popular?
- 4) Which two movies did about half the people say was their favorite?
- 5) What percent of people said Lion King was their favorite?

Favorite Pet



- 6) What percent of people said the cat was their favorite pet?
- 7) What percent of people preferred either the hamster or the spider?
- 8) Which pet did the greatest number of people like?
- 9) Which two pets did about half the people say was their favorite?
- 10) Which pet did the least amount of people say was their favorite?

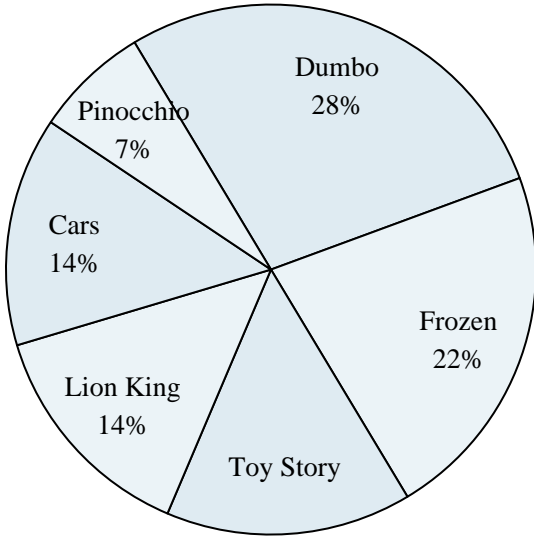
Answers

1. _____
2. _____
3. _____
4. _____
5. _____
6. _____
7. _____
8. _____
9. _____
10. _____



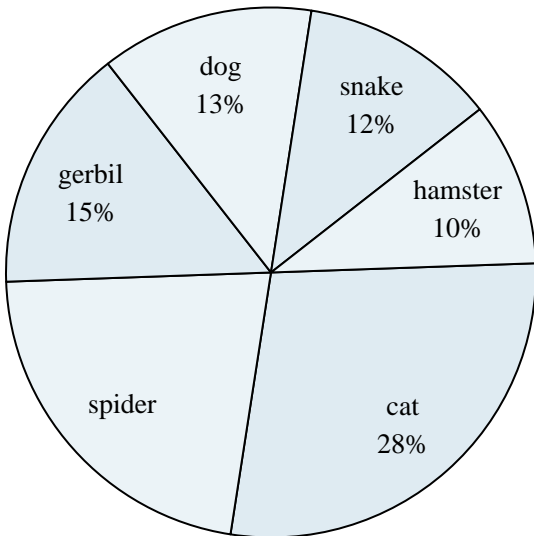
Use the graph to solve.

Favorite Disney Movie



- 1) What percent of people said either Cars or Dumbo was their favorite?
- 2) Which movie was the most popular?
- 3) Which movie was the least popular?
- 4) Which two movies did about half the people say was their favorite?
- 5) What percent of people said Lion King was their favorite?

Favorite Pet



- 6) What percent of people said the cat was their favorite pet?
- 7) What percent of people preferred either the hamster or the spider?
- 8) Which pet did the greatest number of people like?
- 9) Which two pets did about half the people say was their favorite?
- 10) Which pet did the least amount of people say was their favorite?

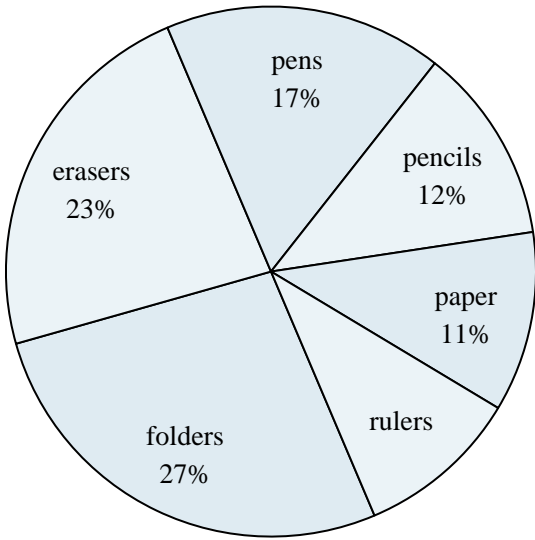
Answers

1. 42%
2. Dumbo
3. Pinocchio
4. Dumbo & Frozen
5. 14%
6. 28%
7. 32%
8. cat
9. cat & spider
10. hamster




Use the graph to solve.

School Store Sales



- 1) What percent of the sales were folders?
- 2) Which product sold the best?
- 3) Which product sold the worst?
- 4) Which two products accounted for about half the sales?
- 5) What is the combined amount of erasers and pencils sold?

Time Spent on Homework



- 6) What percent of the time was spent working on reading?
- 7) The most time was spent on which subject?
- 8) What is the combined amount of time spent on science and english?
- 9) The least time was spent on which subject?
- 10) Which two subjects accounted for about half the time spent?

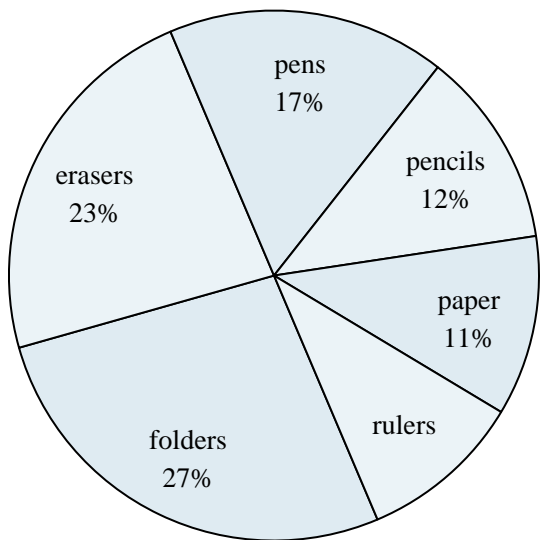
Answers

1. _____
2. _____
3. _____
4. _____
5. _____
6. _____
7. _____
8. _____
9. _____
10. _____




Use the graph to solve.

School Store Sales



- 1) What percent of the sales were folders?
- 2) Which product sold the best?
- 3) Which product sold the worst?
- 4) Which two products accounted for about half the sales?
- 5) What is the combined amount of erasers and pencils sold?

Time Spent on Homework



- 6) What percent of the time was spent working on reading?
- 7) The most time was spent on which subject?
- 8) What is the combined amount of time spent on science and english?
- 9) The least time was spent on which subject?
- 10) Which two subjects accounted for about half the time spent?

Answers

1. 27%
2. folders
3. rulers
4. folders & erasers
5. 35%
6. 15%
7. social studies
8. 31%
9. english
10. social studies & science