



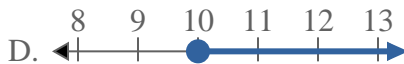
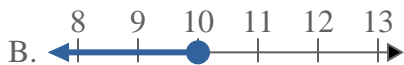
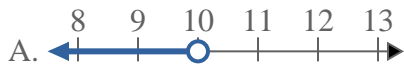
Solve each problem.

**Answers**

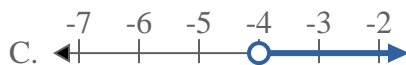
1) Which option best shows  $X \leq 17$



2) Which option best shows  $X \leq 10$



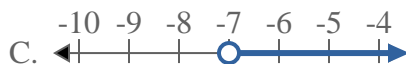
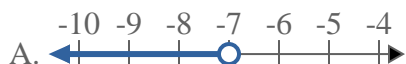
3) Which option best shows  $X > -4$



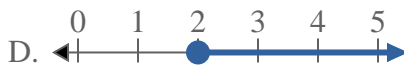
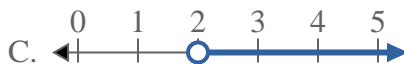
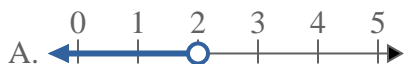
4) Which option best shows  $X < -17$



5) Which option best shows  $X \geq -7$



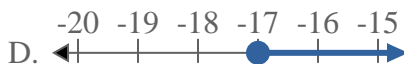
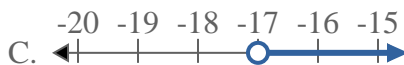
6) Which option best shows  $X < 2$



7) Which option best shows  $X < 11$



8) Which option best shows  $X < -17$



1. \_\_\_\_\_
2. \_\_\_\_\_
3. \_\_\_\_\_
4. \_\_\_\_\_
5. \_\_\_\_\_
6. \_\_\_\_\_
7. \_\_\_\_\_
8. \_\_\_\_\_

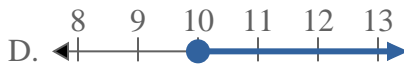
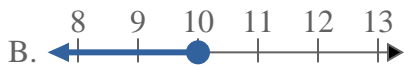
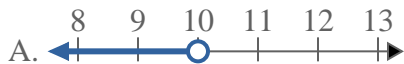


Solve each problem.

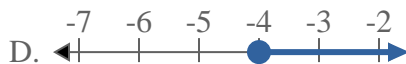
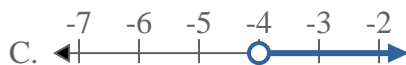
1) Which option best shows  $X \leq 17$



2) Which option best shows  $X \leq 10$



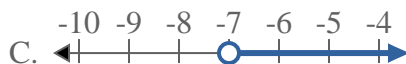
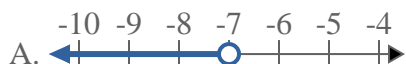
3) Which option best shows  $X > -4$



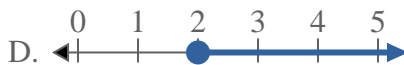
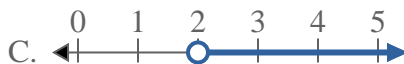
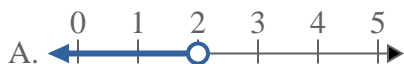
4) Which option best shows  $X < -17$



5) Which option best shows  $X \geq -7$



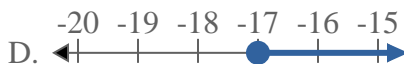
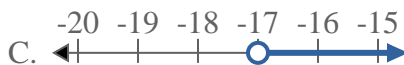
6) Which option best shows  $X < 2$



7) Which option best shows  $X < 11$



8) Which option best shows  $X < -17$



**Answers**

1.     **B**    

2.     **B**    

3.     **C**    

4.     **A**    

5.     **D**    

6.     **A**    

7.     **A**    

8.     **A**