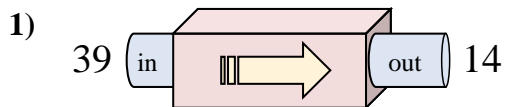


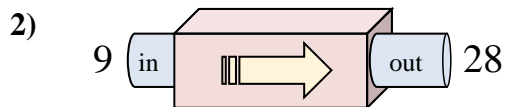


Determine which rule the function machine is using.

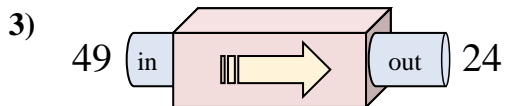
Answers



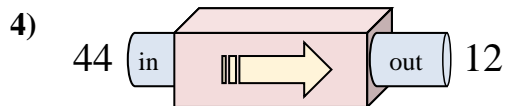
- A. Subtract 25
- B. Subtract 24
- C. Subtract 26
- D. Subtract 21



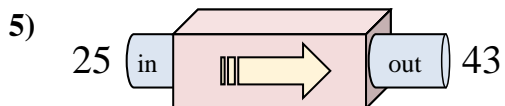
- A. Add 23
- B. Add 19
- C. Add 14
- D. Add 22



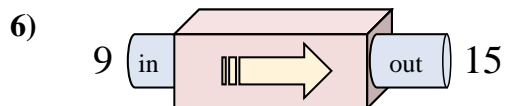
- A. Subtract 25
- B. Subtract 30
- C. Add 23
- D. Subtract 22



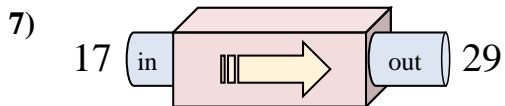
- A. Subtract 34
- B. Add 37
- C. Subtract 32
- D. Subtract 31



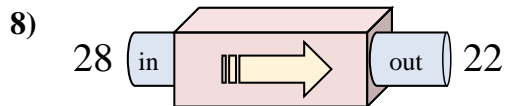
- A. Add 18
- B. Add 20
- C. Add 19
- D. Add 22



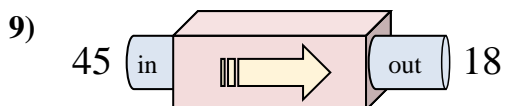
- A. Subtract 7
- B. Add 5
- C. Add 3
- D. Add 6



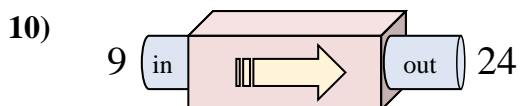
- A. Add 15
- B. Subtract 10
- C. Add 12
- D. Add 10



- A. Add 7
- B. Subtract 6
- C. Add 2
- D. Subtract 10



- A. Subtract 26
- B. Add 28
- C. Subtract 27
- D. Subtract 22

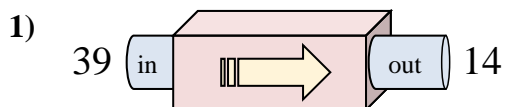


- A. Subtract 13
- B. Add 19
- C. Add 15
- D. Add 10

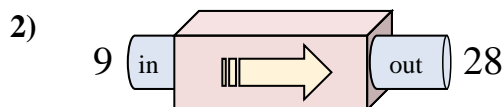
1. _____
2. _____
3. _____
4. _____
5. _____
6. _____
7. _____
8. _____
9. _____
10. _____



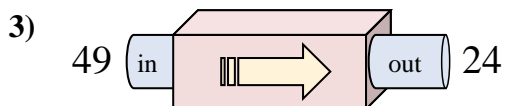
Determine which rule the function machine is using.



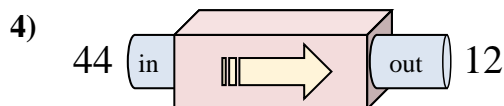
- A. Subtract 25
- B. Subtract 24
- C. Subtract 26
- D. Subtract 21



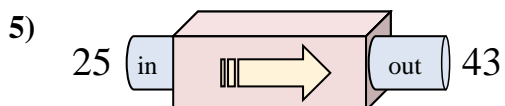
- A. Add 23
- B. Add 19
- C. Add 14
- D. Add 22



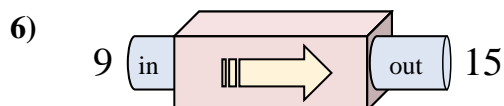
- A. Subtract 25
- B. Subtract 30
- C. Add 23
- D. Subtract 22



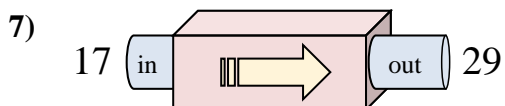
- A. Subtract 34
- B. Add 37
- C. Subtract 32
- D. Subtract 31



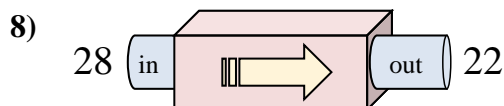
- A. Add 18
- B. Add 20
- C. Add 19
- D. Add 22



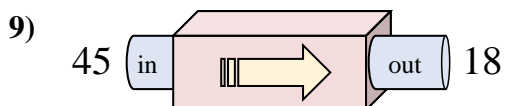
- A. Subtract 7
- B. Add 5
- C. Add 3
- D. Add 6



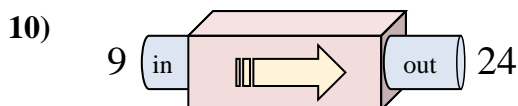
- A. Add 15
- B. Subtract 10
- C. Add 12
- D. Add 10



- A. Add 7
- B. Subtract 6
- C. Add 2
- D. Subtract 10



- A. Subtract 26
- B. Add 28
- C. Subtract 27
- D. Subtract 22



- A. Subtract 13
- B. Add 19
- C. Add 15
- D. Add 10

Answers1. **A**2. **B**3. **A**4. **C**5. **A**6. **D**7. **C**8. **B**9. **C**10. **C**