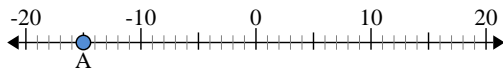




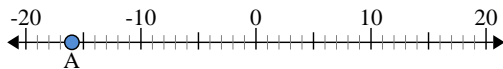
Use the numberlines to find the absolute value.

1) a. What is the value of 'A'?



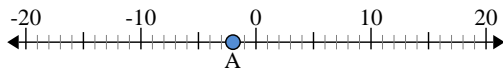
b. How far is 'A' from 0 (absolute value)?

2) a. What is the value of 'A'?



b. How far is 'A' from 0 (absolute value)?

3) a. What is the value of 'A'?



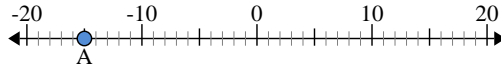
Answers

- 1. _____
- 2. _____
- 3. _____
- 4. _____
- 5. _____
- 6. _____
- 7. _____
- 8. _____
- 9. _____
- 10. _____



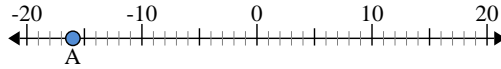
Use the numberlines to find the absolute value.

1) a. What is the value of 'A'?



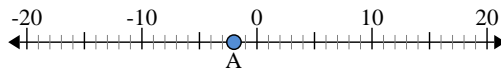
b. How far is 'A' from 0 (absolute value)?

2) a. What is the value of 'A'?



b. How far is 'A' from 0 (absolute value)?

3) a. What is the value of 'A'?



Answers

- 1. -15 15
- 2. -16 16
- 3. -2 2
- 4. 6 6
- 5. -7 7
- 6. 14 14
- 7. -17 17
- 8. 3 3
- 9. -10 10
- 10. 13 13