




Solve each problem.


Answers

1) Which letter best shows -68?




1. _____

2) Which letter best shows -71?




2. _____

3) Which letter best shows -10?



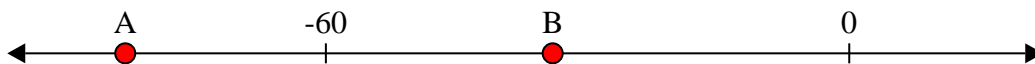
3. _____

4) Which letter best shows -10?




4. _____

5) Which letter best shows -34?




5. _____

6) Which letter best shows -41?




6. _____

7) Which letter best shows -124?




7. _____

8) Which letter best shows -26?




8. _____

9) Which letter best shows -99?



9. _____

10) Which letter best shows -51?

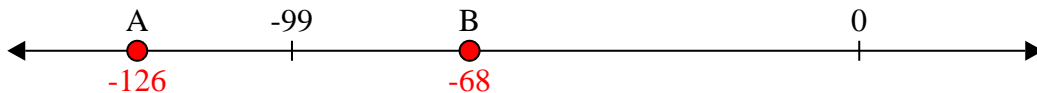


10. _____

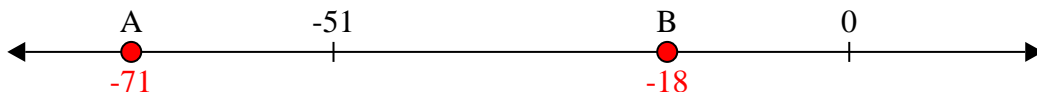


Solve each problem.

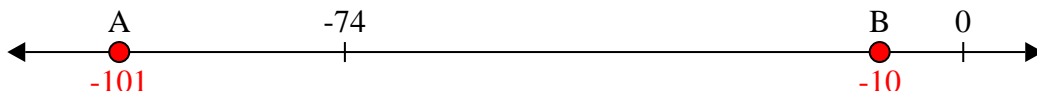
1) Which letter best shows -68?



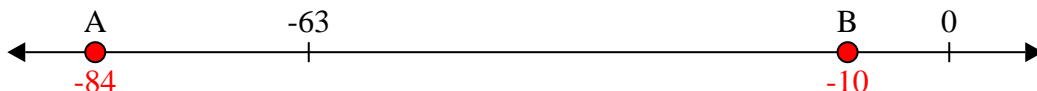
2) Which letter best shows -71?



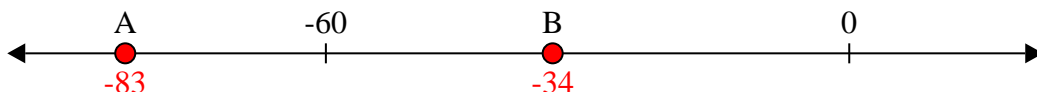
3) Which letter best shows -10?




4) Which letter best shows -10?




5) Which letter best shows -34?




6) Which letter best shows -41?



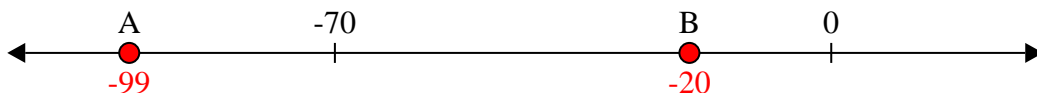
7) Which letter best shows -124?



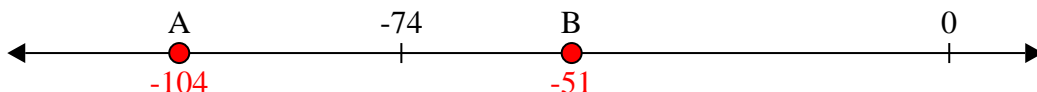
8) Which letter best shows -26?



9) Which letter best shows -99?



10) Which letter best shows -51?



Answers

1. **B**

2. **A**

3. **B**

4. **B**

5. **B**

6. **B**

7. **A**

8. **B**

9. **A**

10. **B**