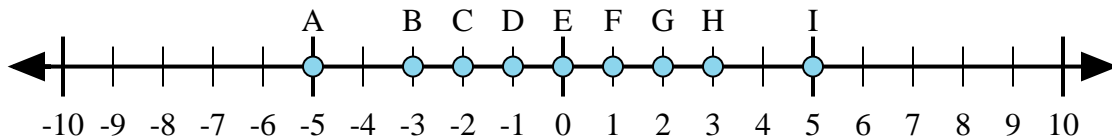




Determine which letter in the numberline best represents the answer to each problem.

Answers



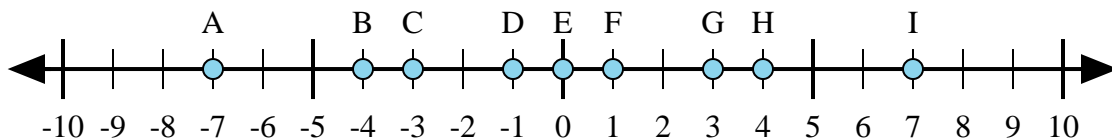
1)  $3 + (-2) =$

2)  $(-2) + 3 =$

3)  $2 + 3 =$

4)  $(-2) + (-3) =$

5)  $2 + (-3) =$



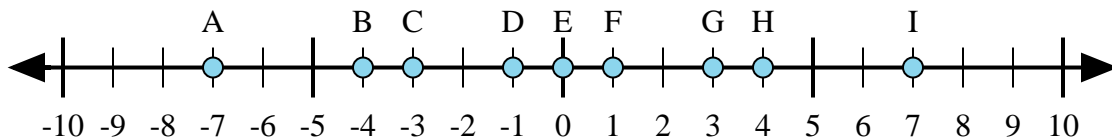
6)  $4 + (-3) =$

7)  $3 + 4 =$

8)  $(-4) + 3 =$

9)  $(-3) + 4 =$

10)  $(-3) + (-4) =$



11)  $4 + 3 =$

12)  $4 + (-3) =$

13)  $(-4) + 3 =$

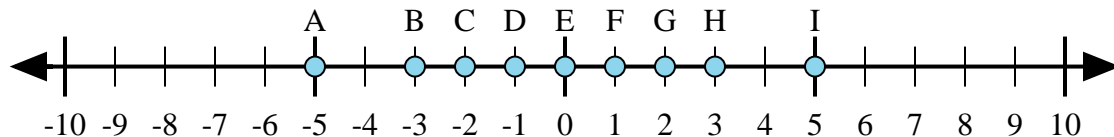
14)  $(-3) + 4 =$

15)  $(-4) + (-3) =$

1. \_\_\_\_\_
2. \_\_\_\_\_
3. \_\_\_\_\_
4. \_\_\_\_\_
5. \_\_\_\_\_
6. \_\_\_\_\_
7. \_\_\_\_\_
8. \_\_\_\_\_
9. \_\_\_\_\_
10. \_\_\_\_\_
11. \_\_\_\_\_
12. \_\_\_\_\_
13. \_\_\_\_\_
14. \_\_\_\_\_
15. \_\_\_\_\_



Determine which letter in the numberline best represents the answer to each problem.



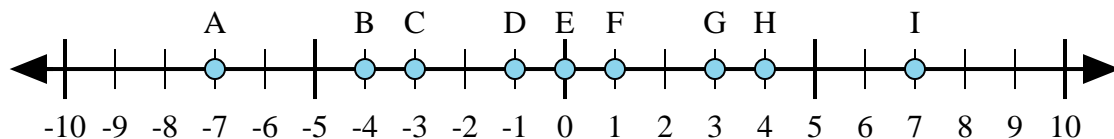
1)  $3 + (-2) =$

2)  $(-2) + 3 =$

3)  $2 + 3 =$

4)  $(-2) + (-3) =$

5)  $2 + (-3) =$



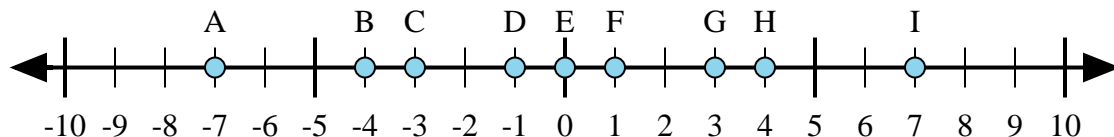
6)  $4 + (-3) =$

7)  $3 + 4 =$

8)  $(-4) + 3 =$

9)  $(-3) + 4 =$

10)  $(-3) + (-4) =$



11)  $4 + 3 =$

12)  $4 + (-3) =$

13)  $(-4) + 3 =$

14)  $(-3) + 4 =$

15)  $(-4) + (-3) =$

Answers1. **F**2. **F**3. **I**4. **A**5. **D**6. **F**7. **I**8. **D**9. **F**10. **A**11. **I**12. **F**13. **D**14. **F**15. **A**