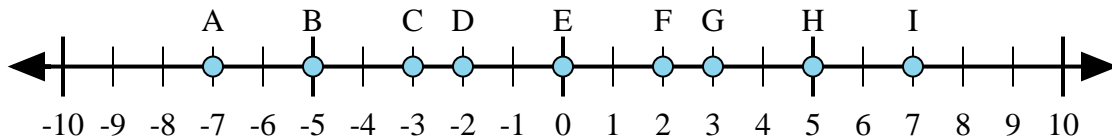




Determine which letter in the numberline best represents the answer to each problem.

Answers



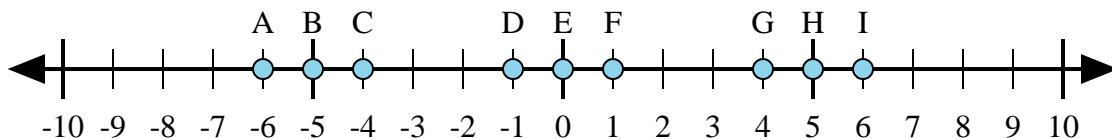
1) $2 + (-5) =$

2) $(-5) + (-2) =$

3) $(-5) + 2 =$

4) $5 + (-2) =$

5) $(-2) + 5 =$



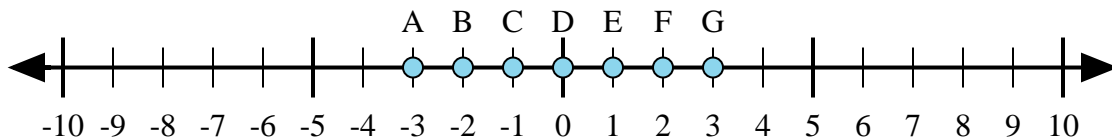
6) $1 + 5 =$

7) $(-1) + 5 =$

8) $5 + (-1) =$

9) $(-1) + (-5) =$

10) $(-5) + 1 =$



11) $(-1) + 2 =$

12) $1 + (-2) =$

13) $2 + 1 =$

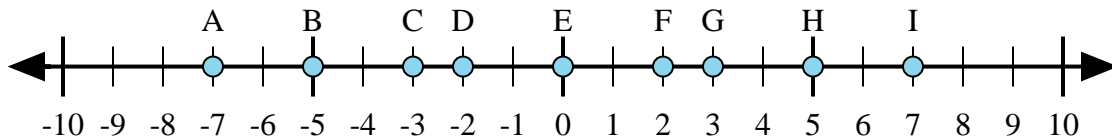
14) $2 + (-1) =$

15) $(-2) + 1 =$

1. _____
2. _____
3. _____
4. _____
5. _____
6. _____
7. _____
8. _____
9. _____
10. _____
11. _____
12. _____
13. _____
14. _____
15. _____



Determine which letter in the numberline best represents the answer to each problem.



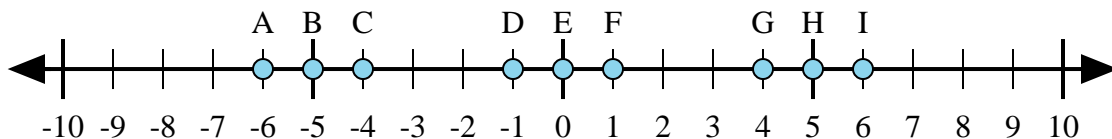
1) $2 + (-5) =$

2) $(-5) + (-2) =$

3) $(-5) + 2 =$

4) $5 + (-2) =$

5) $(-2) + 5 =$



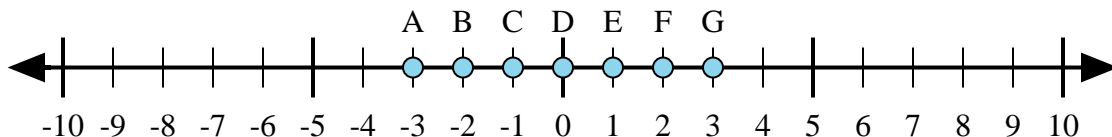
6) $1 + 5 =$

7) $(-1) + 5 =$

8) $5 + (-1) =$

9) $(-1) + (-5) =$

10) $(-5) + 1 =$



11) $(-1) + 2 =$

12) $1 + (-2) =$

13) $2 + 1 =$

14) $2 + (-1) =$

15) $(-2) + 1 =$

Answers

1. C

2. A

3. C

4. G

5. G

6. I

7. G

8. G

9. A

10. C

11. E

12. C

13. G

14. E

15. C