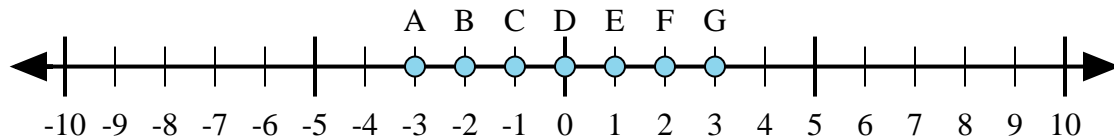




Determine which letter in the numberline best represents the answer to each problem.

Answers



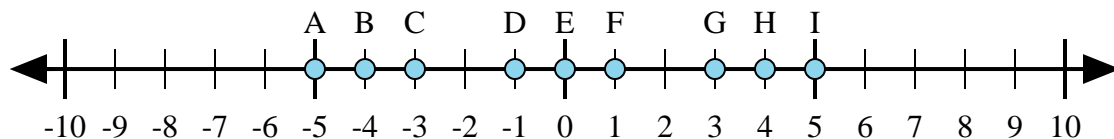
1)  $1 + 2 =$

2)  $(-1) + (-2) =$

3)  $(-2) + 1 =$

4)  $2 + (-1) =$

5)  $1 + (-2) =$



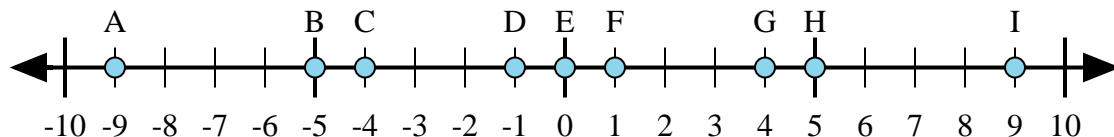
6)  $4 + (-1) =$

7)  $(-4) + (-1) =$

8)  $(-4) + 1 =$

9)  $(-1) + 4 =$

10)  $1 + (-4) =$



11)  $5 + (-4) =$

12)  $4 + (-5) =$

13)  $(-5) + 4 =$

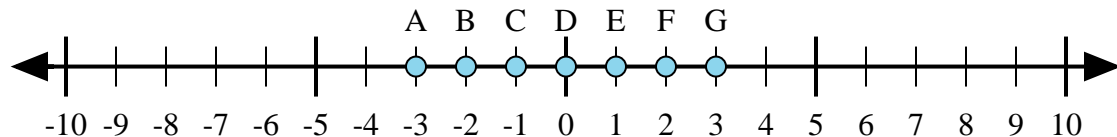
14)  $5 + 4 =$

15)  $(-4) + 5 =$

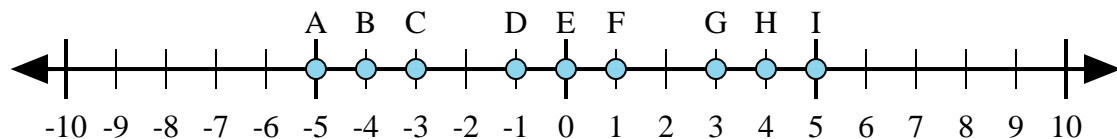
1. \_\_\_\_\_
2. \_\_\_\_\_
3. \_\_\_\_\_
4. \_\_\_\_\_
5. \_\_\_\_\_
6. \_\_\_\_\_
7. \_\_\_\_\_
8. \_\_\_\_\_
9. \_\_\_\_\_
10. \_\_\_\_\_
11. \_\_\_\_\_
12. \_\_\_\_\_
13. \_\_\_\_\_
14. \_\_\_\_\_
15. \_\_\_\_\_



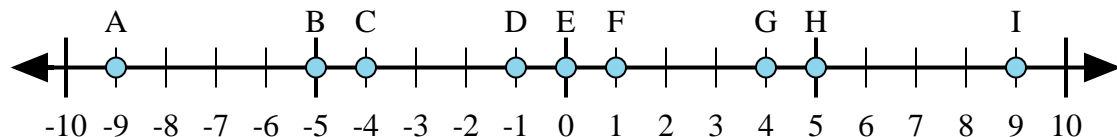
Determine which letter in the numberline best represents the answer to each problem.



- 1)  $1 + 2 =$
- 2)  $(-1) + (-2) =$
- 3)  $(-2) + 1 =$
- 4)  $2 + (-1) =$
- 5)  $1 + (-2) =$



- 6)  $4 + (-1) =$
- 7)  $(-4) + (-1) =$
- 8)  $(-4) + 1 =$
- 9)  $(-1) + 4 =$
- 10)  $1 + (-4) =$



- 11)  $5 + (-4) =$
- 12)  $4 + (-5) =$
- 13)  $(-5) + 4 =$
- 14)  $5 + 4 =$
- 15)  $(-4) + 5 =$

Answers

- 1.     **G**
- 2.     **A**
- 3.     **C**
- 4.     **E**
- 5.     **C**
- 6.     **G**
- 7.     **A**
- 8.     **C**
- 9.     **G**
- 10.     **C**
- 11.     **F**
- 12.     **D**
- 13.     **D**
- 14.     **I**
- 15.     **F**