



**Solve each problem. Use the numberline if needed.**

## Answers

1)  $(-4) - (-1) =$  \_\_\_\_\_



1. \_\_\_\_\_

2)  $(-11) + 14 =$  \_\_\_\_\_



2. \_\_\_\_\_

3)  $(-8) - 12 =$  \_\_\_\_\_



3. \_\_\_\_\_

4)  $4 + (-5) =$  \_\_\_\_\_



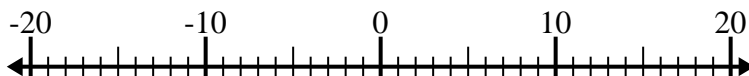
4. \_\_\_\_\_

5)  $11 - (-3) =$  \_\_\_\_\_



5. \_\_\_\_\_

6)  $(-13) - 6 =$  \_\_\_\_\_



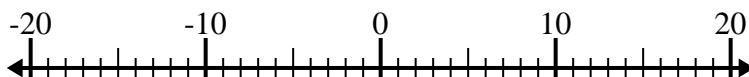
6. \_\_\_\_\_

7)  $12 + (-8) =$  \_\_\_\_\_



7. \_\_\_\_\_

8)  $(-7) - (-12) =$  \_\_\_\_\_



8. \_\_\_\_\_

9)  $(-3) + (-1) =$  \_\_\_\_\_



9. \_\_\_\_\_

10)  $(-5) + 2 =$  \_\_\_\_\_



10. \_\_\_\_\_



Solve each problem. Use the numberline if needed.

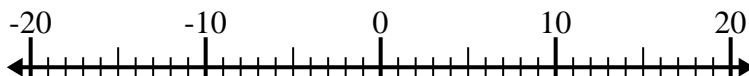
1)  $(-4) - (-1) = \underline{-3}$



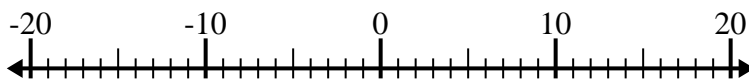
2)  $(-11) + 14 = \underline{3}$



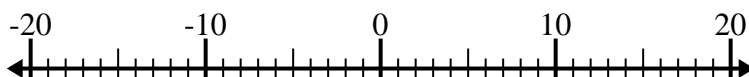
3)  $(-8) - 12 = \underline{-20}$



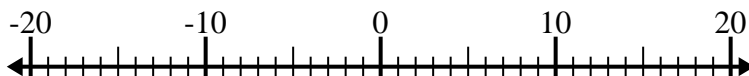
4)  $4 + (-5) = \underline{-1}$



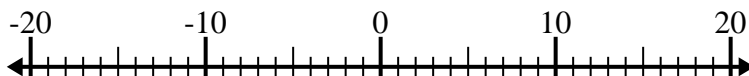
5)  $11 - (-3) = \underline{14}$



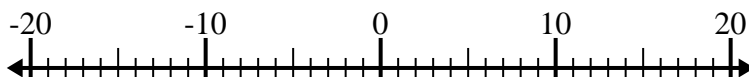
6)  $(-13) - 6 = \underline{-19}$



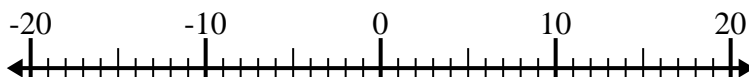
7)  $12 + (-8) = \underline{4}$



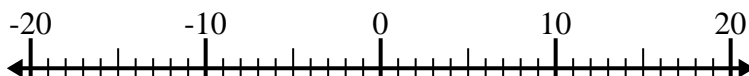
8)  $(-7) - (-12) = \underline{5}$



9)  $(-3) + (-1) = \underline{-4}$



10)  $(-5) + 2 = \underline{-3}$

**Answers**1. **-3**2. **3**3. **-20**4. **-1**5. **14**6. **-19**7. **4**8. **5**9. **-4**10. **-3**