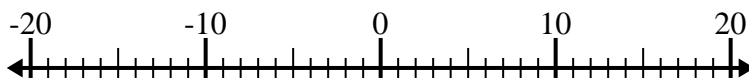




Solve each problem. Use the numberline if needed.

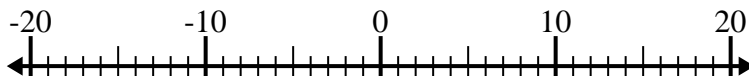
Answers

1) $(-2) + (-8) =$ _____



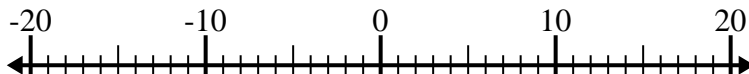
1. _____

2) $9 - (-7) =$ _____



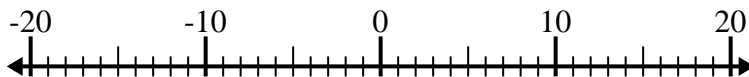
2. _____

3) $(-7) + 13 =$ _____



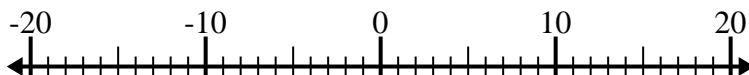
3. _____

4) $(-11) - 3 =$ _____



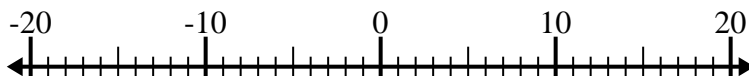
4. _____

5) $1 + (-2) =$ _____



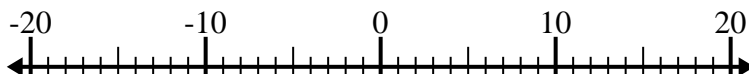
5. _____

6) $(-8) - (-4) =$ _____



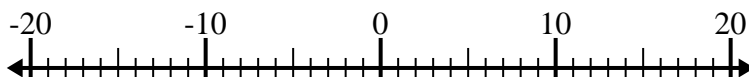
6. _____

7) $(-4) - (-13) =$ _____



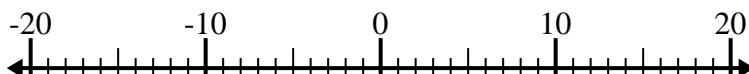
7. _____

8) $1 - (-14) =$ _____



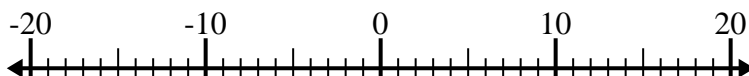
8. _____

9) $(-7) + 15 =$ _____



9. _____

10) $(-5) + (-4) =$ _____



10. _____



Solve each problem. Use the numberline if needed.

1) $(-2) + (-8) = \underline{-10}$



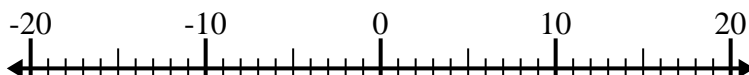
2) $9 - (-7) = \underline{16}$



3) $(-7) + 13 = \underline{6}$



4) $(-11) - 3 = \underline{-14}$



5) $1 + (-2) = \underline{-1}$



6) $(-8) - (-4) = \underline{-4}$



7) $(-4) - (-13) = \underline{9}$



8) $1 - (-14) = \underline{15}$



9) $(-7) + 15 = \underline{8}$



10) $(-5) + (-4) = \underline{-9}$

**Answers**1. **-10**2. **16**3. **6**4. **-14**5. **-1**6. **-4**7. **9**8. **15**9. **8**10. **-9**