



Solve each problem. Use the numberline if needed.

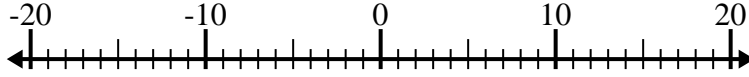
Answers

1) $(-9) - 11 =$ _____



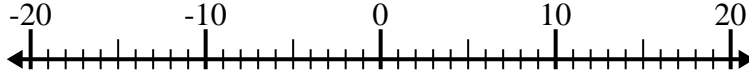
1. _____

2) $(-14) - (-1) =$ _____



2. _____

3) $7 + (-1) =$ _____



3. _____

4) $(-13) + (-3) =$ _____



4. _____

5) $11 + (-15) =$ _____



5. _____

6) $10 - (-4) =$ _____



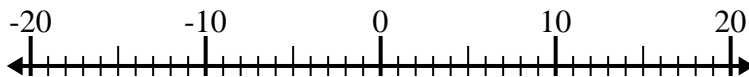
6. _____

7) $(-4) - 9 =$ _____



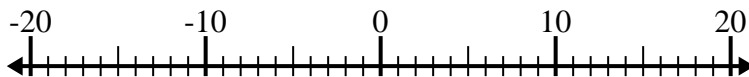
7. _____

8) $3 - (-14) =$ _____



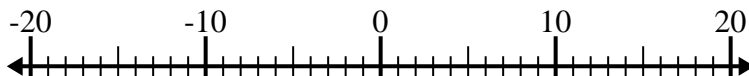
8. _____

9) $(-3) + 6 =$ _____



9. _____

10) $(-10) - (-7) =$ _____



10. _____



Solve each problem. Use the numberline if needed.

1) $(-9) - 11 = \underline{-20}$



2) $(-14) - (-1) = \underline{-13}$



3) $7 + (-1) = \underline{6}$



4) $(-13) + (-3) = \underline{-16}$



5) $11 + (-15) = \underline{-4}$



6) $10 - (-4) = \underline{14}$



7) $(-4) - 9 = \underline{-13}$



8) $3 - (-14) = \underline{17}$



9) $(-3) + 6 = \underline{3}$



10) $(-10) - (-7) = \underline{-3}$

**Answers**1. **-20**2. **-13**3. **6**4. **-16**5. **-4**6. **14**7. **-13**8. **17**9. **3**10. **-3**