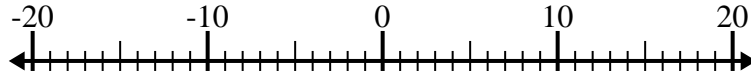




Solve each problem. Use the numberline if needed.

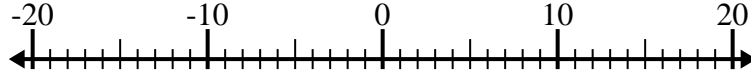
**Answers**

1)  $(-11) - 2 =$  \_\_\_\_\_



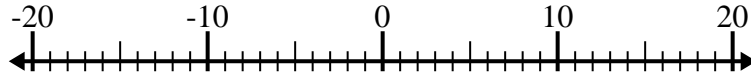
1. \_\_\_\_\_

2)  $(-2) - (-1) =$  \_\_\_\_\_



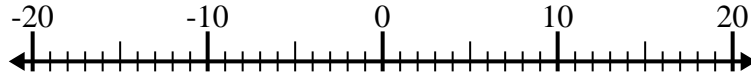
2. \_\_\_\_\_

3)  $4 - (-14) =$  \_\_\_\_\_



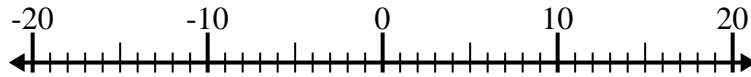
3. \_\_\_\_\_

4)  $8 - (-4) =$  \_\_\_\_\_



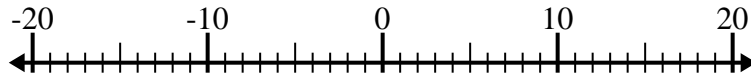
4. \_\_\_\_\_

5)  $(-8) + (-12) =$  \_\_\_\_\_



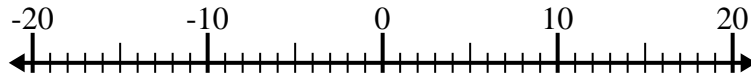
5. \_\_\_\_\_

6)  $(-14) + 9 =$  \_\_\_\_\_



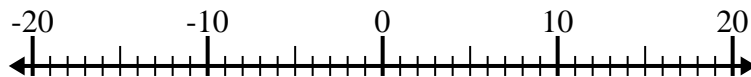
6. \_\_\_\_\_

7)  $(-6) + (-8) =$  \_\_\_\_\_



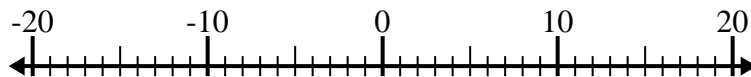
7. \_\_\_\_\_

8)  $15 + (-6) =$  \_\_\_\_\_



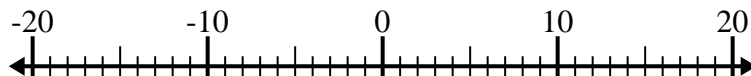
8. \_\_\_\_\_

9)  $7 + (-11) =$  \_\_\_\_\_



9. \_\_\_\_\_

10)  $(-5) - 4 =$  \_\_\_\_\_

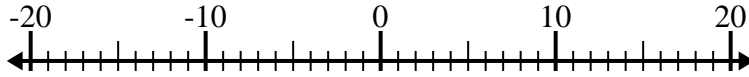


10. \_\_\_\_\_

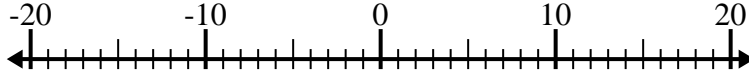


Solve each problem. Use the numberline if needed.

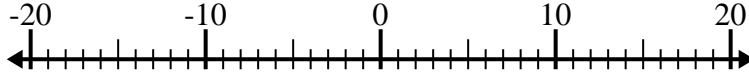
1)  $(-11) - 2 = \underline{-13}$



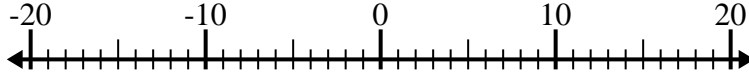
2)  $(-2) - (-1) = \underline{-1}$



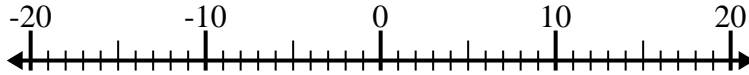
3)  $4 - (-14) = \underline{18}$



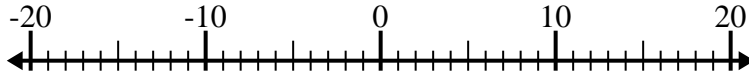
4)  $8 - (-4) = \underline{12}$



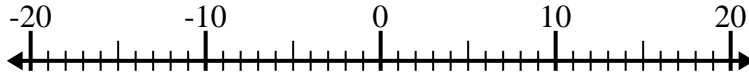
5)  $(-8) + (-12) = \underline{-20}$



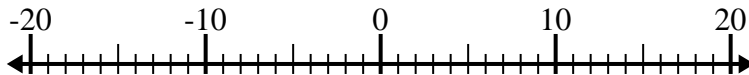
6)  $(-14) + 9 = \underline{-5}$



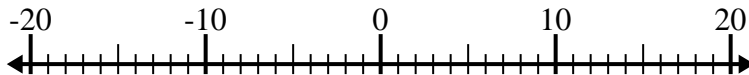
7)  $(-6) + (-8) = \underline{-14}$



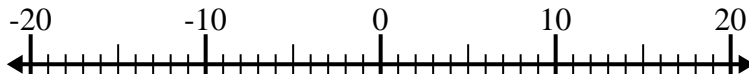
8)  $15 + (-6) = \underline{9}$



9)  $7 + (-11) = \underline{-4}$



10)  $(-5) - 4 = \underline{-9}$



Answers

1. **-13**

2. **-1**

3. **18**

4. **12**

5. **-20**

6. **-5**

7. **-14**

8. **9**

9. **-4**

10. **-9**