



Write each array as a multiplication problem and solve.



Answers

Ex. 2 × 7 = 14

1. _____

2. _____

3. _____

4. _____

5. _____

6. _____

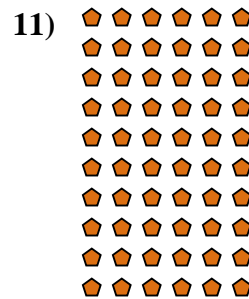

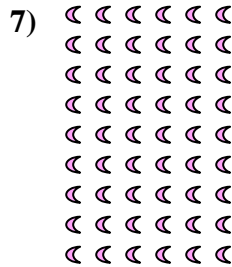


7. _____

8. _____

9. _____

10. _____

11. _____





Write each array as a multiplication problem and solve.



Answers

Ex. 2 × 7 = 14

1. 2 × 2 = 4

2. 10 × 4 = 40

3. 6 × 10 = 60

4. 7 × 7 = 49

5. 6 × 9 = 54

6. 6 × 6 = 36

7. 9 × 6 = 54

8. 2 × 9 = 18

9. 6 × 2 = 12

10. 4 × 9 = 36

11. 10 × 6 = 60

