



Express each set as a multiplication problem.

Answers

Ex)

Ex. $2 \times 2 = 4$

1)

1. _____

2)

2. _____

3)

3. _____

4)

4. _____

5)

5. _____

6)

6. _____

7)


7. _____

8)

8. _____

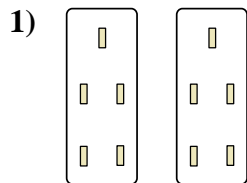


Express each set as a multiplication problem.



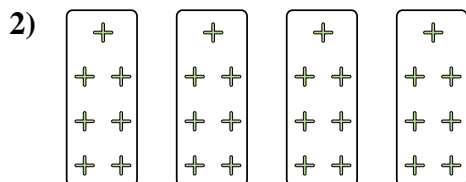
Answers

Ex. 2×2=4




1. 2×5=10

2. 4×7=28



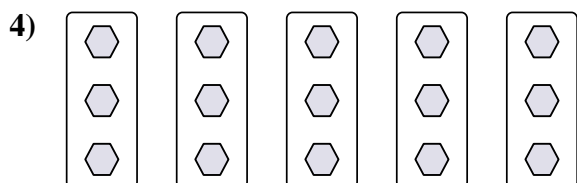
3. 9×2=18

4. 5×3=15



5. 10×2=20

6. 8×5=40



7. 10×9=90

8. 6×5=30

