


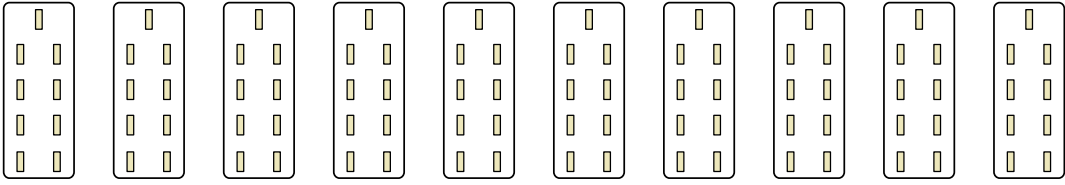


Express each set as a multiplication problem.

Ex) 

Answers

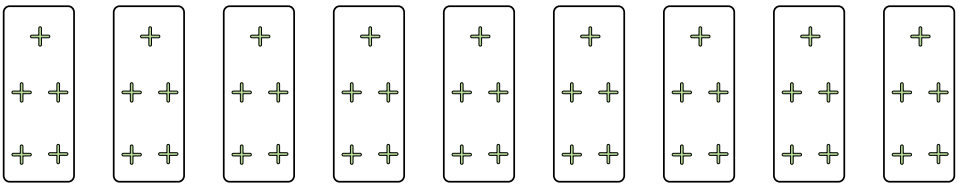
Ex. $6 \times 3 = 18$

1) 

1. _____

2. _____


3. _____

2) 

4. _____

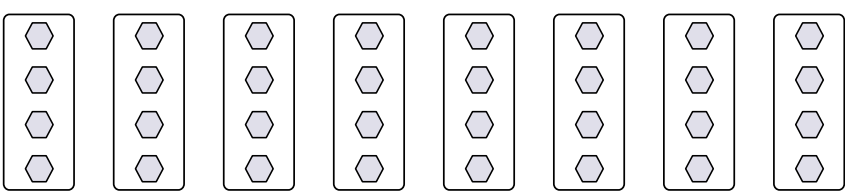
5. _____

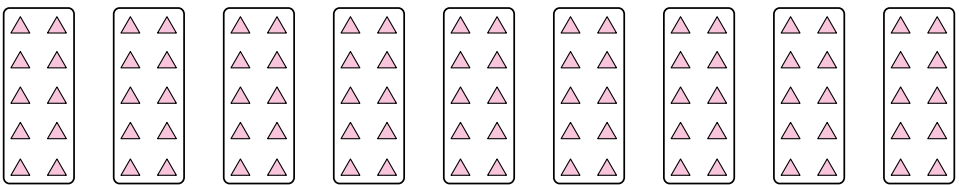
6. _____

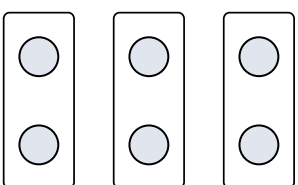
3) 


7. _____

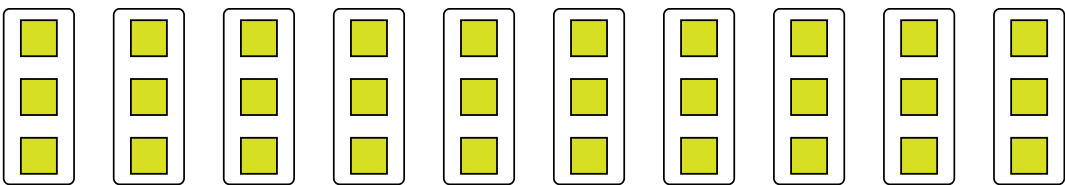
8. _____

4) 

5) 

6) 

7) 

8) 



Express each set as a multiplication problem.

Ex)

Ex. $6 \times 3 = 18$

1)

1. $10 \times 9 = 90$

2. $9 \times 5 = 45$

2)

3. $5 \times 2 = 10$

4. $8 \times 4 = 32$

3)

5. $9 \times 10 = 90$

6. $3 \times 2 = 6$

4)

7. $4 \times 9 = 36$

8. $10 \times 3 = 30$

5)

6)

7)

8)

Answers