



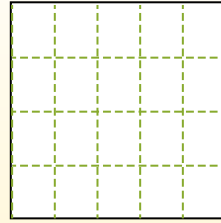
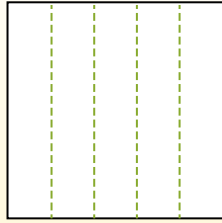
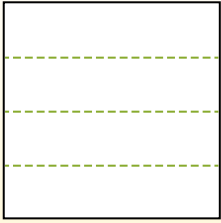
Partition the shape as described and then count to find the number of boxes.

Answers

Rows go left to right.

Columns go up and down.

This has 4 rows and 5 columns.  
There are 20 boxes total.



1. \_\_\_\_\_
2. \_\_\_\_\_
3. \_\_\_\_\_
4. \_\_\_\_\_
5. \_\_\_\_\_
6. \_\_\_\_\_
7. \_\_\_\_\_
8. \_\_\_\_\_
9. \_\_\_\_\_

1) 4 rows  
2 columns



2) 2 rows  
2 columns



3) 5 rows  
3 columns



4) 5 rows  
4 columns



5) 3 rows  
2 columns



6) 4 rows  
3 columns



7) 5 rows  
2 columns



8) 4 rows  
4 columns



9) 3 rows  
3 columns





Partition the shape as described and then count to find the number of boxes.

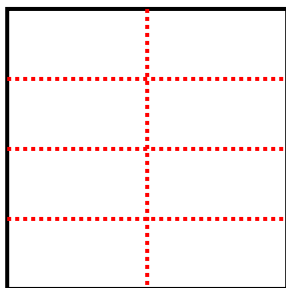
Rows go left to right.

Columns go up and down.

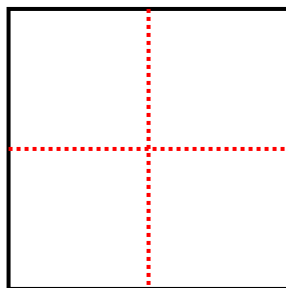
This has 4 rows and 5 columns.  
There are 20 boxes total.



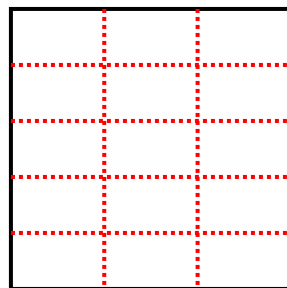
1) 4 rows  
2 columns



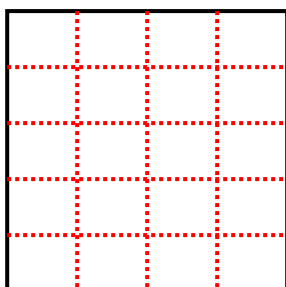
2) 2 rows  
2 columns



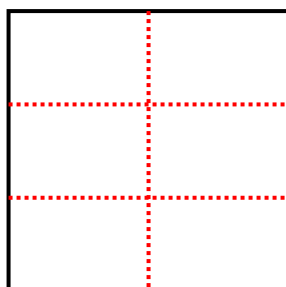
3) 5 rows  
3 columns



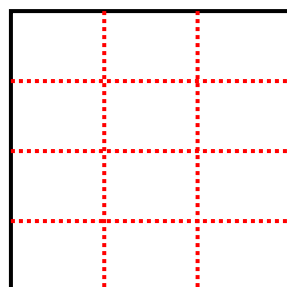
4) 5 rows  
4 columns



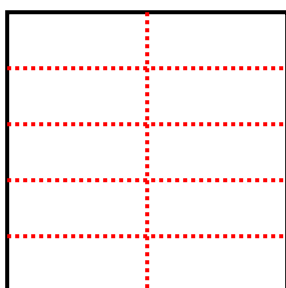
5) 3 rows  
2 columns




6) 4 rows  
3 columns



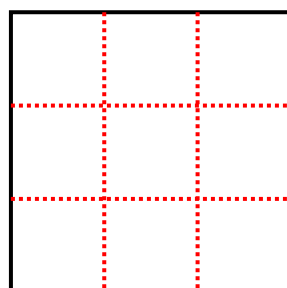
7) 5 rows  
2 columns



8) 4 rows  
4 columns



9) 3 rows  
3 columns



Answers

1. 8

2. 4

3. 15

4. 20

5. 6

6. 12

7. 10

8. 16

9. 9