



Partition the shape as described and then count to find the number of boxes.

Answers

Rows go left to right.

Columns go up and down.

This has 4 rows and 5 columns.  
There are 20 boxes total.



1. \_\_\_\_\_
2. \_\_\_\_\_
3. \_\_\_\_\_
4. \_\_\_\_\_
5. \_\_\_\_\_
6. \_\_\_\_\_
7. \_\_\_\_\_
8. \_\_\_\_\_
9. \_\_\_\_\_

1) 5 rows  
2 columns



2) 3 rows  
3 columns



3) 2 rows  
3 columns



4) 3 rows  
4 columns



5) 2 rows  
2 columns



6) 5 rows  
4 columns



7) 3 rows  
2 columns



8) 5 rows  
3 columns



9) 2 rows  
5 columns





Partition the shape as described and then count to find the number of boxes.

Rows go left to right.

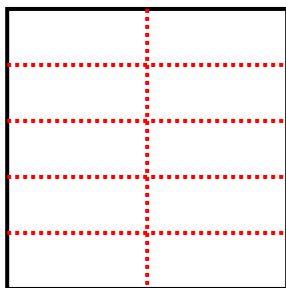
Columns go up and down.

This has 4 rows and 5 columns.  
There are 20 boxes total.

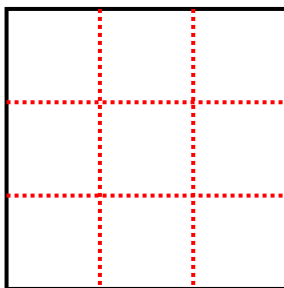


Answers

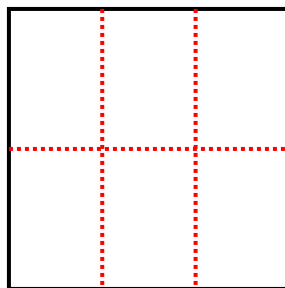
1) 5 rows  
2 columns



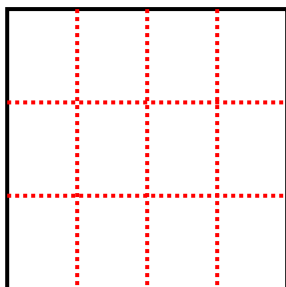
2) 3 rows  
3 columns



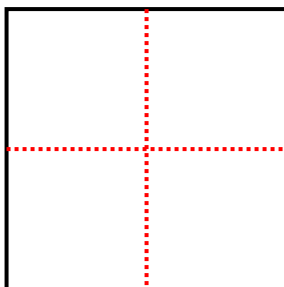
3) 2 rows  
3 columns



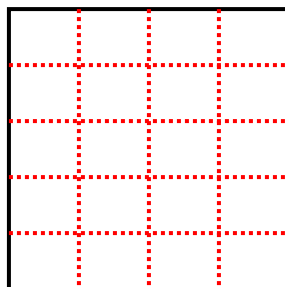
4) 3 rows  
4 columns



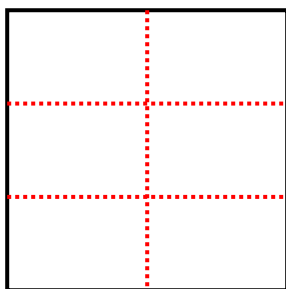
5) 2 rows  
2 columns



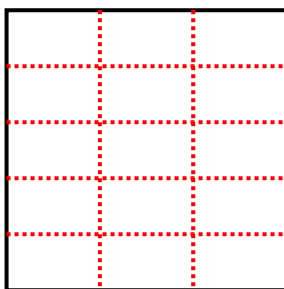
6) 5 rows  
4 columns



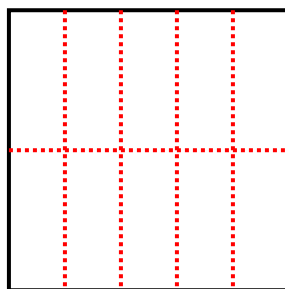
7) 3 rows  
2 columns



8) 5 rows  
3 columns



9) 2 rows  
5 columns



1. 10

2. 9

3. 6

4. 12

5. 4

6. 20

7. 6

8. 15

9. 10