




Use the array provided to solve each problem.


1) $30 \times 37 =$




2) $20 \times 33 =$




3) $20 \times 26 =$




4) $25 \times 20 =$



5) $28 \times 20 =$



6) $20 \times 29 =$



Answers

1. _____

2. _____

3. _____

4. _____

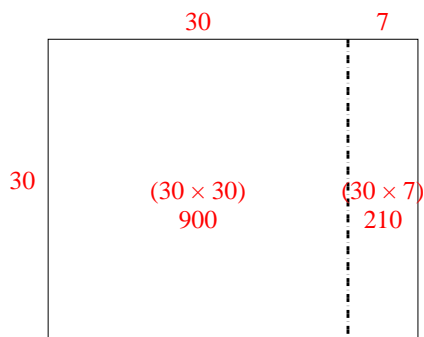
5. _____

6. _____

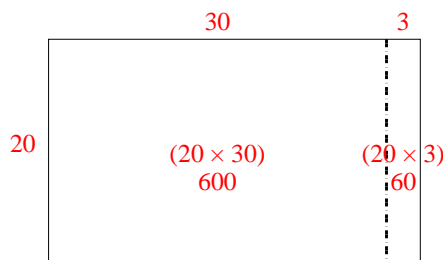


Use the array provided to solve each problem.

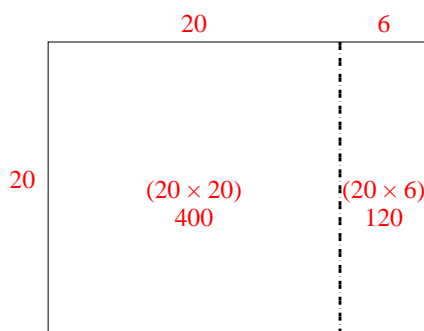
1) $30 \times 37 =$



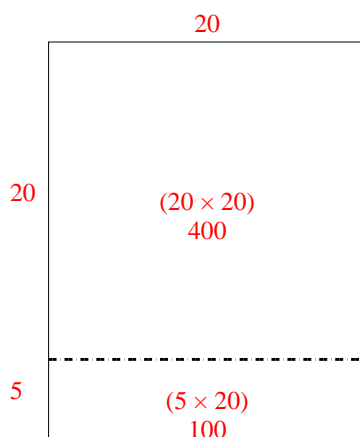
2) $20 \times 33 =$



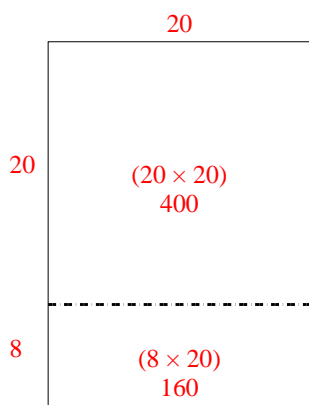
3) $20 \times 26 =$



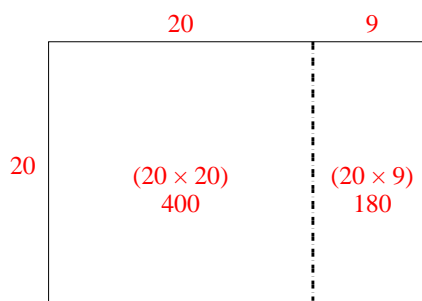
4) $25 \times 20 =$



5) $28 \times 20 =$



6) $20 \times 29 =$



Answers

1. **1,110**

2. **660**

3. **520**

4. **500**

5. **560**

6. **580**