





Use the array provided to solve each problem.


1) $32 \times 20 =$




2) $30 \times 37 =$




3) $20 \times 22 =$




4) $20 \times 29 =$



5) $23 \times 20 =$



6) $28 \times 20 =$



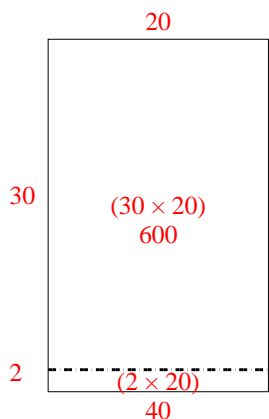
Answers

1. _____
2. _____
3. _____
4. _____
5. _____
6. _____

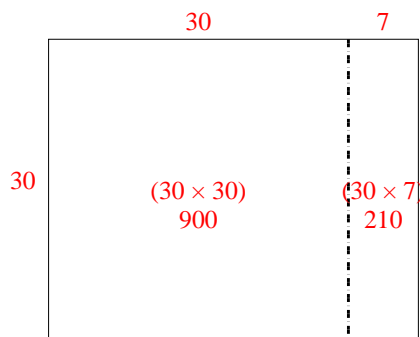


Use the array provided to solve each problem.

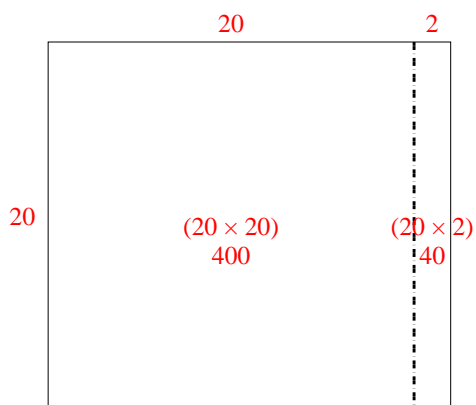
1) $32 \times 20 =$



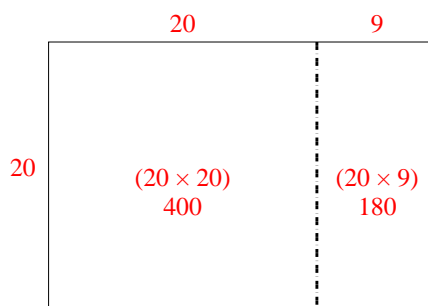
2) $30 \times 37 =$



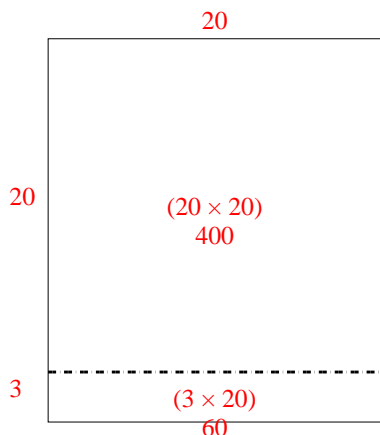
3) $20 \times 22 =$



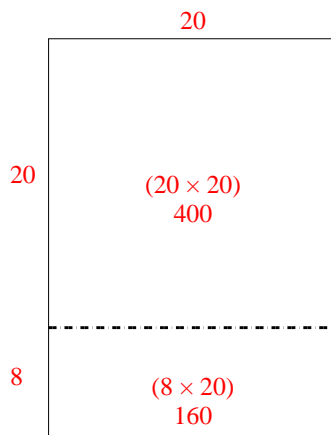
4) $20 \times 29 =$



5) $23 \times 20 =$



6) $28 \times 20 =$



Answers

1. 640

2. 1,110

3. 440

4. 580

5. 460

6. 560