





Use the array provided to solve each problem.


1) $48 \times 38 =$



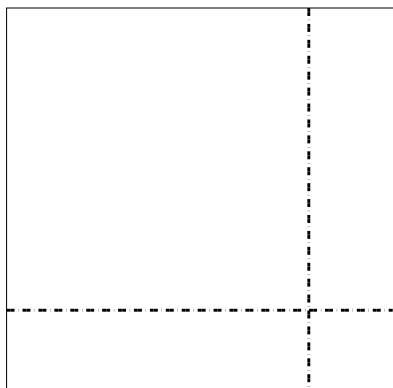
2) $49 \times 39 =$



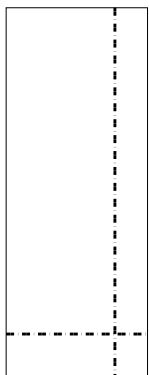
3) $39 \times 16 =$



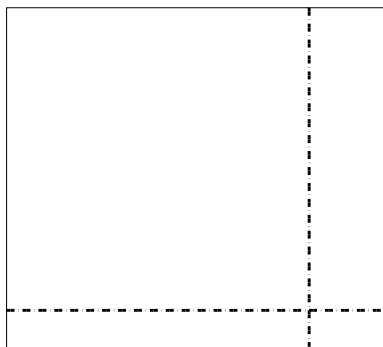
4) $38 \times 39 =$



5) $34 \times 13 =$



6) $34 \times 38 =$



Answers

1. _____

2. _____

3. _____

4. _____

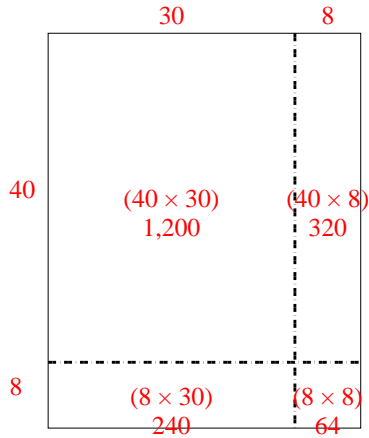
5. _____

6. _____

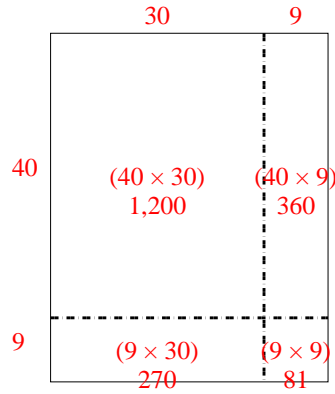


Use the array provided to solve each problem.

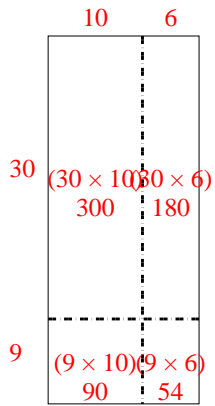
1) $48 \times 38 =$



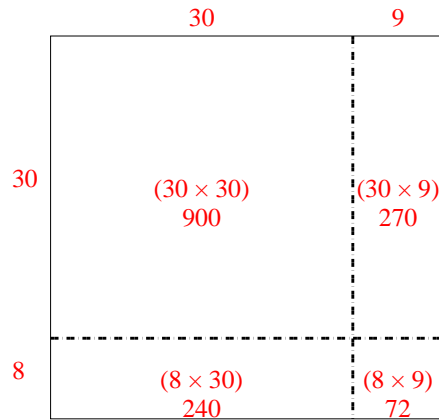
2) $49 \times 39 =$



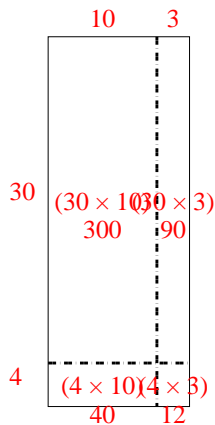
3) $39 \times 16 =$



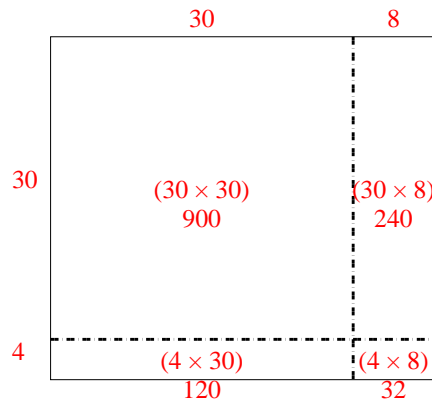
4) $38 \times 39 =$



5) $34 \times 13 =$



6) $34 \times 38 =$



Answers

1. **1,824**

2. **1,911**

3. **624**

4. **1,482**

5. **442**

6. **1,292**