





Use the array provided to solve each problem.


1)  $10 \times 16 =$




2)  $11 \times 10 =$




3)  $10 \times 12 =$




4)  $10 \times 18 =$



5)  $10 \times 19 =$



6)  $10 \times 13 =$



**Answers**

1. \_\_\_\_\_

2. \_\_\_\_\_

3. \_\_\_\_\_

4. \_\_\_\_\_

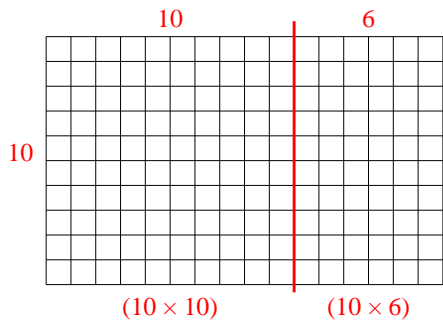
5. \_\_\_\_\_

6. \_\_\_\_\_

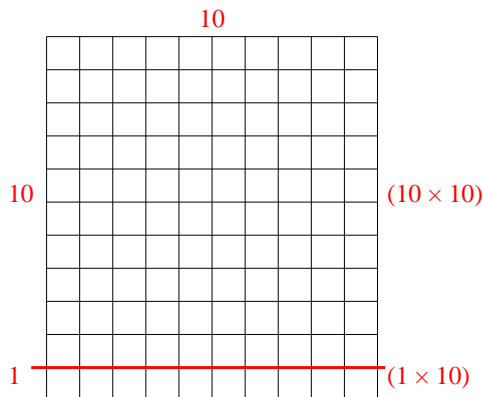


Use the array provided to solve each problem.

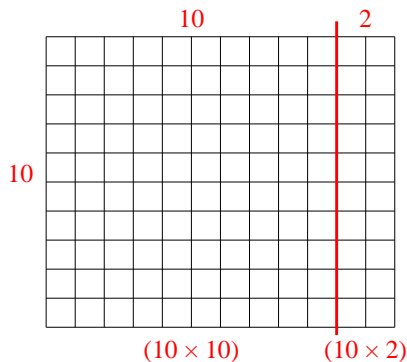
1)  $10 \times 16 =$



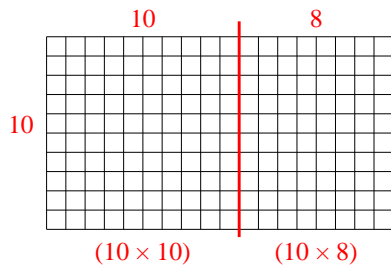
2)  $11 \times 10 =$



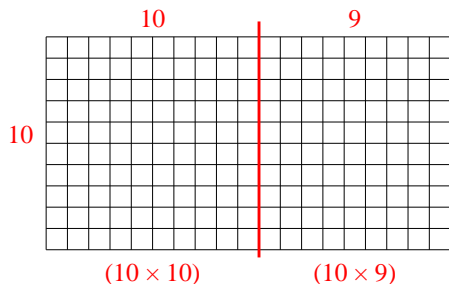
3)  $10 \times 12 =$



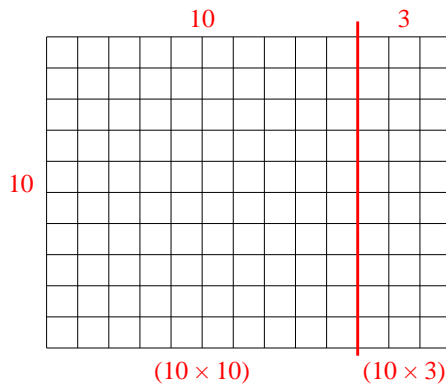
4)  $10 \times 18 =$



5)  $10 \times 19 =$



6)  $10 \times 13 =$



Answers

1. 160

2. 110

3. 120

4. 180

5. 190

6. 130