



Use lattice multiplication to solve each problem.

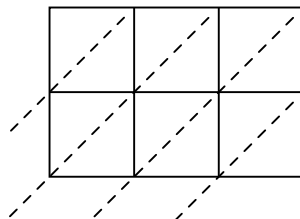
1)  $636 \times 32 =$



2)  $339 \times 54 =$



3)  $637 \times 28 =$



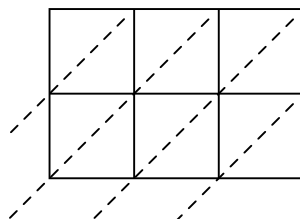
4)  $525 \times 91 =$



5)  $768 \times 79 =$



6)  $686 \times 73 =$



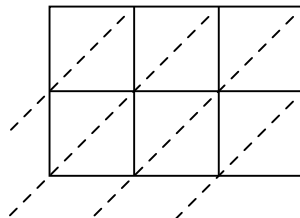
7)  $675 \times 69 =$



8)  $714 \times 45 =$



9)  $389 \times 41 =$



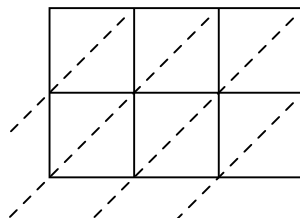
10)  $135 \times 24 =$



11)  $363 \times 59 =$



12)  $417 \times 39 =$



**Answers**

1. \_\_\_\_\_

2. \_\_\_\_\_

3. \_\_\_\_\_

4. \_\_\_\_\_

5. \_\_\_\_\_

6. \_\_\_\_\_

7. \_\_\_\_\_

8. \_\_\_\_\_

9. \_\_\_\_\_

10. \_\_\_\_\_

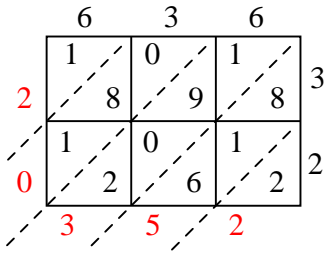
11. \_\_\_\_\_

12. \_\_\_\_\_

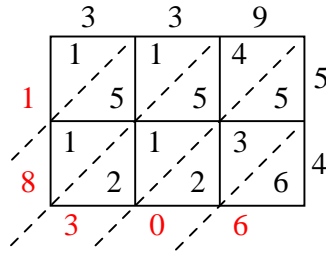


Use lattice multiplication to solve each problem.

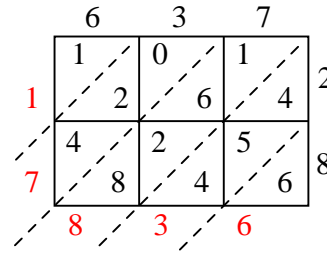
1)  $636 \times 32 =$



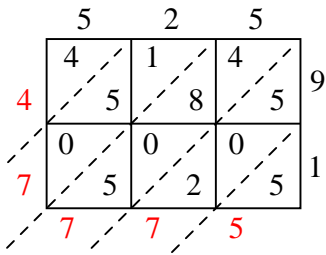
2)  $339 \times 54 =$



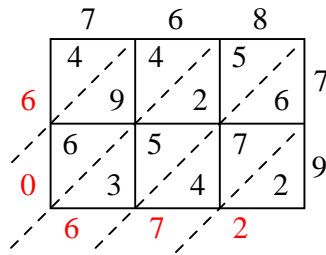
3)  $637 \times 28 =$



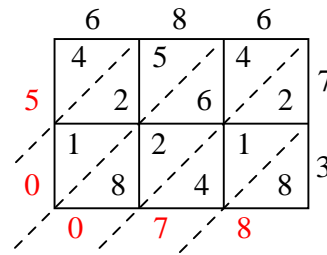
4)  $525 \times 91 =$



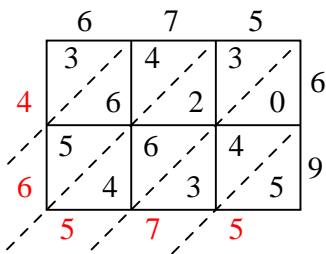
5)  $768 \times 79 =$



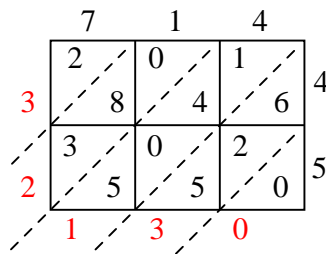
6)  $686 \times 73 =$



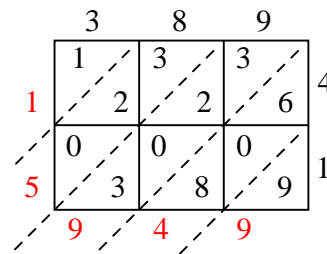
7)  $675 \times 69 =$



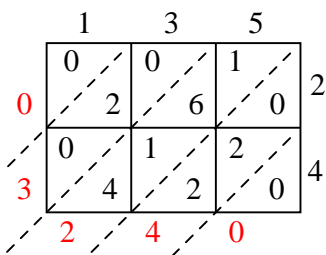
8)  $714 \times 45 =$



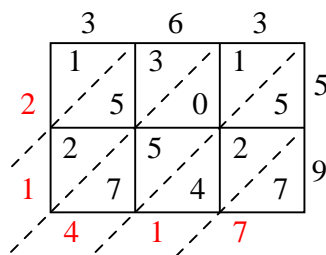
9)  $389 \times 41 =$



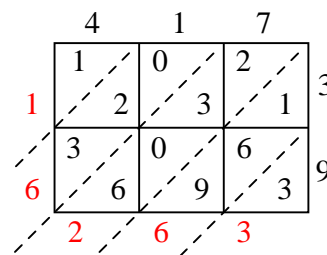
10)  $135 \times 24 =$



11)  $363 \times 59 =$



12)  $417 \times 39 =$



Answers

1. **20,352**

2. **18,306**

3. **17,836**

4. **47,775**

5. **60,672**

6. **50,078**

7. **46,575**

8. **32,130**

9. **15,949**

10. **3,240**

11. **21,417**

12. **16,263**