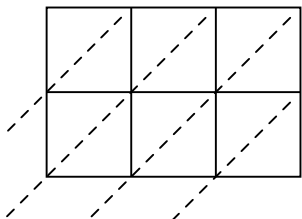




Use lattice multiplication to solve each problem.

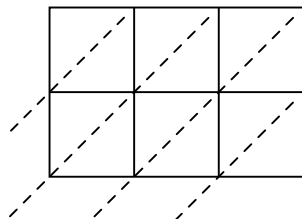
1) $189 \times 31 =$



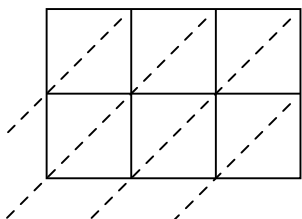
2) $633 \times 58 =$



3) $856 \times 16 =$



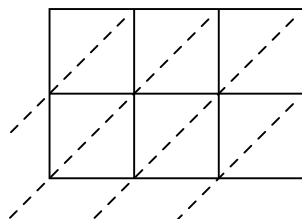
4) $254 \times 35 =$



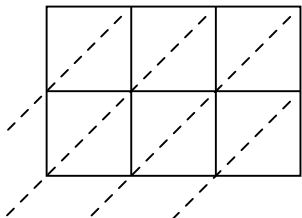
5) $186 \times 28 =$



6) $390 \times 84 =$



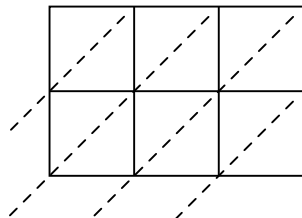
7) $325 \times 37 =$



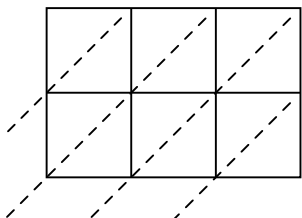
8) $493 \times 91 =$



9) $348 \times 20 =$



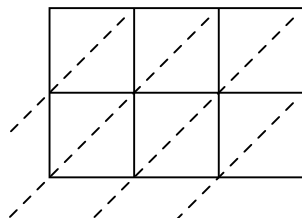
10) $894 \times 10 =$



11) $961 \times 10 =$



12) $317 \times 15 =$



Answers

1. _____

2. _____

3. _____

4. _____

5. _____

6. _____

7. _____

8. _____

9. _____

10. _____

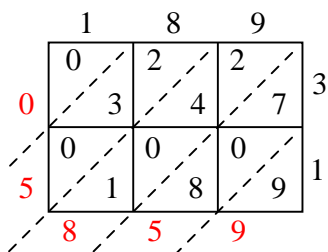
11. _____

12. _____

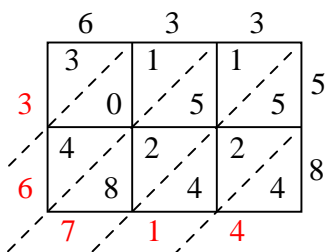


Use lattice multiplication to solve each problem.

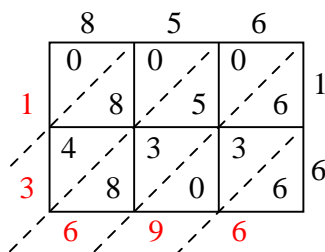
1) $189 \times 31 =$



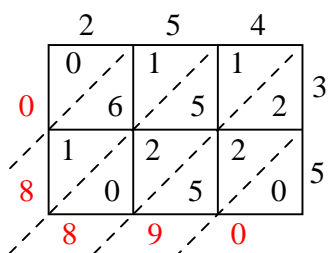
2) $633 \times 58 =$



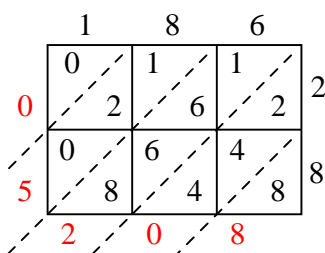
3) $856 \times 16 =$



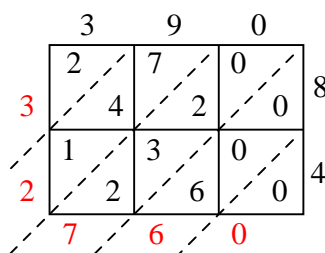
4) $254 \times 35 =$



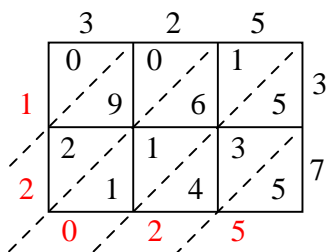
5) $186 \times 28 =$



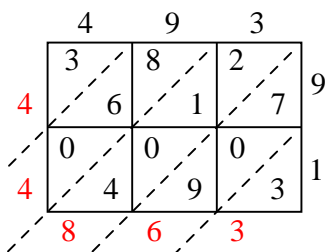
6) $390 \times 84 =$



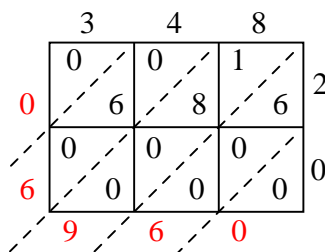
7) $325 \times 37 =$



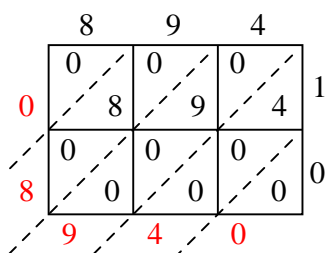
8) $493 \times 91 =$



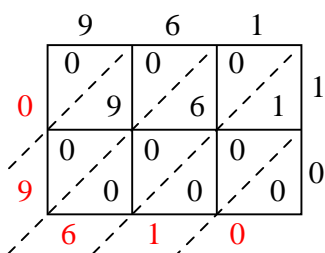
9) $348 \times 20 =$



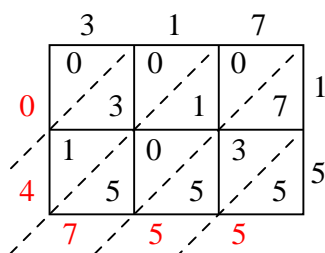
10) $894 \times 10 =$



11) $961 \times 10 =$



12) $317 \times 15 =$



Answers

1. 5,859
2. 36,714
3. 13,696
4. 8,890
5. 5,208
6. 32,760
7. 12,025
8. 44,863
9. 6,960
10. 8,940
11. 9,610
12. 4,755