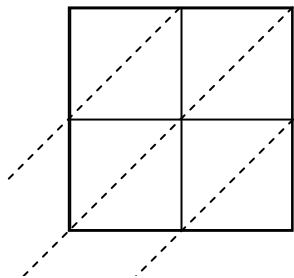


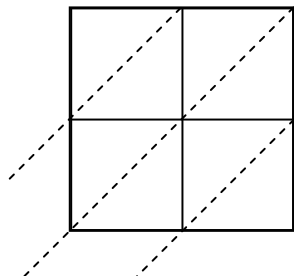


Use lattice multiplication to solve each problem.

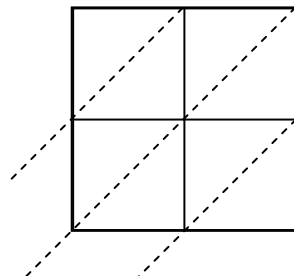
1) $34 \times 18 =$



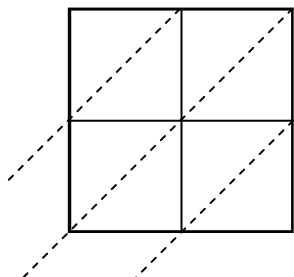
2) $75 \times 12 =$



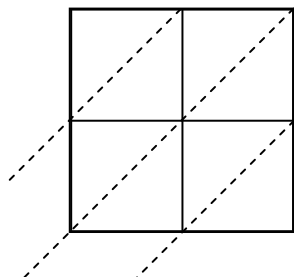
3) $55 \times 50 =$



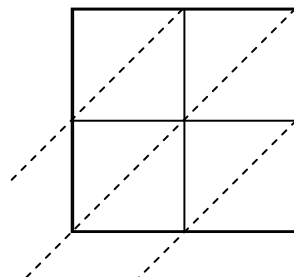
4) $55 \times 73 =$



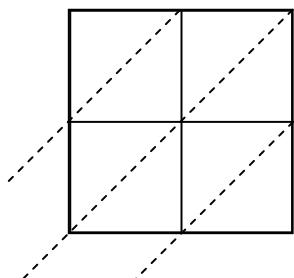
5) $24 \times 73 =$



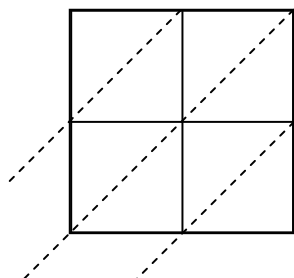
6) $65 \times 97 =$



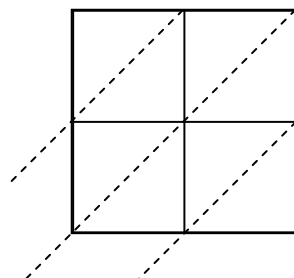
7) $19 \times 22 =$



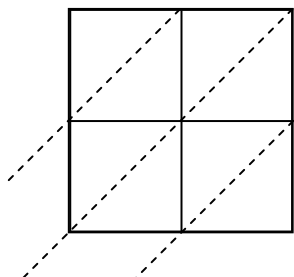
8) $26 \times 46 =$



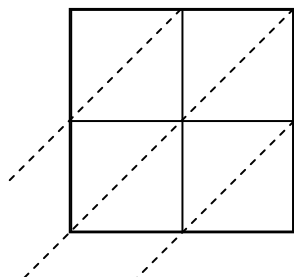
9) $70 \times 73 =$



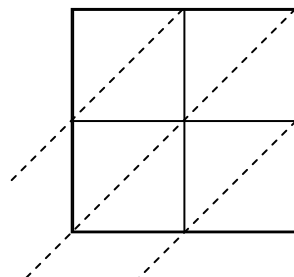
10) $66 \times 99 =$



11) $85 \times 88 =$



12) $56 \times 33 =$



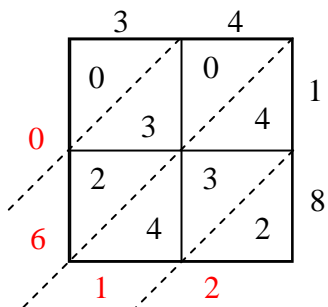
Answers

1. _____
2. _____
3. _____
4. _____
5. _____
6. _____
7. _____
8. _____
9. _____
10. _____
11. _____
12. _____

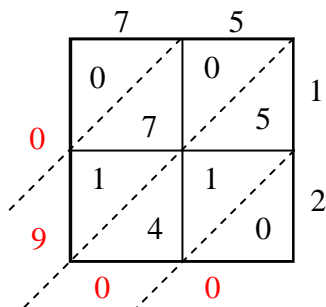


Use lattice multiplication to solve each problem.

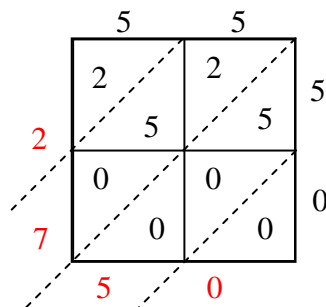
1) $34 \times 18 =$



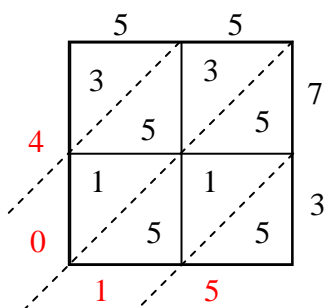
2) $75 \times 12 =$



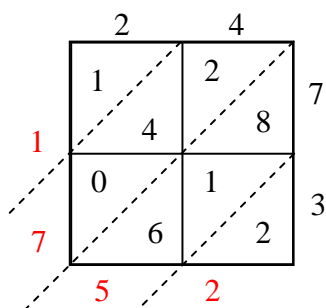
3) $55 \times 50 =$



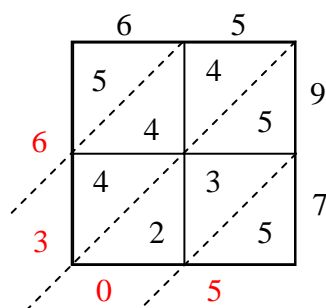
4) $55 \times 73 =$



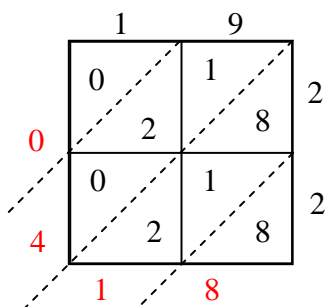
5) $24 \times 73 =$



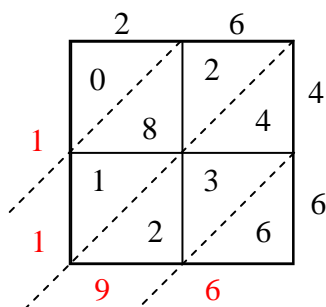
6) $65 \times 97 =$



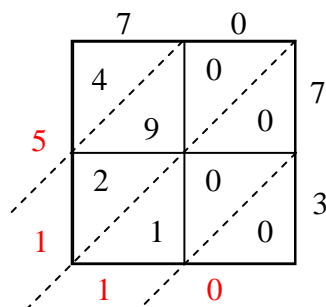
7) $19 \times 22 =$



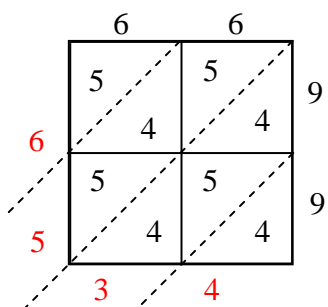
8) $26 \times 46 =$



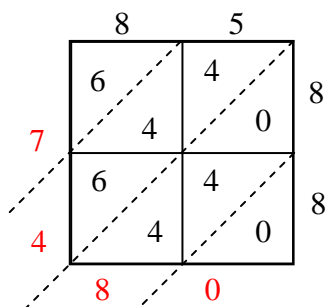
9) $70 \times 73 =$



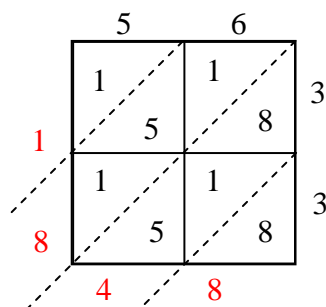
10) $66 \times 99 =$



11) $85 \times 88 =$



12) $56 \times 33 =$



Answers

1. 612

2. 900

3. 2,750

4. 4,015

5. 1,752

6. 6,305

7. 418

8. 1,196

9. 5,110

10. 6,534

11. 7,480

12. 1,848