


Solve each problem.

**Answers**


1) Victor spent \$10.46 buying some new toys. He bought them using a twenty dollar bill. How much change should he get back?



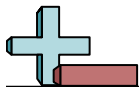
2) Olivia bought a new board game for \$7.90. She gave the cashier a ten dollar bill. How much change should she get back?



3) At the book fair Oliver spent \$12.53 buying books. He gave the cashier a twenty dollar bill. How much change should he get back?



1. \_\_\_\_\_  
 2. \_\_\_\_\_  
 3. \_\_\_\_\_




Solve each problem.

1) Victor spent \$10.46 buying some new toys. He bought them using a twenty dollar bill. How much change should he get back?



2) Olivia bought a new board game for \$7.90. She gave the cashier a ten dollar bill. How much change should she get back?



3) At the book fair Oliver spent \$12.53 buying books. He gave the cashier a twenty dollar bill. How much change should he get back?



**Answers**

1.     **C**    

2.     **C**    

3.     **C**