



Determine the amount of money shown.

Answers



1. _____



2. _____



3. _____




4. _____




5. _____



6. _____



7. _____



8. _____




9. _____



10. _____



Determine the amount of money shown.



Answers

1. \$0.52

2. \$0.95

3. \$0.99

4. \$0.70

5. \$0.69

6. \$0.95

7. \$0.95

8. \$0.97

9. \$0.59

10. \$0.66