




Use the units provided to measure the width of each of the bars.

Answers



1. \_\_\_\_\_



2. \_\_\_\_\_



3. \_\_\_\_\_



4. \_\_\_\_\_



5. \_\_\_\_\_



6. \_\_\_\_\_



7. \_\_\_\_\_



8. \_\_\_\_\_





9. \_\_\_\_\_



10. \_\_\_\_\_



Use the units provided to measure the width of each of the bars.



Answers

1. 3

2. 4

3. 9

4. 10

5. 7

6. 1

7. 2

8. 5

9. 8

10. 6

Cut out and use the units shown to measure the bars on the previous page.

