



Use the units provided to measure the width of each of the bars.

Answers




1. _____



2. _____



3. _____



4. _____



5. _____



6. _____



7. _____



8. _____





9. _____



10. _____



Use the units provided to measure the width of each of the bars.



Answers

1. 7

2. 3

3. 9

4. 1

5. 8

6. 10

7. 4

8. 2

9. 11

10. 5