



Determine which letter best represents the length / height.

Answers

Millimeter (mm)

Centimeter (cm)

Meter (m)

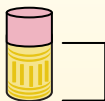
Kilometer (km)

A millimeter is about the thickness of a credit card.

10 mm = 1 cm.
The metal portion of a pencil is about 1 cm. A ruler is about 30 centimeters.


100 cm = 1 m
From the floor to a door knob is about 1 meter.

1,000 m = 1 km
Most major roads are at least a kilometer long.



1. _____
2. _____
3. _____
4. _____
5. _____
6. _____
7. _____
8. _____
9. _____



1)



Can of Soda

- A. 30 centimeters
- B. 3 centimeters
- C. 1 meter
- D. 10 centimeters


2)



Washing Machine

- A. 1 meter
- B. 30 centimeters
- C. 2 meters
- D. 10 centimeters

3)



Lollipop

- A. 30 millimeters
- B. 30 centimeters
- C. 2 kilometers
- D. 10 centimeters

4)



Bicycle

- A. 25 centimeters
- B. 10 centimeters
- C. 1 meter
- D. 3 meters

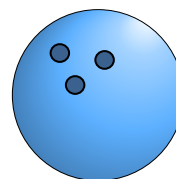
5)



Shovel

- A. 30 centimeters
- B. 60 centimeters
- C. 1 meter
- D. 3 meters

6)



Bowling Ball Height

- A. 25 centimeters
- B. 305 centimeters
- C. 1 meter
- D. 10 centimeters

7)



File Cabinet

- A. 30 centimeters
- B. 1.5 millimeters
- C. 30 millimeters
- D. 60 centimeters

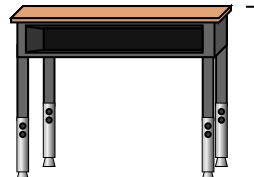
8)



Pencil

- A. 30 millimeters
- B. 20 centimeters
- C. 150 centimeters
- D. 1 meter

9)



Desk

- A. 2 meters
- B. 15 centimeters
- C. 30 centimeters
- D. 70 centimeters



Determine which letter best represents the length / height.

Millimeter (mm)

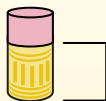
A millimeter is about the thickness of a credit card.



Centimeter (cm)

10 mm = 1 cm.

The metal portion of a pencil is about 1 cm. A ruler is about 30 centimeters.



Meter (m)

100 cm = 1 m

From the floor to a door knob is about 1 meter.



Kilometer (km)

1,000 m = 1 km

Most major roads are at least a kilometer long.



Answers

1. **D**

2. **A**

3. **D**

4. **C**

5. **C**



6. **A**

7. **B**

8. **B**

9. **D**


1)



Can of Soda

- A. 30 centimeters
- B. 3 centimeters
- C. 1 meter
- D. 10 centimeters


2)



Washing Machine

- A. 1 meter
- B. 30 centimeters
- C. 2 meters
- D. 10 centimeters

3)



Lollipop

- A. 30 millimeters
- B. 30 centimeters
- C. 2 kilometers
- D. 10 centimeters

4)



Bicycle

- A. 25 centimeters
- B. 10 centimeters
- C. 1 meter
- D. 3 meters

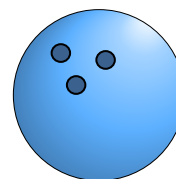
5)



Shovel

- A. 30 centimeters
- B. 60 centimeters
- C. 1 meter
- D. 3 meters

6)



Bowling Ball Height

- A. 25 centimeters
- B. 305 centimeters
- C. 1 meter
- D. 10 centimeters

7)



File Cabinet

- A. 30 centimeters
- B. 1.5 millimeters
- C. 30 millimeters
- D. 60 centimeters

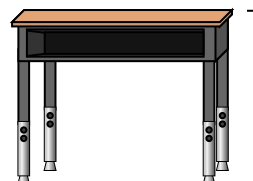
8)



Pencil

- A. 30 millimeters
- B. 20 centimeters
- C. 150 centimeters
- D. 1 meter

9)



Desk

- A. 2 meters
- B. 15 centimeters
- C. 30 centimeters
- D. 70 centimeters