



Determine which letter best represents the length / height.

**Answers**

**Millimeter (mm)**

**Centimeter (cm)**

**Meter (m)**


**Kilometer (km)**

A millimeter is about the thickness of a credit card.


10 mm = 1 cm.  
The metal portion of a pencil is about 1 cm. A ruler is about 30 centimeters.

100 cm = 1 m  
From the floor to a door knob is about 1 meter.

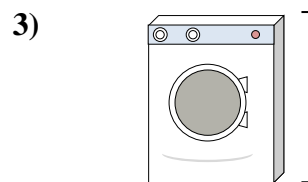
1,000 m = 1 km  
Most major roads are at least a kilometer long.



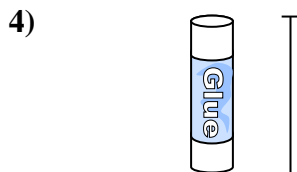
- Notebook Paper  
A. 60 centimeters  
B. 15 centimeters  
C. 1 meter  
D. 25 centimeters




- Gallon of Milk  
A. 3 meters  
B. 20 centimeters  
C. 10 millimeters  
D. 8 centimeters



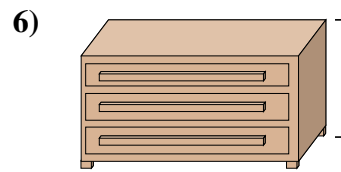
- Washing Machine  
A. 10 centimeters  
B. 30 centimeters  
C. 1 meter  
D. 2 meters




- Glue Stick  
A. 30 centimeters  
B. 10 centimeters  
C. 6 kilometers  
D. 25 centimeters



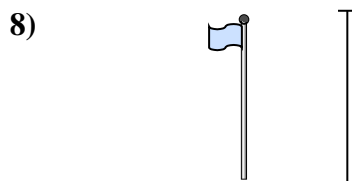
- Elephant  
A. 45 centimeters  
B. 4 meters  
C. 150 millimeters  
D. 2 kilometers



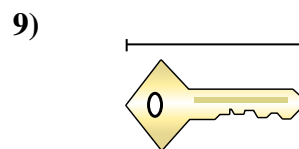
- Dresser  
A. 45 centimeters  
B. 30 centimeters  
C. 90 centimeters  
D. 3 meters



- Bowling Ball Height  
A. 10 centimeters  
B. 1 meter  
C. 25 centimeters  
D. 305 centimeters



- Flag Pole  
A. 300 centimeters  
B. 9 meters  
C. 2 meters  
D. 2 kilometers



- Key  
A. 2 meters  
B. 5 centimeters  
C. 15 centimeters  
D. 150 centimeters

1. \_\_\_\_\_
2. \_\_\_\_\_
3. \_\_\_\_\_
4. \_\_\_\_\_
5. \_\_\_\_\_
6. \_\_\_\_\_
7. \_\_\_\_\_
8. \_\_\_\_\_
9. \_\_\_\_\_



Determine which letter best represents the length / height.

**Millimeter (mm)**

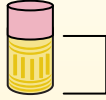
A millimeter is about the thickness of a credit card.



**Centimeter (cm)**

10 mm = 1 cm.

The metal portion of a pencil is about 1 cm. A ruler is about 30 centimeters.



**Meter (m)**

100 cm = 1 m

From the floor to a door knob is about 1 meter.



**Kilometer (km)**

1,000 m = 1 km

Most major roads are at least a kilometer long.



**Answers**

1. **D**

2. **B**

3. **C**

4. **B**

5. **B**

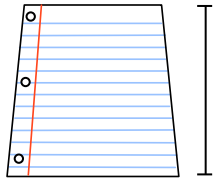
6. **C**

7. **C**

8. **B**

9. **B**


1)



Notebook Paper

- A. 60 centimeters
- B. 15 centimeters
- C. 1 meter
- D. 25 centimeters

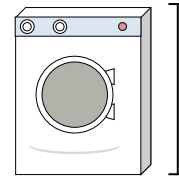
2)



Gallon of Milk

- A. 3 meters
- B. 20 centimeters
- C. 10 millimeters
- D. 8 centimeters

3)



Washing Machine

- A. 10 centimeters
- B. 30 centimeters
- C. 1 meter
- D. 2 meters


4)



Glue Stick

- A. 30 centimeters
- B. 10 centimeters
- C. 6 kilometers
- D. 25 centimeters

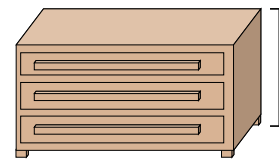
5)



Elephant

- A. 45 centimeters
- B. 4 meters
- C. 150 millimeters
- D. 2 kilometers

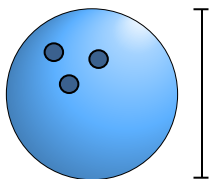
6)



Dresser

- A. 45 centimeters
- B. 30 centimeters
- C. 90 centimeters
- D. 3 meters

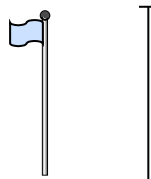
7)



Bowling Ball Height

- A. 10 centimeters
- B. 1 meter
- C. 25 centimeters
- D. 305 centimeters

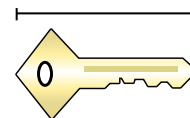
8)



Flag Pole

- A. 300 centimeters
- B. 9 meters
- C. 2 meters
- D. 2 kilometers

9)



Key

- A. 2 meters
- B. 5 centimeters
- C. 15 centimeters
- D. 150 centimeters