



Determine which letter best represents the length / height.

**Answers**

**Millimeter (mm)**

**Centimeter (cm)**

**Meter (m)**

**Kilometer (km)**

A millimeter is about the thickness of a credit card.

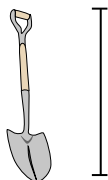
10 mm = 1 cm.  
The metal portion of a pencil is about 1 cm. A ruler is about 30 centimeters.

100 cm = 1 m  
From the floor to a door knob is about 1 meter.

1,000 m = 1 km  
Most major roads are at least a kilometer long.



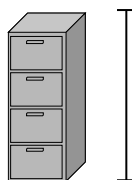
1)



Shovel

- A. 1 meter
- B. 60 centimeters
- C. 3 meters
- D. 30 centimeters


2)



File Cabinet

- A. 30 centimeters
- B. 60 centimeters
- C. 1.5 millimeters
- D. 30 millimeters


3)



Mountain

- A. 700 millimeters
- B. 3 kilometers
- C. 9 meters
- D. 60 centimeters

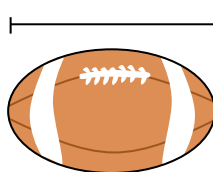
4)



Notebook Paper

- A. 1 meter
- B. 25 centimeters
- C. 15 centimeters
- D. 60 centimeters

5)



Football

- A. 25 centimeters
- B. 3 centimeters
- C. 60 centimeters
- D. 1 meter

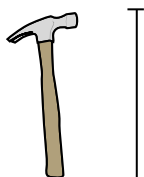
6)



Pen

- A. 12 centimeters
- B. 30 centimeters
- C. 30 millimeters
- D. 5 meters

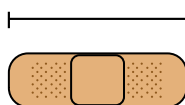
7)



Hammer

- A. 40 centimeters
- B. 1 meter
- C. 10 centimeters
- D. 3 centimeters

8)



Bandage

- A. 9 centimeters
- B. 1 meter
- C. 60 centimeters
- D. 3 kilometers

9)



Popcorn

- A. 3 centimeters
- B. 2 kilometers
- C. 3 millimeters
- D. 90 centimeters

1. \_\_\_\_\_
2. \_\_\_\_\_
3. \_\_\_\_\_
4. \_\_\_\_\_
5. \_\_\_\_\_
6. \_\_\_\_\_
7. \_\_\_\_\_
8. \_\_\_\_\_
9. \_\_\_\_\_



Determine which letter best represents the length / height.

**Millimeter (mm)**

A millimeter is about the thickness of a credit card.



**Centimeter (cm)**

10 mm = 1 cm.

The metal portion of a pencil is about 1 cm. A ruler is about 30 centimeters.



**Meter (m)**

100 cm = 1 m

From the floor to a door knob is about 1 meter.



**Kilometer (km)**

1,000 m = 1 km

Most major roads are at least a kilometer long.



**Answers**

1. **A**

2. **C**

3. **B**

4. **B**

5. **A**

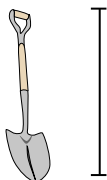
6. **A**

7. **A**

8. **A**

9. **A**

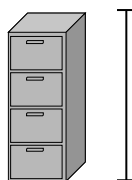
1)



Shovel

- A. 1 meter
- B. 60 centimeters
- C. 3 meters
- D. 30 centimeters


2)



File Cabinet

- A. 30 centimeters
- B. 60 centimeters
- C. 1.5 millimeters
- D. 30 millimeters


3)



Mountain

- A. 700 millimeters
- B. 3 kilometers
- C. 9 meters
- D. 60 centimeters

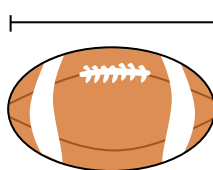
4)



Notebook Paper

- A. 1 meter
- B. 25 centimeters
- C. 15 centimeters
- D. 60 centimeters

5)



Football

- A. 25 centimeters
- B. 3 centimeters
- C. 60 centimeters
- D. 1 meter

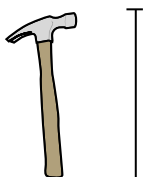
6)



Pen

- A. 12 centimeters
- B. 30 centimeters
- C. 30 millimeters
- D. 5 meters

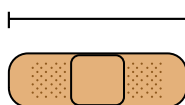
7)



Hammer

- A. 40 centimeters
- B. 1 meter
- C. 10 centimeters
- D. 3 centimeters

8)



Bandage

- A. 9 centimeters
- B. 1 meter
- C. 60 centimeters
- D. 3 kilometers

9)



Popcorn

- A. 3 centimeters
- B. 2 kilometers
- C. 3 millimeters
- D. 90 centimeters