





Measure the width of each block in inches and in centimeters.



Answers

Ex. 1 2-3

1. _____

2. _____

3. _____

4. _____

5. _____

6. _____


7. _____

8. _____

9. _____



Measure the width of each block in inches and in centimeters.



Answers

Ex. 1 2 - 3

1. 2 5 - 6

2. 5 1/2 13 - 14

3. 1 1/2 3 - 4

4. 2 1/2 6 - 7

5. 4 10 - 11

6. 5 12 - 13

7. 0 1/2 1 - 2

8. 4 1/2 11 - 12

9. 3 7 - 8