





Measure the width of each block in inches and in centimeters.



Answers

Ex. 5 1/2 13 - 14

1. \_\_\_\_\_

2. \_\_\_\_\_

3. \_\_\_\_\_

4. \_\_\_\_\_

5. \_\_\_\_\_

6. \_\_\_\_\_

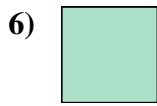
7. \_\_\_\_\_

8. \_\_\_\_\_

9. \_\_\_\_\_



Measure the width of each block in inches and in centimeters.



**Answers**

Ex. 5 1/2   13 - 14

1. 3 1/2   8 - 9

2. 4   10 - 11

3. 5   12 - 13

4. 1   2 - 3

5. 3   7 - 8

6. 0 1/2   1 - 2

7. 1 1/2   3 - 4

8. 2   5 - 6

9. 4 1/2   11 - 12