





Measure the width and height of each block in inches and in centimeters.


Ex)




1)



2)



3)



4)



Answers

Ex. 3 1 1/2 7.6 3.8

1. _____

2. _____

3. _____

4. _____



Measure the width and height of each block in inches and in centimeters.

Ex)



Answers

Ex. 3 1 1/2 7.6 3.8


1. 0 1/2 1 1/2 1.3 3.8

2. 5 1/2 1 14 2.5

3. 2 1 1/2 5.1 3.8

4. 3 1/2 0 1/2 8.9 1.3


1)



2)



3)



4)

