



Measure the width and height of each block in inches and in centimeters.

Ex)



**Answers**

Ex. 5 1/2 0 1/2 **14** **1.3**


1. \_\_\_\_\_

2. \_\_\_\_\_

3. \_\_\_\_\_

4. \_\_\_\_\_


1)




2)



3)



4)





Measure the width and height of each block in inches and in centimeters.

Ex)



**Answers**

Ex. 5 1/2 0 1/2 **14** **1.3**


1. 3 1/2 1 1/2 **8.9** **3.8**

2. **4** 0 1/2 **10.2** **1.3**


3. **5** **1** 12.7 2.5

4. 1 1 **2.5** **2.5**


1)



2)



3)



4)

