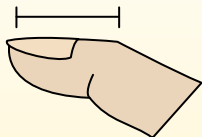



**Determine which letter best represents the length / height.****Answers****Inch (in)**

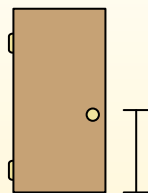
An inch is about the distance of the last joint of your finger.

**Foot (ft)**

A foot is 12 inches. The length of a ruler.

**Yard (yd)**


1 yard is the same as 3 feet. From the floor to a door knob is about 1 yard.

**Mile (mi)**

A mile is 5,280 feet. Most major roads are at least a mile long.



1)



Cereal Box Height

- A. 2 feet
- B. 1 inch
- C. 4 inches
- D. 1 foot

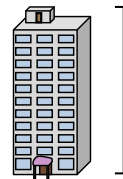
2)



Bug

- A. 3 yards
- B. 1 inch
- C. 3 inches
- D. 1 foot

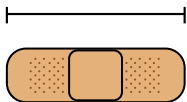
3)



11 Story Building

- A. 2 miles
- B. 11 yards
- C. 100 feet
- D. 11 feet

4)



Bandage

- A. 2 feet
- B. 3 inches
- C. 2 miles
- D. 1 yard

5)



Bicycle

- A. 3 yards
- B. 3 inches
- C. 1 yard
- D. 10 inches

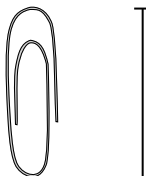
6)



Pen

- A. 12 inches
- B. 5 inches
- C. 5 yards
- D. 1 foot

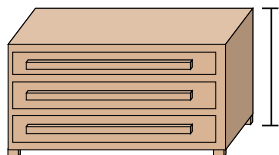
7)



Paperclip

- A. 2 feet
- B. 1 inch
- C. 4 inches
- D. 1 foot

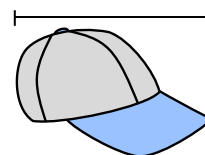
8)



Dresser

- A. 3 feet
- B. 3 yards
- C. 18 inches
- D. 12 inches

9)



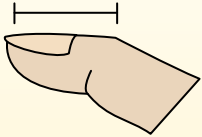
Hat

- A. 2 feet
- B. 1 foot
- C. 1 yard
- D. 4 inches

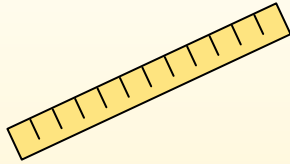
1. _____
2. _____
3. _____
4. _____
5. _____
6. _____
7. _____
8. _____
9. _____

**Determine which letter best represents the length / height.****Inch (in)**

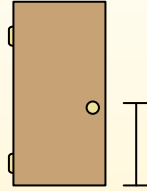
An inch is about the distance of the last joint of your finger.

**Foot (ft)**

A foot is 12 inches. The length of a ruler.

**Yard (yd)**


1 yard is the same as 3 feet. From the floor to a door knob is about 1 yard.

**Mile (mi)**

A mile is 5,280 feet. Most major roads are at least a mile long.



1)



Cereal Box Height

- A. 2 feet
- B. 1 inch
- C. 4 inches
- D. 1 foot

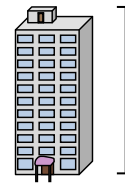
2)



Bug

- A. 3 yards
- B. 1 inch
- C. 3 inches
- D. 1 foot

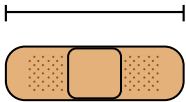
3)



11 Story Building

- A. 2 miles
- B. 11 yards
- C. 100 feet
- D. 11 feet

4)



Bandage

- A. 2 feet
- B. 3 inches
- C. 2 miles
- D. 1 yard

5)



Bicycle

- A. 3 yards
- B. 3 inches
- C. 1 yard
- D. 10 inches

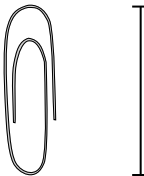
6)



Pen

- A. 12 inches
- B. 5 inches
- C. 5 yards
- D. 1 foot

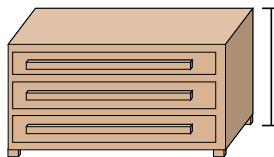
7)



Paperclip

- A. 2 feet
- B. 1 inch
- C. 4 inches
- D. 1 foot

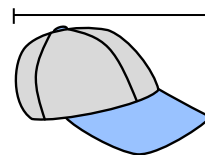
8)



Dresser

- A. 3 feet
- B. 3 yards
- C. 18 inches
- D. 12 inches

9)



Hat

- A. 2 feet
- B. 1 foot
- C. 1 yard
- D. 4 inches

Answers

1. **D**
2. **B**
3. **C**
4. **B**
5. **C**
6. **B**
7. **B**
8. **A**
9. **B**