



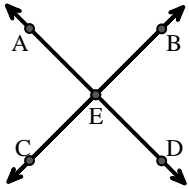
Match the description on the top with the visual image on the bottom.

**Answers**

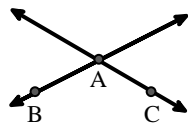
- 1)  $\vec{AC}$  parallel to  $\vec{EB}$
- 2)  $\vec{BA}$  intersecting  $\vec{AD}$
- 3) Acute  $\angle BED$
- 4)  $\vec{AD}$  intersecting  $\vec{BC}$  at point E
- 5)  $\vec{BE}$  intersecting  $\vec{CD}$
- 6)  $\vec{AC}$  intersected by  $\vec{BD}$
- 7)  $\angle BAC$  creating an obtuse angle
- 8)  $\vec{BC}$  intersecting  $\angle ACD$
- 9)  $\vec{AB}$  intersecting  $\vec{AD}$
- 10) Acute  $\angle ABC$  intersecting  $\vec{AD}$
- 11)  $\angle DEC$  intersected by  $\vec{AC}$
- 12)  $\vec{AC}$  perpendicular to  $\vec{AD}$

1. \_\_\_\_\_
2. \_\_\_\_\_
3. \_\_\_\_\_
4. \_\_\_\_\_
5. \_\_\_\_\_
6. \_\_\_\_\_
7. \_\_\_\_\_
8. \_\_\_\_\_
9. \_\_\_\_\_
10. \_\_\_\_\_
11. \_\_\_\_\_
12. \_\_\_\_\_

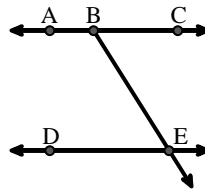
A.



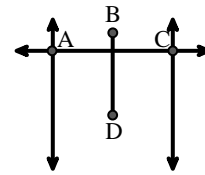
B.



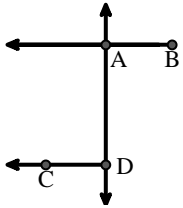
C.



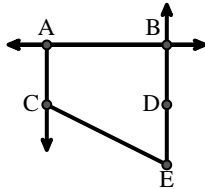
D.



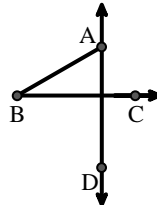
E.



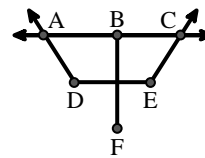
F.



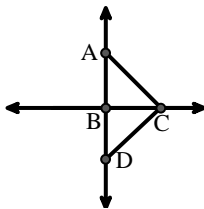
G.



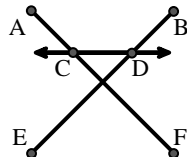
H.



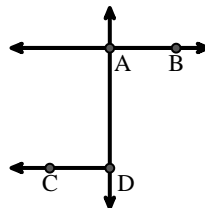
I.



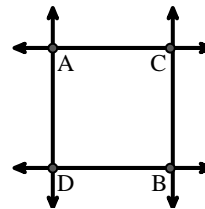
J.



K.



L.





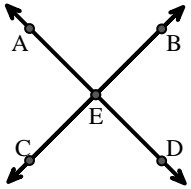
Match the description on the top with the visual image on the bottom.

**Answers**

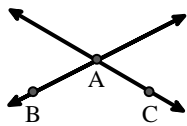
- 1)  $\vec{AC}$  parallel to  $\vec{EB}$
- 2)  $\vec{BA}$  intersecting  $\vec{AD}$
- 3) Acute  $\angle BED$
- 4)  $\vec{AD}$  intersecting  $\vec{BC}$  at point E
- 5)  $\vec{BE}$  intersecting  $\vec{CD}$
- 6)  $\vec{AC}$  intersected by  $\vec{BD}$
- 7)  $\angle BAC$  creating an obtuse angle
- 8)  $\vec{BC}$  intersecting  $\angle ACD$
- 9)  $\vec{AB}$  intersecting  $\vec{AD}$
- 10) Acute  $\angle ABC$  intersecting  $\vec{AD}$
- 11)  $\angle DEC$  intersected by  $\vec{AC}$
- 12)  $\vec{AC}$  perpendicular to  $\vec{AD}$

1. **F**
2. **E**
3. **C**
4. **A**
5. **J**
6. **D**
7. **B**
8. **I**
9. **K**
10. **G**
11. **H**
12. **L**

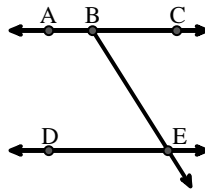
A.



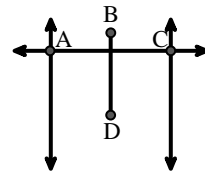
B.



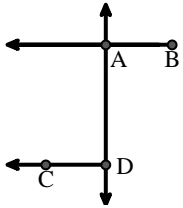
C.



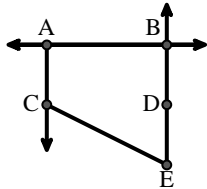
D.



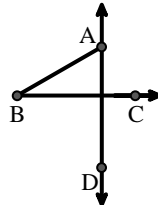
E.



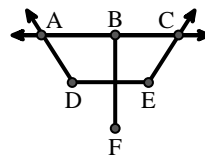
F.



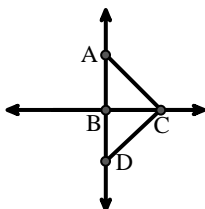
G.



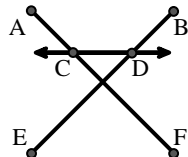
H.



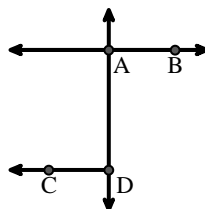
I.



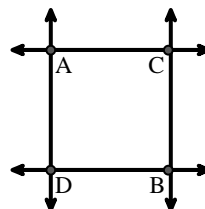
J.



K.



L.





Match the description on the top with the visual image on the bottom.

**Answers**

- 1) Right  $\angle ADE$
- 2) D as the midpoint of  $\overleftrightarrow{CE}$
- 3) Acute  $\angle BED$
- 4)  $\overleftrightarrow{AB}$  intersecting  $\overleftrightarrow{AD}$
- 5) Acute  $\angle BDE$
- 6)  $\overleftrightarrow{AD}$  intersecting  $\overleftrightarrow{BC}$  at point E
- 7)  $\overleftrightarrow{AB}$  parallel to  $\overleftrightarrow{CD}$
- 8)  $\overleftrightarrow{AB}$  intersecting  $\angle BCD$  at point B
- 9)  $\overleftrightarrow{AC}$  perpendicular to  $\overleftrightarrow{AD}$
- 10)  $\overleftrightarrow{AE}$  intersecting  $\overleftrightarrow{DB}$
- 11)  $\overleftrightarrow{BD}$  intersecting  $\angle ACE$
- 12)  $\overleftrightarrow{BA}$  intersecting  $\overleftrightarrow{AD}$

1. \_\_\_\_\_
2. \_\_\_\_\_
3. \_\_\_\_\_
4. \_\_\_\_\_
5. \_\_\_\_\_
6. \_\_\_\_\_
7. \_\_\_\_\_
8. \_\_\_\_\_
9. \_\_\_\_\_
10. \_\_\_\_\_
11. \_\_\_\_\_
12. \_\_\_\_\_

**A.**

**B.**

**C.**

**D.**

**E.**

**F.**

**G.**

**H.**

**I.**

**J.**

**K.**

**L.**

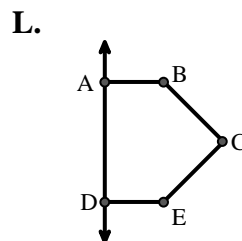
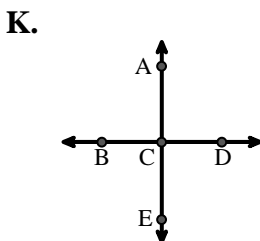
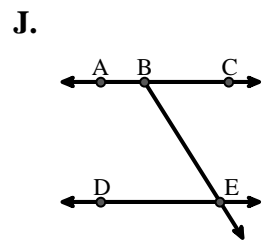
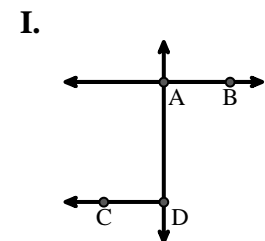
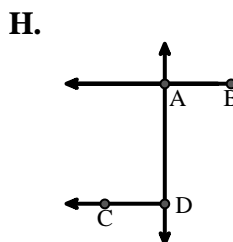
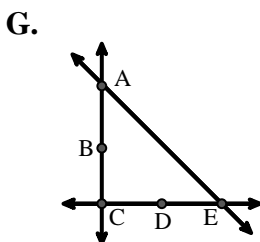
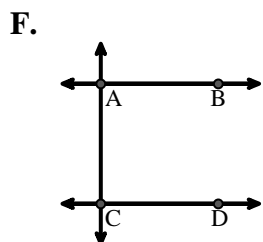
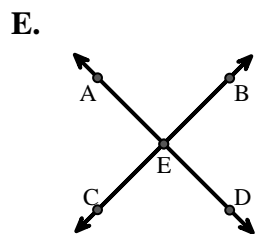
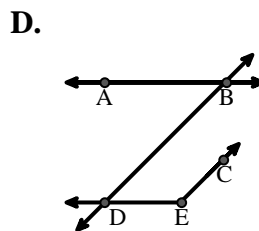
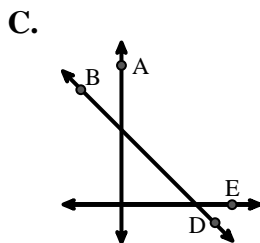
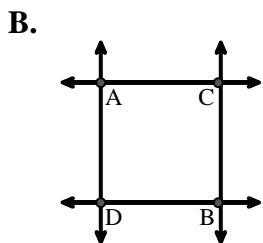
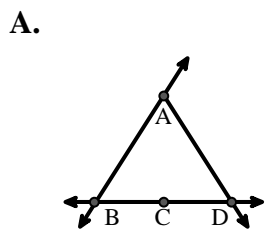


Match the description on the top with the visual image on the bottom.

**Answers**

- 1) Right  $\angle ADE$
- 2) D as the midpoint of  $\overleftrightarrow{CE}$
- 3) Acute  $\angle BED$
- 4)  $\overleftrightarrow{AB}$  intersecting  $\overleftrightarrow{AD}$
- 5) Acute  $\angle BDE$
- 6)  $\overleftrightarrow{AD}$  intersecting  $\overleftrightarrow{BC}$  at point E
- 7)  $\overleftrightarrow{AB}$  parallel to  $\overleftrightarrow{CD}$
- 8)  $\overleftrightarrow{AB}$  intersecting  $\angle BCD$  at point B
- 9)  $\overleftrightarrow{AC}$  perpendicular to  $\overleftrightarrow{AD}$
- 10)  $\overleftrightarrow{AE}$  intersecting  $\overleftrightarrow{DB}$
- 11)  $\overleftrightarrow{BD}$  intersecting  $\angle ACE$
- 12)  $\overleftrightarrow{BA}$  intersecting  $\overleftrightarrow{AD}$

1.   **L**
2.   **G**
3.   **J**
4.   **I**
5.   **D**
6.   **E**
7.   **F**
8.   **A**
9.   **B**
10.   **K**
11.   **C**
12.   **H**





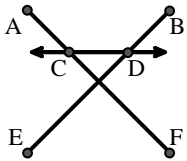
Match the description on the top with the visual image on the bottom.

**Answers**

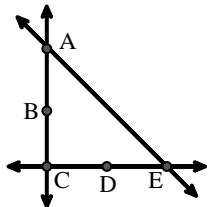
- 1)  $\overleftrightarrow{AB}$  intersecting  $\overleftrightarrow{AD}$
- 2) Acute  $\angle BED$
- 3)  $\overline{BE}$  intersecting  $\overleftrightarrow{CD}$
- 4)  $\angle BAC$  creating an obtuse angle
- 5) D as the midpoint of  $\overleftrightarrow{CE}$
- 6)  $\overleftrightarrow{BC}$  intersecting  $\angle ACD$
- 7)  $\overleftrightarrow{AC}$  intersected by  $\overline{BD}$
- 8)  $\overleftrightarrow{AC}$  perpendicular to  $\overleftrightarrow{AD}$
- 9)  $\overleftrightarrow{AB}$  intersecting  $\angle BCD$  at point B
- 10)  $\overleftrightarrow{AC}$  parallel to  $\overleftrightarrow{EB}$
- 11)  $\angle DEC$  intersected by  $\overleftrightarrow{AC}$
- 12) Acute  $\angle ABC$  intersecting  $\overleftrightarrow{AD}$

1. \_\_\_\_\_
2. \_\_\_\_\_
3. \_\_\_\_\_
4. \_\_\_\_\_
5. \_\_\_\_\_
6. \_\_\_\_\_
7. \_\_\_\_\_
8. \_\_\_\_\_
9. \_\_\_\_\_
10. \_\_\_\_\_
11. \_\_\_\_\_
12. \_\_\_\_\_

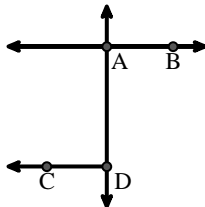
A.



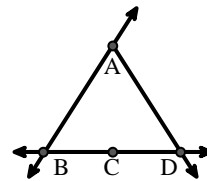
B.



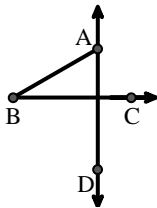
C.



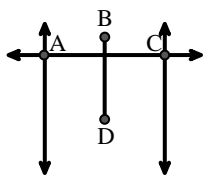
D.



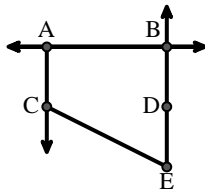
E.



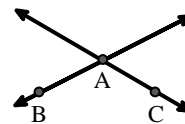
F.



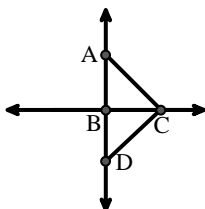
G.



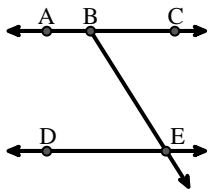
H.



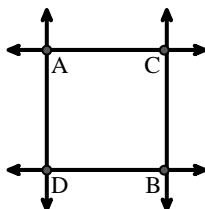
I.



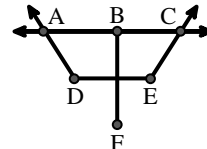
J.



K.



L.





Match the description on the top with the visual image on the bottom.

**Answers**

- 1)  $\overleftrightarrow{AB}$  intersecting  $\overleftrightarrow{AD}$
- 2) Acute  $\angle BED$
- 3)  $\overline{BE}$  intersecting  $\overleftrightarrow{CD}$
- 4)  $\angle BAC$  creating an obtuse angle
- 5) D as the midpoint of  $\overleftrightarrow{CE}$
- 6)  $\overleftrightarrow{BC}$  intersecting  $\angle ACD$
- 7)  $\overleftrightarrow{AC}$  intersected by  $\overline{BD}$
- 8)  $\overleftrightarrow{AC}$  perpendicular to  $\overleftrightarrow{AD}$
- 9)  $\overleftrightarrow{AB}$  intersecting  $\angle BCD$  at point B
- 10)  $\overleftrightarrow{AC}$  parallel to  $\overleftrightarrow{EB}$
- 11)  $\angle DEC$  intersected by  $\overleftrightarrow{AC}$
- 12) Acute  $\angle ABC$  intersecting  $\overleftrightarrow{AD}$

1.     **C**
2.     **J**
3.     **A**
4.     **H**
5.     **B**
6.     **I**
7.     **F**
8.     **K**
9.     **D**
10.     **G**
11.     **L**
12.     **E**

**A.**

**B.**

**C.**

**D.**

**E.**

**F.**

**G.**

**H.**

**I.**

**J.**

**K.**

**L.**



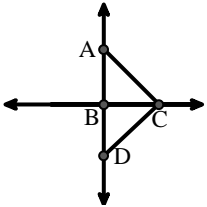
Match the description on the top with the visual image on the bottom.

**Answers**

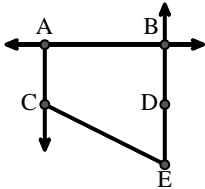
- 1)  $\overleftrightarrow{AB}$  parallel to  $\overleftrightarrow{CD}$
- 2)  $\overrightarrow{BA}$  intersecting  $\overleftrightarrow{AD}$
- 3)  $\overleftrightarrow{BC}$  intersecting  $\angle ACD$
- 4)  $\overleftrightarrow{AB}$  intersecting  $\overleftrightarrow{AD}$
- 5) Acute  $\angle BED$
- 6)  $\overline{BE}$  intersecting  $\overleftrightarrow{CD}$
- 7) Right  $\angle ADE$
- 8)  $\angle BAC$  creating an obtuse angle
- 9)  $\overrightarrow{AC}$  parallel to  $\overrightarrow{EB}$
- 10)  $\overleftrightarrow{AC}$  intersected by  $\overline{BD}$
- 11) D as the midpoint of  $\overleftrightarrow{CE}$
- 12)  $\angle DEC$  intersected by  $\overleftrightarrow{AC}$

1. \_\_\_\_\_
2. \_\_\_\_\_
3. \_\_\_\_\_
4. \_\_\_\_\_
5. \_\_\_\_\_
6. \_\_\_\_\_
7. \_\_\_\_\_
8. \_\_\_\_\_
9. \_\_\_\_\_
10. \_\_\_\_\_
11. \_\_\_\_\_
12. \_\_\_\_\_

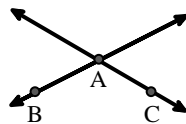
A.



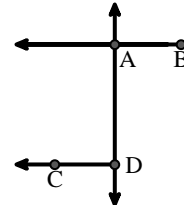
B.



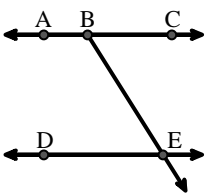
C.



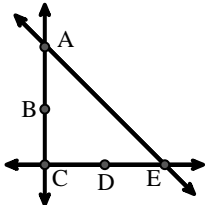
D.



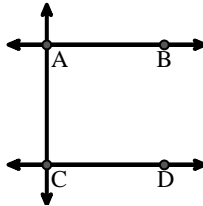
E.



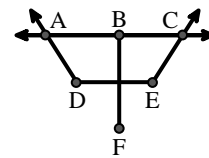
F.



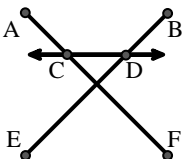
G.



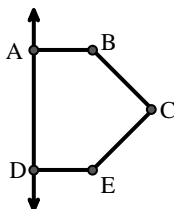
H.



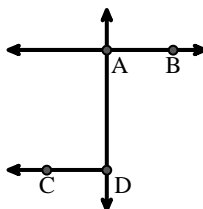
I.



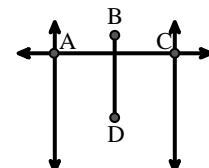
J.



K.



L.



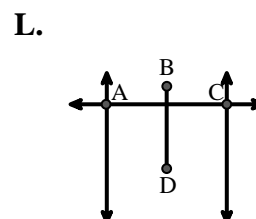
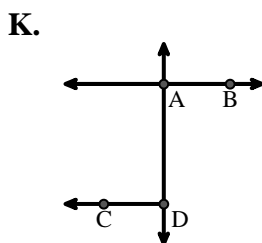
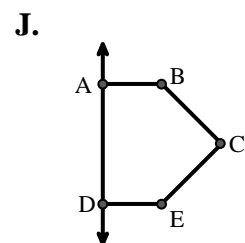
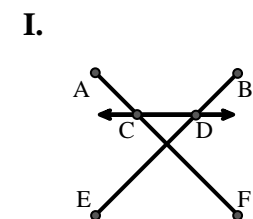
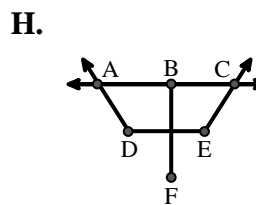
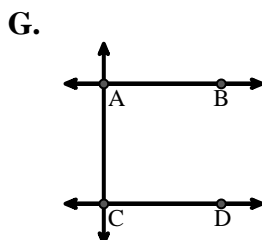
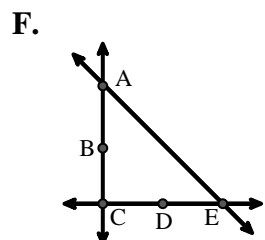
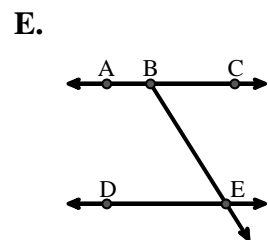
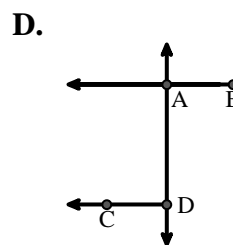
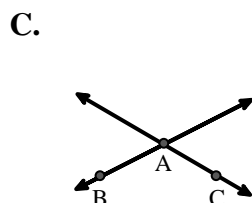
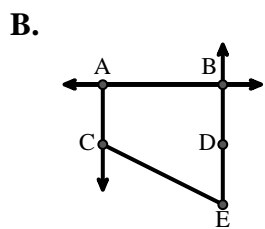
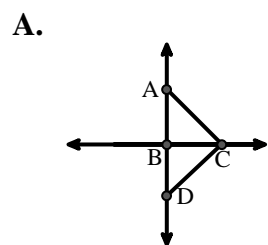


Match the description on the top with the visual image on the bottom.

**Answers**

- 1)  $\overleftrightarrow{AB}$  parallel to  $\overleftrightarrow{CD}$
- 2)  $\overrightarrow{BA}$  intersecting  $\overleftrightarrow{AD}$
- 3)  $\overleftrightarrow{BC}$  intersecting  $\angle ACD$
- 4)  $\overleftrightarrow{AB}$  intersecting  $\overleftrightarrow{AD}$
- 5) Acute  $\angle BED$
- 6)  $\overline{BE}$  intersecting  $\overleftrightarrow{CD}$
- 7) Right  $\angle ADE$
- 8)  $\angle BAC$  creating an obtuse angle
- 9)  $\overrightarrow{AC}$  parallel to  $\overrightarrow{EB}$
- 10)  $\overleftrightarrow{AC}$  intersected by  $\overline{BD}$
- 11) D as the midpoint of  $\overleftrightarrow{CE}$
- 12)  $\angle DEC$  intersected by  $\overleftrightarrow{AC}$

1. **G**
2. **D**
3. **A**
4. **K**
5. **E**
6. **I**
7. **J**
8. **C**
9. **B**
10. **L**
11. **F**
12. **H**







Match the description on the top with the visual image on the bottom.

**Answers**

- 1)  $\angle BAC$  creating an obtuse angle
- 2)  $\overleftrightarrow{AB}$  intersecting  $\overleftrightarrow{AD}$
- 3) Right  $\angle ADE$
- 4)  $\overleftrightarrow{BA}$  intersecting  $\overleftrightarrow{AD}$
- 5)  $\overleftrightarrow{AD}$  intersecting  $\overleftrightarrow{BC}$  at point E
- 6)  $\overleftrightarrow{BD}$  intersecting  $\overleftrightarrow{CE}$
- 7)  $\overleftrightarrow{AC}$  parallel to  $\overleftrightarrow{EB}$
- 8)  $\overleftrightarrow{AB}$  parallel to  $\overleftrightarrow{CD}$
- 9)  $\overleftrightarrow{BC}$  intersecting  $\angle ACD$
- 10)  $\overleftrightarrow{AC}$  perpendicular to  $\overleftrightarrow{AD}$
- 11) Acute  $\angle BDE$
- 12)  $\overleftrightarrow{AC}$  intersected by  $\overleftrightarrow{BD}$

1. \_\_\_\_\_
2. \_\_\_\_\_
3. \_\_\_\_\_
4. \_\_\_\_\_
5. \_\_\_\_\_
6. \_\_\_\_\_
7. \_\_\_\_\_
8. \_\_\_\_\_
9. \_\_\_\_\_
10. \_\_\_\_\_
11. \_\_\_\_\_
12. \_\_\_\_\_

**A.**

**B.**

**C.**

**D.**

**E.**

**F.**

**G.**

**H.**

**I.**

**J.**

**K.**

**L.**



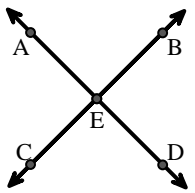
Match the description on the top with the visual image on the bottom.

**Answers**

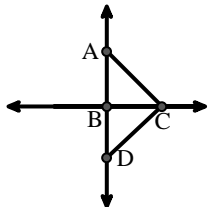
- 1)  $\angle BAC$  creating an obtuse angle
- 2)  $\overleftrightarrow{AB}$  intersecting  $\overleftrightarrow{AD}$
- 3) Right  $\angle ADE$
- 4)  $\overleftrightarrow{BA}$  intersecting  $\overleftrightarrow{AD}$
- 5)  $\overleftrightarrow{AD}$  intersecting  $\overleftrightarrow{BC}$  at point E
- 6)  $\overleftrightarrow{BD}$  intersecting  $\overleftrightarrow{CE}$
- 7)  $\overleftrightarrow{AC}$  parallel to  $\overleftrightarrow{EB}$
- 8)  $\overleftrightarrow{AB}$  parallel to  $\overleftrightarrow{CD}$
- 9)  $\overleftrightarrow{BC}$  intersecting  $\angle ACD$
- 10)  $\overleftrightarrow{AC}$  perpendicular to  $\overleftrightarrow{AD}$
- 11) Acute  $\angle BDE$
- 12)  $\overleftrightarrow{AC}$  intersected by  $\overleftrightarrow{BD}$

1. **F**
2. **H**
3. **I**
4. **L**
5. **A**
6. **G**
7. **E**
8. **K**
9. **B**
10. **D**
11. **J**
12. **C**

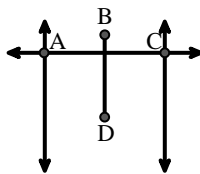
A.



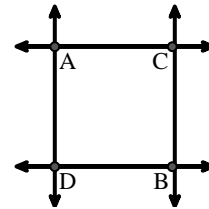
B.



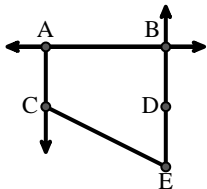
C.



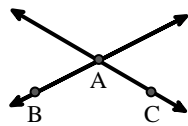
D.



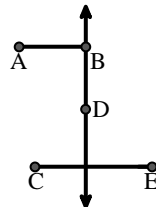
E.



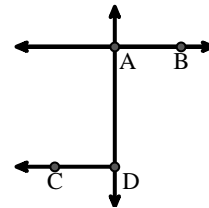
F.



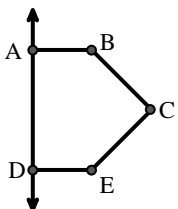
G.



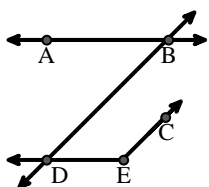
H.



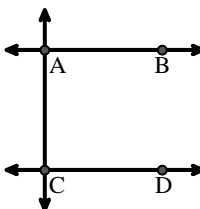
I.



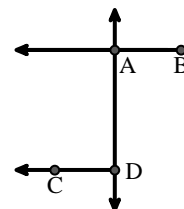
J.



K.



L.





Match the description on the top with the visual image on the bottom.

**Answers**

- 1)  $\overleftrightarrow{BC}$  intersecting  $\angle ACD$
- 2) Right  $\angle ADE$
- 3)  $\overleftrightarrow{AC}$  parallel to  $\overleftrightarrow{EB}$
- 4)  $\overleftrightarrow{AB}$  parallel to  $\overleftrightarrow{CD}$
- 5)  $\overleftrightarrow{AE}$  intersecting  $\overleftrightarrow{DB}$
- 6)  $\overleftrightarrow{AD}$  intersecting  $\overleftrightarrow{BC}$  at point E
- 7)  $\overleftrightarrow{AC}$  intersected by  $\overleftrightarrow{BD}$
- 8) Acute  $\angle ABC$  intersecting  $\overleftrightarrow{AD}$
- 9)  $\overleftrightarrow{BD}$  intersecting  $\angle ACE$
- 10) D as the midpoint of  $\overleftrightarrow{CE}$
- 11)  $\overleftrightarrow{AC}$  perpendicular to  $\overleftrightarrow{AD}$
- 12)  $\overleftrightarrow{BE}$  intersecting  $\overleftrightarrow{CD}$

1. \_\_\_\_\_
2. \_\_\_\_\_
3. \_\_\_\_\_
4. \_\_\_\_\_
5. \_\_\_\_\_
6. \_\_\_\_\_
7. \_\_\_\_\_
8. \_\_\_\_\_
9. \_\_\_\_\_
10. \_\_\_\_\_
11. \_\_\_\_\_
12. \_\_\_\_\_

**A.**

**B.**

**C.**

**D.**

**E.**

**F.**

**G.**

**H.**

**I.**

**J.**

**K.**

**L.**



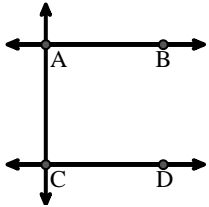
Match the description on the top with the visual image on the bottom.

**Answers**

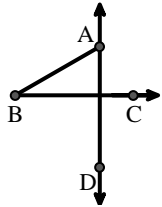
- 1)  $\overleftrightarrow{BC}$  intersecting  $\angle ACD$
- 2) Right  $\angle ADE$
- 3)  $\overleftrightarrow{AC}$  parallel to  $\overleftrightarrow{EB}$
- 4)  $\overleftrightarrow{AB}$  parallel to  $\overleftrightarrow{CD}$
- 5)  $\overleftrightarrow{AE}$  intersecting  $\overleftrightarrow{DB}$
- 6)  $\overleftrightarrow{AD}$  intersecting  $\overleftrightarrow{BC}$  at point E
- 7)  $\overleftrightarrow{AC}$  intersected by  $\overleftrightarrow{BD}$
- 8) Acute  $\angle ABC$  intersecting  $\overleftrightarrow{AD}$
- 9)  $\overleftrightarrow{BD}$  intersecting  $\angle ACE$
- 10) D as the midpoint of  $\overleftrightarrow{CE}$
- 11)  $\overleftrightarrow{AC}$  perpendicular to  $\overleftrightarrow{AD}$
- 12)  $\overleftrightarrow{BE}$  intersecting  $\overleftrightarrow{CD}$

1. **H**
2. **G**
3. **K**
4. **A**
5. **L**
6. **I**
7. **E**
8. **B**
9. **D**
10. **J**
11. **F**
12. **C**

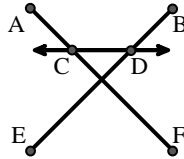
A.



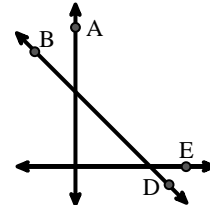
B.



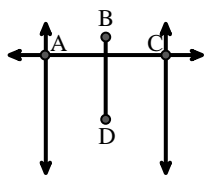
C.



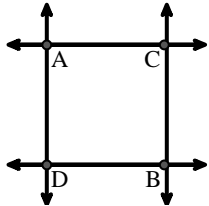
D.



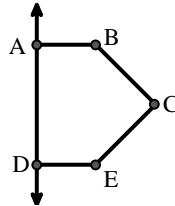
E.



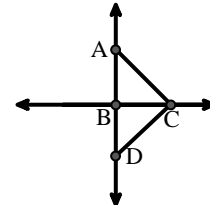
F.



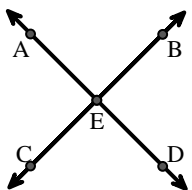
G.



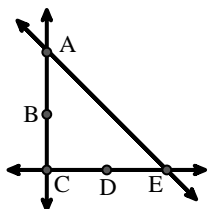
H.



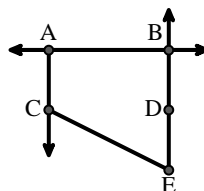
I.



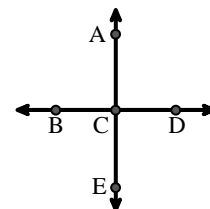
J.



K.



L.





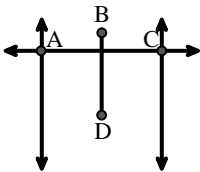
Match the description on the top with the visual image on the bottom.

**Answers**

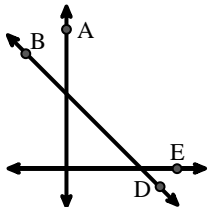
- 1)  $\overleftrightarrow{BD}$  intersecting  $\angle ACE$
- 2)  $\overleftrightarrow{AB}$  intersecting  $\overleftrightarrow{AD}$
- 3)  $\overleftrightarrow{BC}$  intersecting  $\angle ACD$
- 4)  $\overleftrightarrow{AB}$  intersecting  $\angle BCD$  at point B
- 5)  $\overleftrightarrow{AB}$  parallel to  $\overleftrightarrow{CD}$
- 6) Acute  $\angle BED$
- 7) Right  $\angle ADE$
- 8)  $\overleftrightarrow{BA}$  intersecting  $\overleftrightarrow{AD}$
- 9)  $\angle BAC$  creating an obtuse angle
- 10) Acute  $\angle BDE$
- 11)  $\overleftrightarrow{BD}$  intersecting  $\overline{CE}$
- 12)  $\overleftrightarrow{AC}$  intersected by  $\overline{BD}$

1. \_\_\_\_\_
2. \_\_\_\_\_
3. \_\_\_\_\_
4. \_\_\_\_\_
5. \_\_\_\_\_
6. \_\_\_\_\_
7. \_\_\_\_\_
8. \_\_\_\_\_
9. \_\_\_\_\_
10. \_\_\_\_\_
11. \_\_\_\_\_
12. \_\_\_\_\_

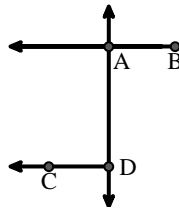
A.



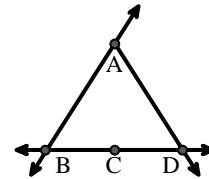
B.



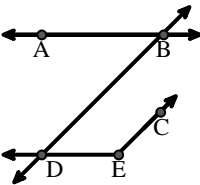
C.



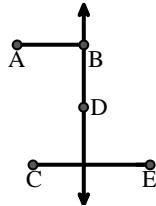
D.



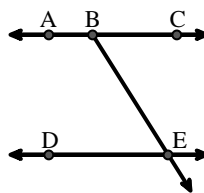
E.



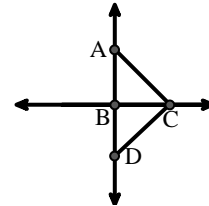
F.



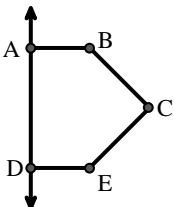
G.



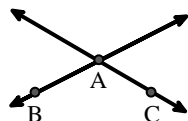
H.



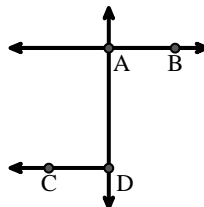
I.



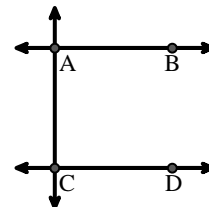
J.



K.



L.





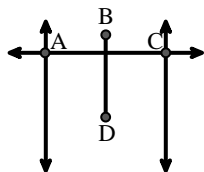
Match the description on the top with the visual image on the bottom.

**Answers**

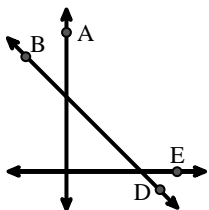
- 1)  $\overleftrightarrow{BD}$  intersecting  $\angle ACE$
- 2)  $\overleftrightarrow{AB}$  intersecting  $\overleftrightarrow{AD}$
- 3)  $\overleftrightarrow{BC}$  intersecting  $\angle ACD$
- 4)  $\overleftrightarrow{AB}$  intersecting  $\angle BCD$  at point B
- 5)  $\overleftrightarrow{AB}$  parallel to  $\overleftrightarrow{CD}$
- 6) Acute  $\angle BED$
- 7) Right  $\angle ADE$
- 8)  $\overleftrightarrow{BA}$  intersecting  $\overleftrightarrow{AD}$
- 9)  $\angle BAC$  creating an obtuse angle
- 10) Acute  $\angle BDE$
- 11)  $\overleftrightarrow{BD}$  intersecting  $\overline{CE}$
- 12)  $\overleftrightarrow{AC}$  intersected by  $\overline{BD}$

- 1. **B**
- 2. **K**
- 3. **H**
- 4. **D**
- 5. **L**
- 6. **G**
- 7. **I**
- 8. **C**
- 9. **J**
- 10. **E**
- 11. **F**
- 12. **A**

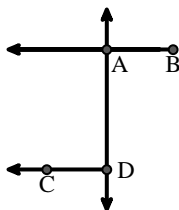
A.



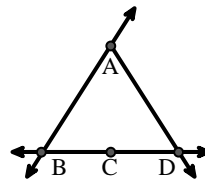
B.



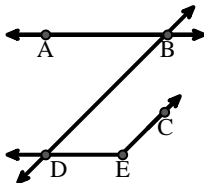
C.



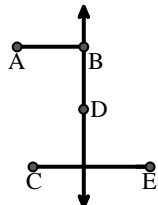
D.



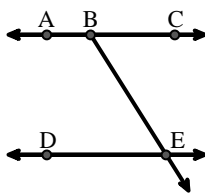
E.



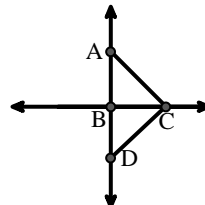
F.



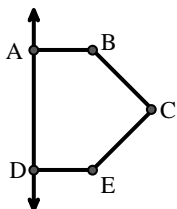
G.



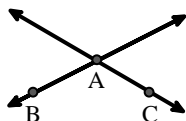
H.



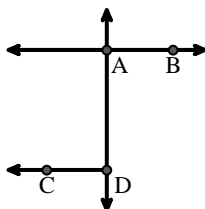
I.



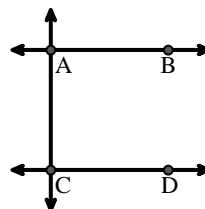
J.



K.



L.





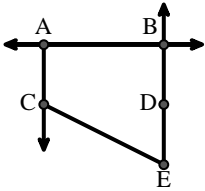
Match the description on the top with the visual image on the bottom.

**Answers**

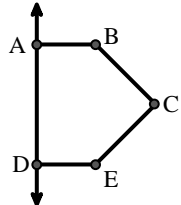
- 1)  $\overleftrightarrow{AD}$  intersecting  $\overleftrightarrow{BC}$  at point E
- 2)  $\overrightarrow{AC}$  parallel to  $\overrightarrow{EB}$
- 3) D as the midpoint of  $\overleftrightarrow{CE}$
- 4)  $\overleftrightarrow{AC}$  intersected by  $\overline{BD}$
- 5)  $\overline{BE}$  intersecting  $\overleftrightarrow{CD}$
- 6)  $\overleftrightarrow{BC}$  intersecting  $\angle ACD$
- 7)  $\angle BAC$  creating an obtuse angle
- 8) Acute  $\angle ABC$  intersecting  $\overleftrightarrow{AD}$
- 9)  $\overleftrightarrow{AB}$  intersecting  $\overleftrightarrow{AD}$
- 10)  $\overleftrightarrow{BA}$  intersecting  $\overleftrightarrow{AD}$
- 11)  $\overleftrightarrow{AB}$  parallel to  $\overleftrightarrow{CD}$
- 12) Right  $\angle ADE$

1. \_\_\_\_\_
2. \_\_\_\_\_
3. \_\_\_\_\_
4. \_\_\_\_\_
5. \_\_\_\_\_
6. \_\_\_\_\_
7. \_\_\_\_\_
8. \_\_\_\_\_
9. \_\_\_\_\_
10. \_\_\_\_\_
11. \_\_\_\_\_
12. \_\_\_\_\_

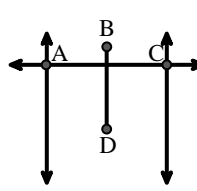
A.



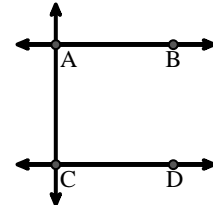
B.



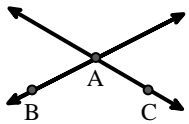
C.



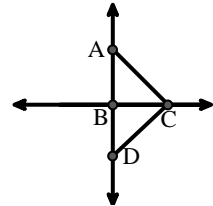
D.



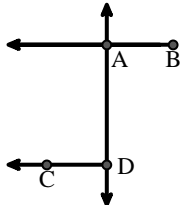
E.



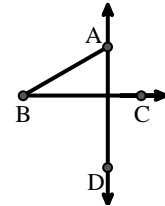
F.



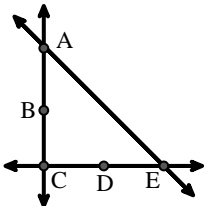
G.



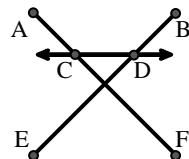
H.



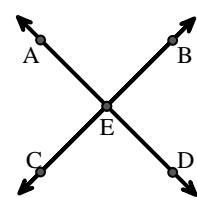
I.



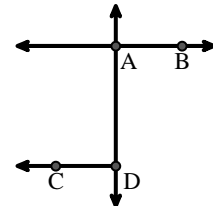
J.



K.



L.





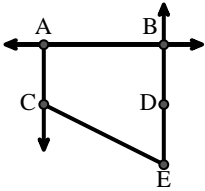
Match the description on the top with the visual image on the bottom.

**Answers**

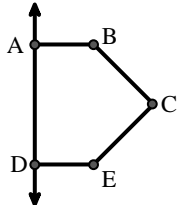
- 1)  $\overleftrightarrow{AD}$  intersecting  $\overleftrightarrow{BC}$  at point E
- 2)  $\overleftrightarrow{AC}$  parallel to  $\overleftrightarrow{EB}$
- 3) D as the midpoint of  $\overleftrightarrow{CE}$
- 4)  $\overleftrightarrow{AC}$  intersected by  $\overleftrightarrow{BD}$
- 5)  $\overleftrightarrow{BE}$  intersecting  $\overleftrightarrow{CD}$
- 6)  $\overleftrightarrow{BC}$  intersecting  $\angle ACD$
- 7)  $\angle BAC$  creating an obtuse angle
- 8) Acute  $\angle ABC$  intersecting  $\overleftrightarrow{AD}$
- 9)  $\overleftrightarrow{AB}$  intersecting  $\overleftrightarrow{AD}$
- 10)  $\overleftrightarrow{BA}$  intersecting  $\overleftrightarrow{AD}$
- 11)  $\overleftrightarrow{AB}$  parallel to  $\overleftrightarrow{CD}$
- 12) Right  $\angle ADE$

1. **K**
2. **A**
3. **I**
4. **C**
5. **J**
6. **F**
7. **E**
8. **H**
9. **L**
10. **G**
11. **D**
12. **B**

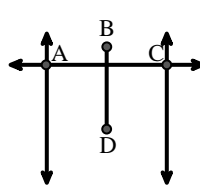
A.



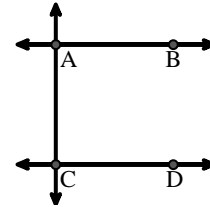
B.



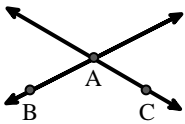
C.



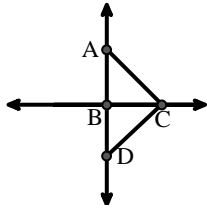
D.



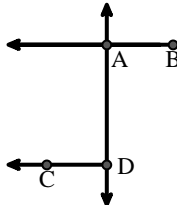
E.



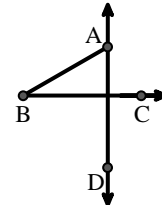
F.



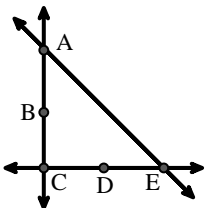
G.



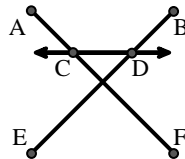
H.



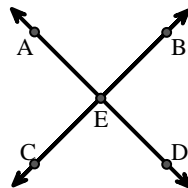
I.



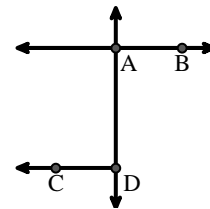
J.



K.



L.







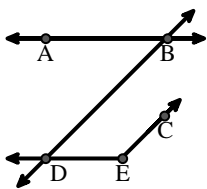
Match the description on the top with the visual image on the bottom.

**Answers**

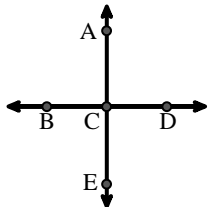
- 1) D as the midpoint of  $\overleftrightarrow{CE}$
- 2)  $\overleftrightarrow{AE}$  intersecting  $\overleftrightarrow{DB}$
- 3)  $\overleftrightarrow{AD}$  intersecting  $\overleftrightarrow{BC}$  at point E
- 4) Acute  $\angle BDE$
- 5)  $\angle BAC$  creating an obtuse angle
- 6) Right  $\angle ADE$
- 7)  $\overleftrightarrow{BC}$  intersecting  $\angle ACD$
- 8)  $\overleftrightarrow{AC}$  intersected by  $\overleftrightarrow{BD}$
- 9) Acute  $\angle ABC$  intersecting  $\overleftrightarrow{AD}$
- 10)  $\overleftrightarrow{BD}$  intersecting  $\angle ACE$
- 11)  $\overleftrightarrow{AB}$  parallel to  $\overleftrightarrow{CD}$
- 12)  $\angle DEC$  intersected by  $\overleftrightarrow{AC}$

1. \_\_\_\_\_
2. \_\_\_\_\_
3. \_\_\_\_\_
4. \_\_\_\_\_
5. \_\_\_\_\_
6. \_\_\_\_\_
7. \_\_\_\_\_
8. \_\_\_\_\_
9. \_\_\_\_\_
10. \_\_\_\_\_
11. \_\_\_\_\_
12. \_\_\_\_\_

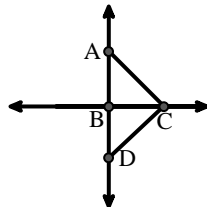
A.



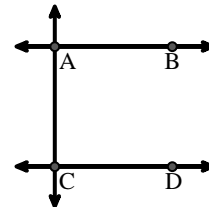
B.



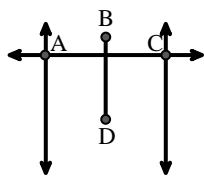
C.



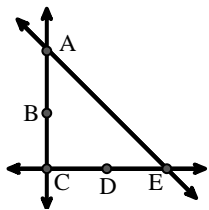
D.



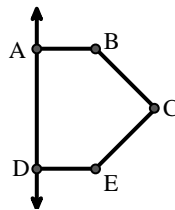
E.



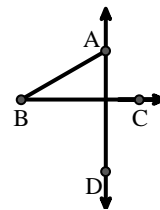
F.



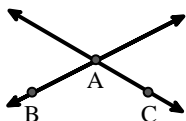
G.



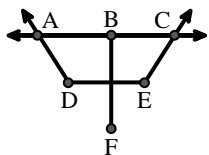
H.



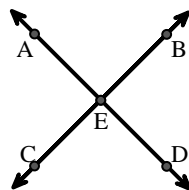
I.



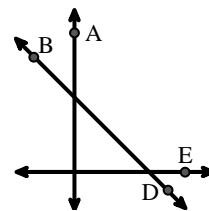
J.



K.



L.





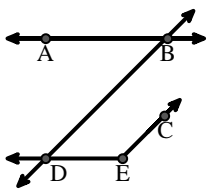
Match the description on the top with the visual image on the bottom.

**Answers**

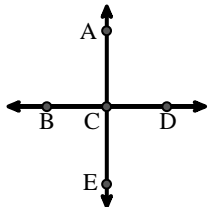
- 1) D as the midpoint of  $\overleftrightarrow{CE}$
- 2)  $\overleftrightarrow{AE}$  intersecting  $\overleftrightarrow{DB}$
- 3)  $\overleftrightarrow{AD}$  intersecting  $\overleftrightarrow{BC}$  at point E
- 4) Acute  $\angle BDE$
- 5)  $\angle BAC$  creating an obtuse angle
- 6) Right  $\angle ADE$
- 7)  $\overleftrightarrow{BC}$  intersecting  $\angle ACD$
- 8)  $\overleftrightarrow{AC}$  intersected by  $\overleftrightarrow{BD}$
- 9) Acute  $\angle ABC$  intersecting  $\overleftrightarrow{AD}$
- 10)  $\overleftrightarrow{BD}$  intersecting  $\angle ACE$
- 11)  $\overleftrightarrow{AB}$  parallel to  $\overleftrightarrow{CD}$
- 12)  $\angle DEC$  intersected by  $\overleftrightarrow{AC}$

1. **F**
2. **B**
3. **K**
4. **A**
5. **I**
6. **G**
7. **C**
8. **E**
9. **H**
10. **L**
11. **D**
12. **J**

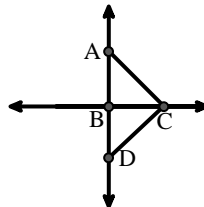
A.



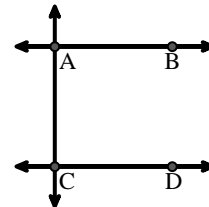
B.



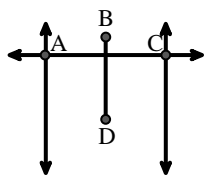
C.



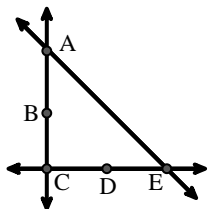
D.



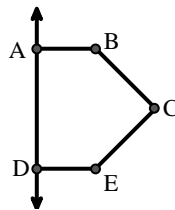
E.



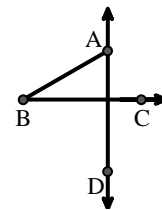
F.



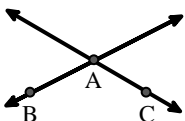
G.



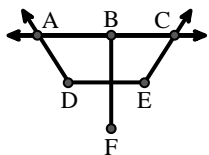
H.



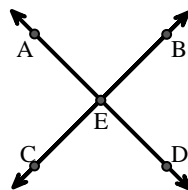
I.



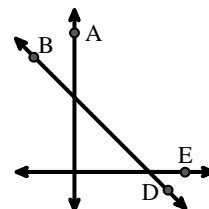
J.



K.



L.





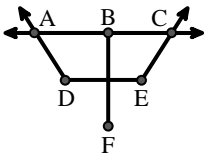
Match the description on the top with the visual image on the bottom.

**Answers**

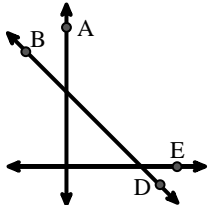
- 1)  $\overleftrightarrow{AB}$  intersecting  $\angle BCD$  at point B
- 2)  $\overleftrightarrow{AC}$  parallel to  $\overleftrightarrow{EB}$
- 3)  $\overleftrightarrow{AB}$  parallel to  $\overleftrightarrow{CD}$
- 4) Acute  $\angle BED$
- 5)  $\overleftrightarrow{AC}$  intersected by  $\overleftrightarrow{BD}$
- 6) Right  $\angle ADE$
- 7) Acute  $\angle ABC$  intersecting  $\overleftrightarrow{AD}$
- 8)  $\overleftrightarrow{BD}$  intersecting  $\angle ACE$
- 9)  $\overleftrightarrow{AC}$  perpendicular to  $\overleftrightarrow{AD}$
- 10)  $\angle DEC$  intersected by  $\overleftrightarrow{AC}$
- 11)  $\overleftrightarrow{BA}$  intersecting  $\overleftrightarrow{AD}$
- 12)  $\overleftrightarrow{AE}$  intersecting  $\overleftrightarrow{DB}$

1. \_\_\_\_\_
2. \_\_\_\_\_
3. \_\_\_\_\_
4. \_\_\_\_\_
5. \_\_\_\_\_
6. \_\_\_\_\_
7. \_\_\_\_\_
8. \_\_\_\_\_
9. \_\_\_\_\_
10. \_\_\_\_\_
11. \_\_\_\_\_
12. \_\_\_\_\_

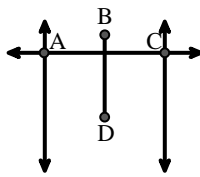
A.



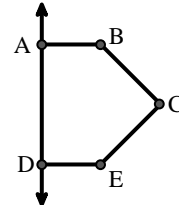
B.



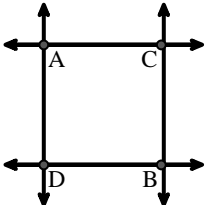
C.



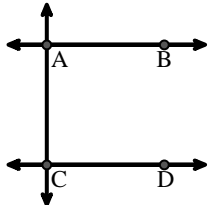
D.



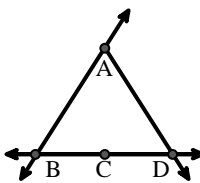
E.



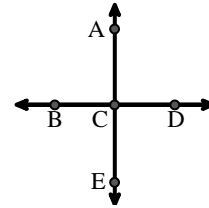
F.



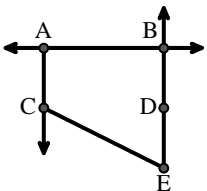
G.



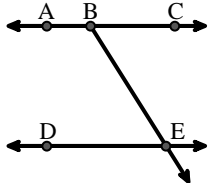
H.



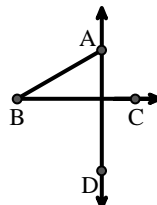
I.



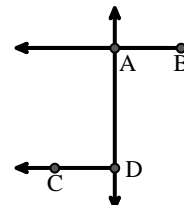
J.



K.



L.





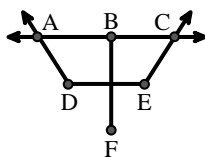
Match the description on the top with the visual image on the bottom.

- 1)  $\overleftrightarrow{AB}$  intersecting  $\angle BCD$  at point B
- 2)  $\overleftrightarrow{AC}$  parallel to  $\overleftrightarrow{EB}$
- 3)  $\overleftrightarrow{AB}$  parallel to  $\overleftrightarrow{CD}$
- 4) Acute  $\angle BED$
- 5)  $\overleftrightarrow{AC}$  intersected by  $\overleftrightarrow{BD}$
- 6) Right  $\angle ADE$
- 7) Acute  $\angle ABC$  intersecting  $\overleftrightarrow{AD}$
- 8)  $\overleftrightarrow{BD}$  intersecting  $\angle ACE$
- 9)  $\overleftrightarrow{AC}$  perpendicular to  $\overleftrightarrow{AD}$
- 10)  $\angle DEC$  intersected by  $\overleftrightarrow{AC}$
- 11)  $\overleftrightarrow{BA}$  intersecting  $\overleftrightarrow{AD}$
- 12)  $\overleftrightarrow{AE}$  intersecting  $\overleftrightarrow{DB}$

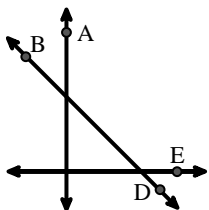
**Answers**

1. **G**
2. **I**
3. **F**
4. **J**
5. **C**
6. **D**
7. **K**
8. **B**
9. **E**
10. **A**
11. **L**
12. **H**

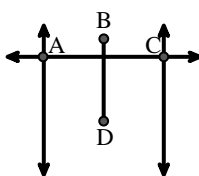
A.



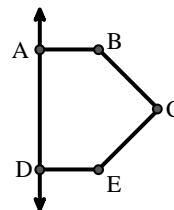
B.



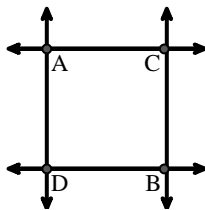
C.



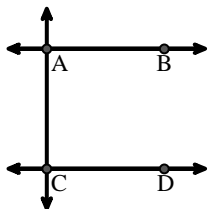
D.



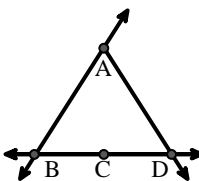
E.



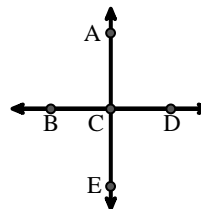
F.



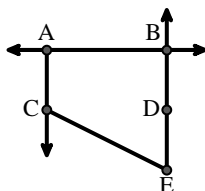
G.



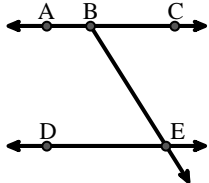
H.



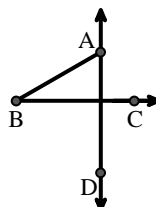
I.



J.



K.



L.

