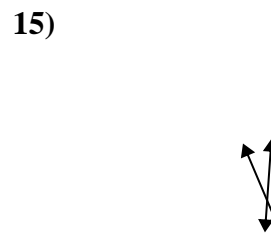
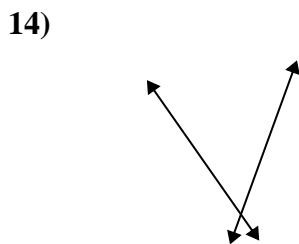
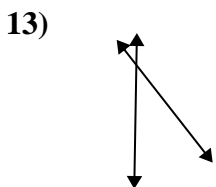
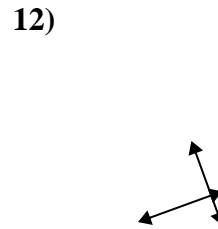
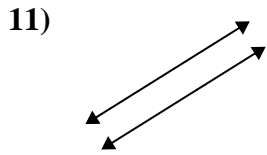
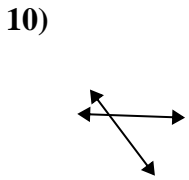
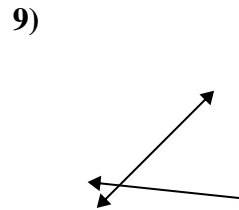
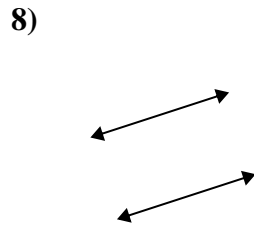
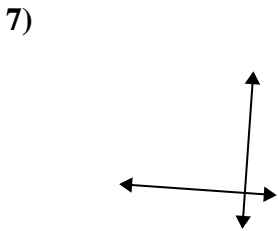
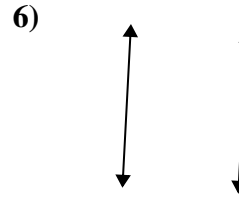
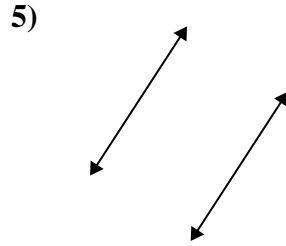
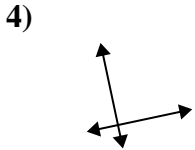
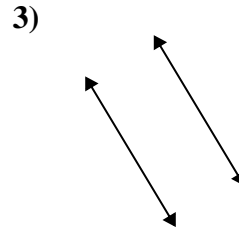
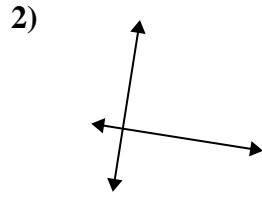
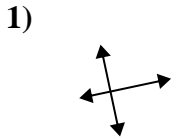




Use 'parallel', 'perp'(perpendicular) or 'inter'(intersecting) to describe the lines.

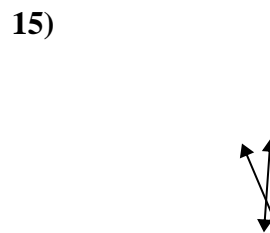
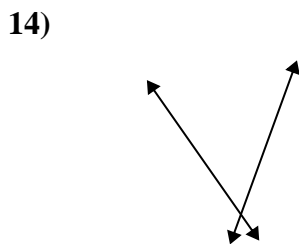
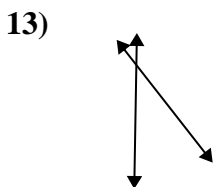
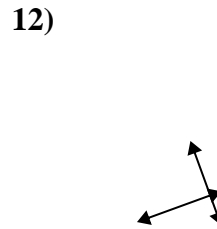
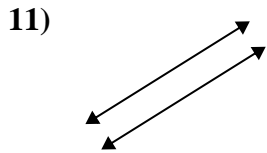
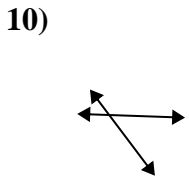
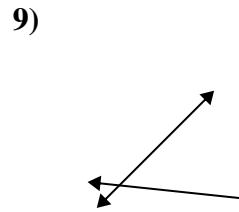
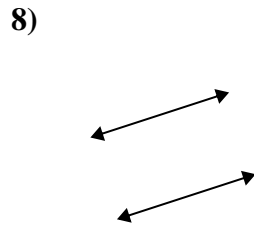
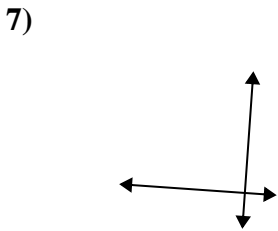
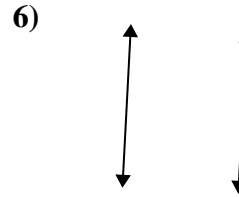
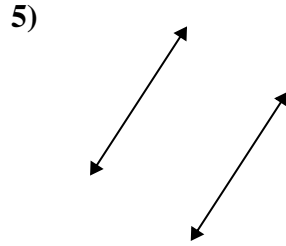
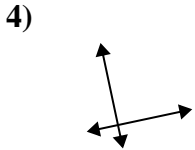
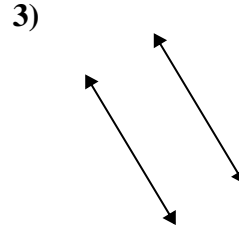
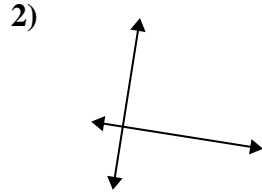
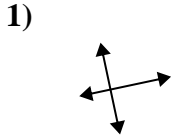
Answers



1. _____
2. _____
3. _____
4. _____
5. _____
6. _____
7. _____
8. _____
9. _____
10. _____
11. _____
12. _____
13. _____
14. _____
15. _____



Use 'parallel', 'perp'(perpendicular) or 'inter'(intersecting) to describe the lines.



Answers

1. **perp & inter**

2. **perp & inter**

3. **parallel**

4. **perp & inter**

5. **parallel**

6. **parallel**

7. **perp & inter**

8. **parallel**

9. **inter**

10. **inter**

11. **parallel**

12. **perp & inter**

13. **inter**

14. **inter**

15. **inter**