


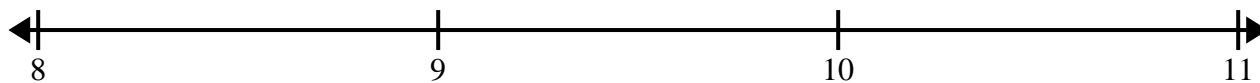


Create and label the line plot using the set of numbers provided.


- 1) $5\frac{5}{8}$ $3\frac{6}{8}$ $5\frac{6}{8}$ $4\frac{3}{8}$ $4\frac{7}{8}$ $5\frac{5}{8}$ $4\frac{2}{8}$ $3\frac{7}{8}$
 $3\frac{1}{8}$ $5\frac{5}{8}$ $4\frac{4}{8}$ $5\frac{3}{8}$ $3\frac{7}{8}$ $3\frac{3}{8}$ $3\frac{3}{8}$ $5\frac{6}{8}$




- 2) 8 $10\frac{1}{2}$ $8\frac{1}{2}$ $8\frac{1}{2}$ $10\frac{1}{2}$ $8\frac{1}{2}$ $10\frac{1}{2}$ 10
 10 10 $9\frac{1}{2}$ 9 9 8 $9\frac{1}{2}$ $9\frac{1}{2}$




- 3) $5\frac{1}{4}$ $6\frac{1}{4}$ $5\frac{2}{4}$ $7\frac{2}{4}$ $7\frac{3}{4}$ $5\frac{2}{4}$ 6 $7\frac{1}{4}$
 $7\frac{2}{4}$ $6\frac{3}{4}$ $5\frac{1}{4}$ 5 $5\frac{1}{4}$ $5\frac{2}{4}$ 6 $7\frac{2}{4}$



- 4) $3\frac{2}{4}$ $4\frac{1}{4}$ $3\frac{3}{4}$ 3 $3\frac{1}{4}$ $5\frac{2}{4}$ $5\frac{1}{4}$ $5\frac{2}{4}$
 $5\frac{1}{4}$ 3 4 $4\frac{3}{4}$ $3\frac{3}{4}$ $4\frac{2}{4}$ 4 $4\frac{3}{4}$



- 5) $9\frac{4}{8}$ $7\frac{3}{8}$ $7\frac{2}{8}$ $8\frac{7}{8}$ $7\frac{7}{8}$ $7\frac{5}{8}$ $8\frac{6}{8}$ $8\frac{7}{8}$
 $8\frac{2}{8}$ $7\frac{5}{8}$ $7\frac{6}{8}$ $7\frac{4}{8}$ $8\frac{4}{8}$ $7\frac{7}{8}$ $8\frac{4}{8}$ $8\frac{4}{8}$





Create and label the line plot using the set of numbers provided.

