





Create and label the line plot using the set of numbers provided.


- 1) 7 $6\frac{2}{8}$ $7\frac{1}{8}$ $7\frac{2}{8}$ $7\frac{3}{8}$ $7\frac{5}{8}$ $7\frac{2}{8}$ $5\frac{4}{8}$
 $5\frac{5}{8}$ $5\frac{6}{8}$ $7\frac{4}{8}$ $5\frac{1}{8}$ $7\frac{3}{8}$ $7\frac{3}{8}$ $7\frac{7}{8}$ $5\frac{7}{8}$



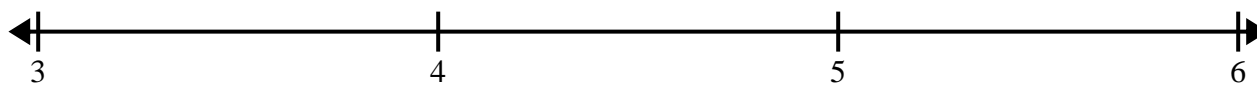
- 2) $9\frac{1}{4}$ $7\frac{1}{4}$ $7\frac{2}{4}$ $7\frac{2}{4}$ $9\frac{3}{4}$ $9\frac{3}{4}$ $9\frac{3}{4}$ $9\frac{1}{4}$
 8 $7\frac{2}{4}$ $8\frac{1}{4}$ $7\frac{3}{4}$ 8 $7\frac{3}{4}$ $9\frac{1}{4}$ $8\frac{3}{4}$



- 3) $7\frac{1}{2}$ $8\frac{1}{2}$ $6\frac{1}{2}$ $6\frac{1}{2}$ 6 7 6 $8\frac{1}{2}$
 $7\frac{1}{2}$ 8 $6\frac{1}{2}$ 7 7 8 $8\frac{1}{2}$ $7\frac{1}{2}$



- 4) $3\frac{3}{4}$ 3 $5\frac{3}{4}$ 5 $5\frac{1}{4}$ 3 $4\frac{1}{4}$ $4\frac{3}{4}$
 5 $4\frac{3}{4}$ $4\frac{2}{4}$ $4\frac{2}{4}$ $5\frac{2}{4}$ $5\frac{3}{4}$ $4\frac{2}{4}$ $5\frac{2}{4}$



- 5) 3 $4\frac{2}{8}$ $2\frac{3}{8}$ $4\frac{1}{8}$ $2\frac{2}{8}$ $2\frac{6}{8}$ $4\frac{6}{8}$ $3\frac{5}{8}$
 $3\frac{3}{8}$ $3\frac{6}{8}$ $2\frac{4}{8}$ 2 4 $4\frac{2}{8}$ $2\frac{1}{8}$ $2\frac{2}{8}$

