

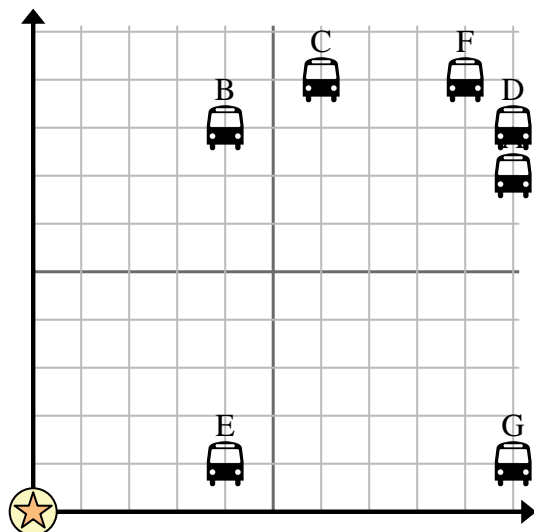


Use the grid to solve each problem.

= Bus Stop

= School

= 1 Square Block



- 1) The school wanted to add a new bus stop, but wanted to make sure it was at least 2 blocks east and 3 blocks north would that spot fit their requirement?
- 2) Which bus stop is closest to the school?
- 3) Which bus stop is furthest from the school?
- 4) Which bus stop is further east? Stop G or stop A?
- 5) Which bus stop is 4 blocks east and 1 blocks north from the school?

Answers

1. _____
2. _____
3. _____
4. _____
5. _____
6. _____
7. _____
8. _____
9. _____
10. _____

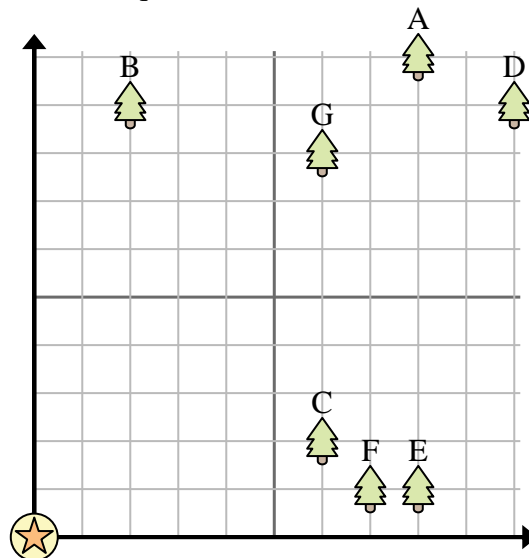
- 6) Mike wanted to plant a new tree, but wanted to make sure it was at least 2 yards from a pre-existing tree. Should he plant a tree 4 yards east and 8 yards north of his house?

= Tree

= House

= 1 Square Yard

- 7) Which tree is closest to the house?
- 8) Which tree is furthest from the house?
- 9) Which tree is further south? Tree D or tree A?
- 10) If you were to go 8 yards east and 1 yards north from the house which tree would you end up at?



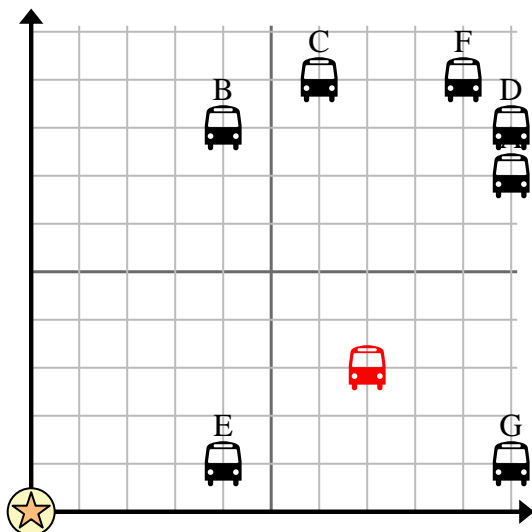


Use the grid to solve each problem.

= Bus Stop

= School

= 1 Square Block



- 1) The school wanted to add a new bus stop, but wanted to make sure it was at least 2 blocks east and 3 blocks north would that spot fit their requirement?
- 2) Which bus stop is closest to the school?
- 3) Which bus stop is furthest from the school?
- 4) Which bus stop is further east? Stop G or stop A?
- 5) Which bus stop is 4 blocks east and 1 blocks north from the school?

Answers

1. yes
2. E
3. D
4. A
5. E
6. yes
7. C
8. D
9. D
10. E

- 6) Mike wanted to plant a new tree, but wanted to make sure it was at least 2 yards from a pre-existing tree. Should he plant a tree 4 yards east and 8 yards north of his house?

= Tree

= House

= 1 Square Yard

- 7) Which tree is closest to the house?
- 8) Which tree is furthest from the house?
- 9) Which tree is further south? Tree D or tree A?
- 10) If you were to go 8 yards east and 1 yards north from the house which tree would you end up at?

