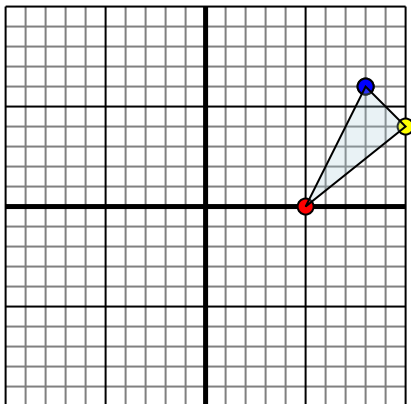




Reflect each shape as described.

1)

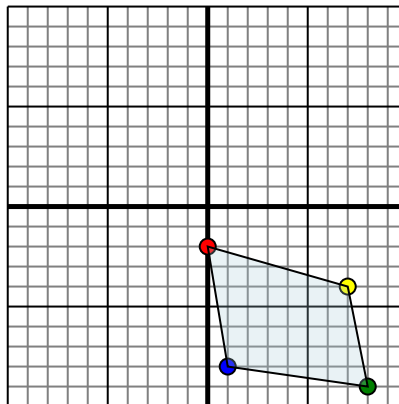


The shape above has the following coordinates:

- A. (5,0)
- B. (10,4)
- C. (8,6)

Reflect the shape over the X axis.

2)

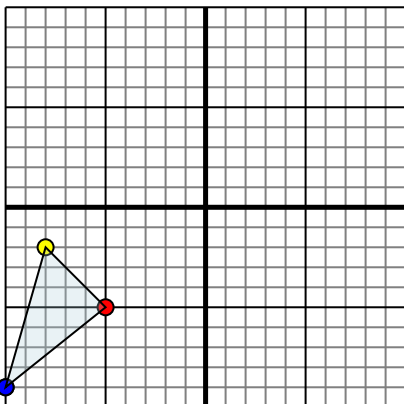


The shape above has the following coordinates:

- A. (0,-2)
- B. (7,-4)
- C. (8,-9)
- D. (1,-8)

Reflect the shape over the X axis.

3)

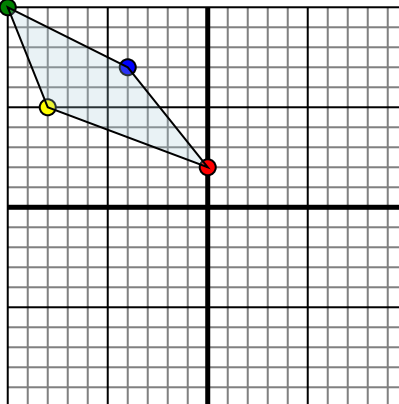


The shape above has the following coordinates:

- A. (-5,-5)
- B. (-8,-2)
- C. (-10,-9)

Reflect the shape over the X axis.

4)



The shape above has the following coordinates:

- A. (0,2)
- B. (-8,5)
- C. (-10,10)
- D. (-4,7)

Reflect the shape over the Y axis.

Answers

1. _____

2. _____

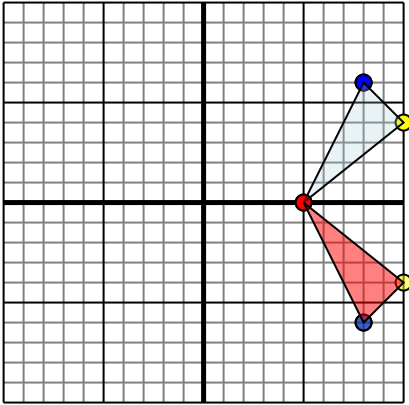
3. _____

4. _____



Reflect each shape as described.

1)

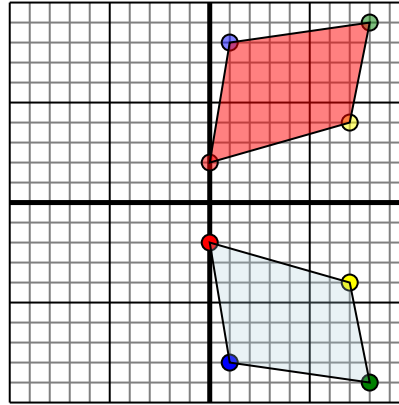


The shape above has the following coordinates:

- A. (5,0)
- B. (10,4)
- C. (8,6)

Reflect the shape over the X axis.

2)

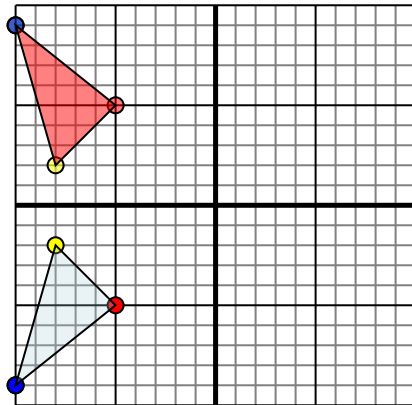


The shape above has the following coordinates:

- A. (0,-2)
- B. (7,-4)
- C. (8,-9)
- D. (1,-8)

Reflect the shape over the X axis.

3)

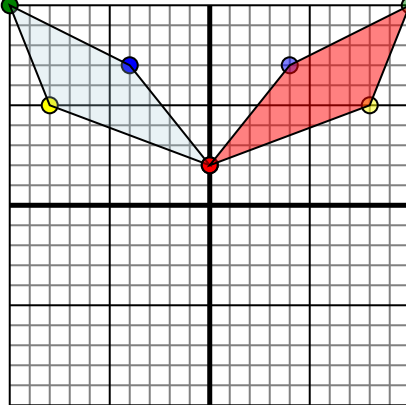


The shape above has the following coordinates:

- A. (-5,-5)
- B. (-8,-2)
- C. (-10,-9)

Reflect the shape over the X axis.

4)



The shape above has the following coordinates:

- A. (0,2)
- B. (-8,5)
- C. (-10,10)
- D. (-4,7)

Reflect the shape over the Y axis.

Answers1. 5,0 10,-4 8,-6 Graph2. 0,2 7,4 8,9 1,8 Graph3. -5,5 -8,2 -10,9 Graph4. 0,2 8,5 10,10 4,7 Graph