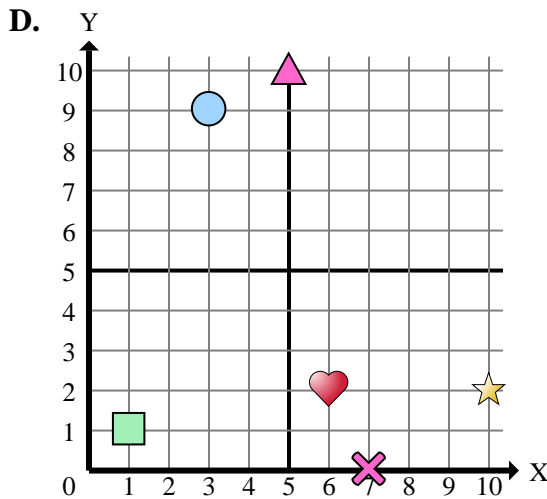
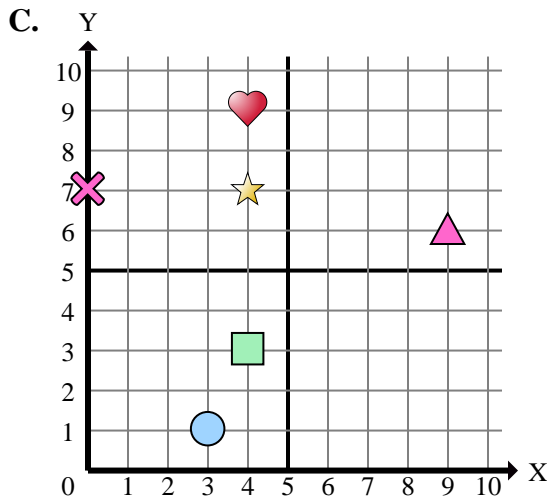
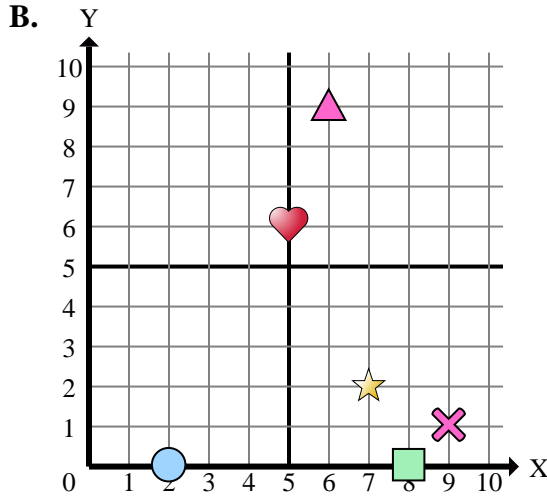
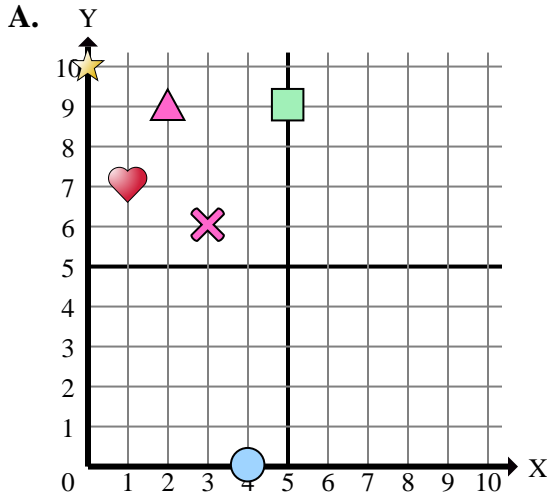




Determine which coordinate plane answers each question.



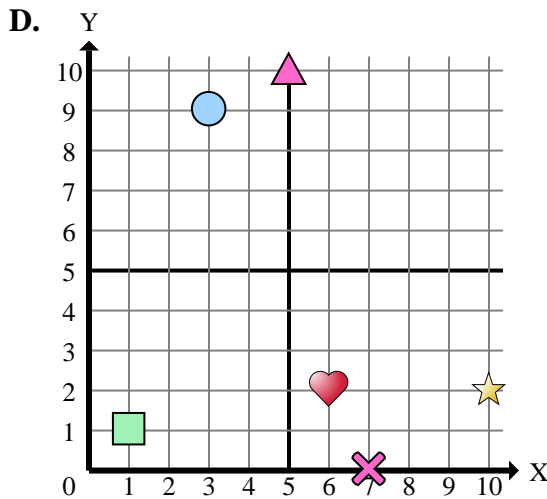
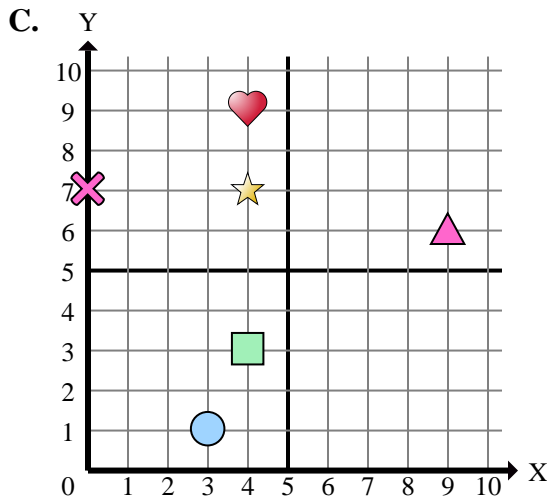
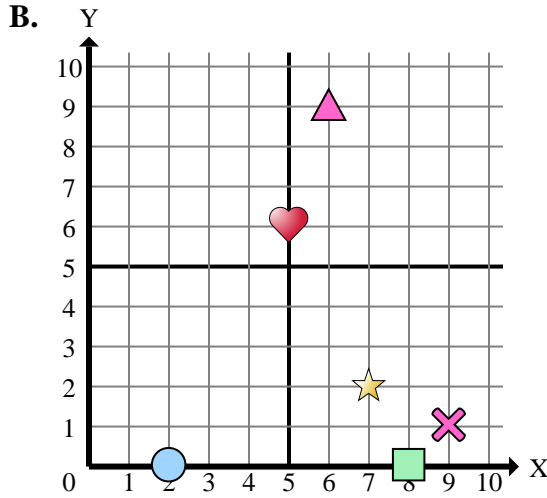
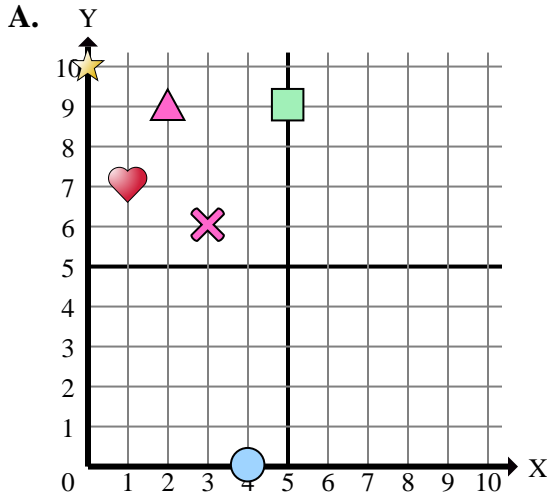
- 1) Which coordinate plane has a shape at (8 , 0)?
- 2) Which coordinate plane has a shape at (6 , 2)?
- 3) Which coordinate plane has a shape at (7 , 0)?
- 4) Which coordinate plane has a shape at (4 , 0)?
- 5) Which coordinate plane has a shape at (3 , 6)?
- 6) Which coordinate plane has a shape at (5 , 10)?
- 7) Which coordinate plane has a shape at (4 , 7)?
- 8) Which coordinate plane has a shape at (0 , 7)?
- 9) Which coordinate plane has a shape at (4 , 9)?
- 10) Which coordinate plane has a shape at (4 , 3)?
- 11) Which coordinate plane has a shape at (7 , 2)?
- 12) Which coordinate plane has a shape at (3 , 9)?
- 13) Which coordinate plane has a shape at (6 , 9)?
- 14) Which coordinate plane has a shape at (5 , 9)?
- 15) Which coordinate plane has a shape at (0 , 10)?

Answers

1. \_\_\_\_\_
2. \_\_\_\_\_
3. \_\_\_\_\_
4. \_\_\_\_\_
5. \_\_\_\_\_
6. \_\_\_\_\_
7. \_\_\_\_\_
8. \_\_\_\_\_
9. \_\_\_\_\_
10. \_\_\_\_\_
11. \_\_\_\_\_
12. \_\_\_\_\_
13. \_\_\_\_\_
14. \_\_\_\_\_
15. \_\_\_\_\_



Determine which coordinate plane answers each question.



- 1) Which coordinate plane has a shape at (8 , 0)?
- 2) Which coordinate plane has a shape at (6 , 2)?
- 3) Which coordinate plane has a shape at (7 , 0)?
- 4) Which coordinate plane has a shape at (4 , 0)?
- 5) Which coordinate plane has a shape at (3 , 6)?
- 6) Which coordinate plane has a shape at (5 , 10)?
- 7) Which coordinate plane has a shape at (4 , 7)?
- 8) Which coordinate plane has a shape at (0 , 7)?
- 9) Which coordinate plane has a shape at (4 , 9)?
- 10) Which coordinate plane has a shape at (4 , 3)?
- 11) Which coordinate plane has a shape at (7 , 2)?
- 12) Which coordinate plane has a shape at (3 , 9)?
- 13) Which coordinate plane has a shape at (6 , 9)?
- 14) Which coordinate plane has a shape at (5 , 9)?
- 15) Which coordinate plane has a shape at (0 , 10)?

Answers

1.     **B**
2.     **D**
3.     **D**
4.     **A**
5.     **A**
6.     **D**
7.     **C**
8.     **C**
9.     **C**
10.     **C**
11.     **B**
12.     **D**
13.     **B**
14.     **A**
15.     **A**