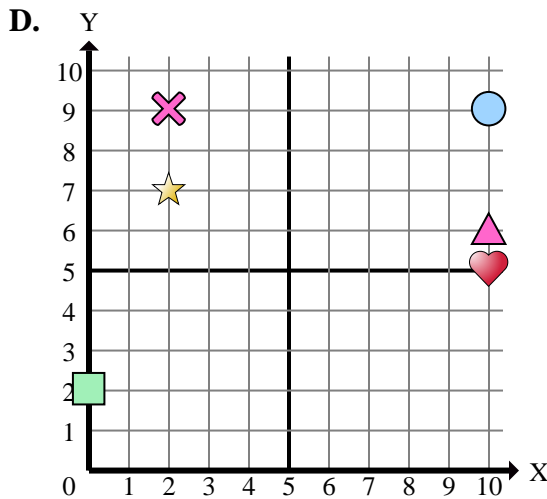
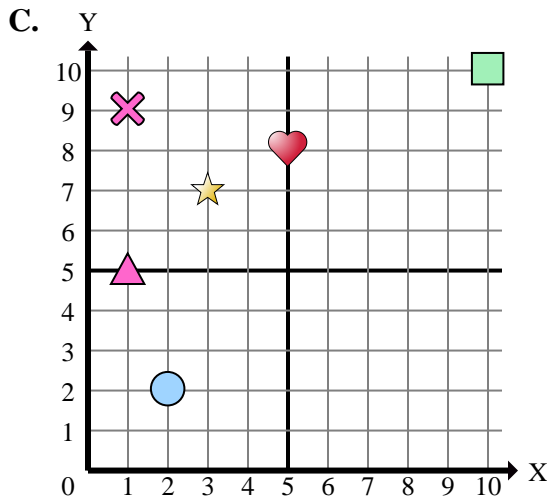
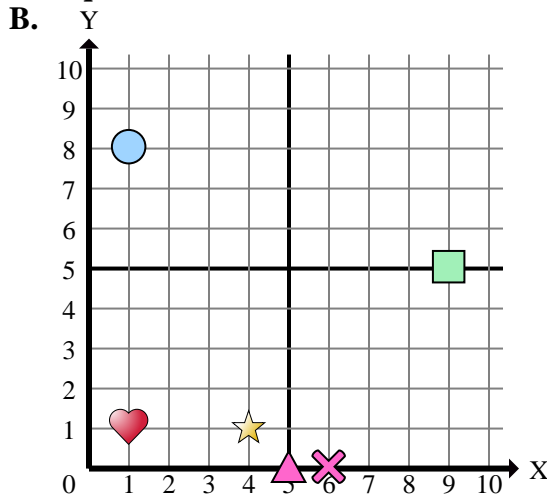
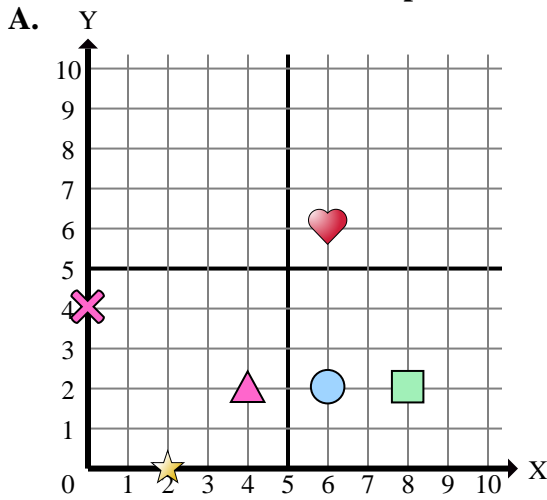




Determine which coordinate plane answers each question.



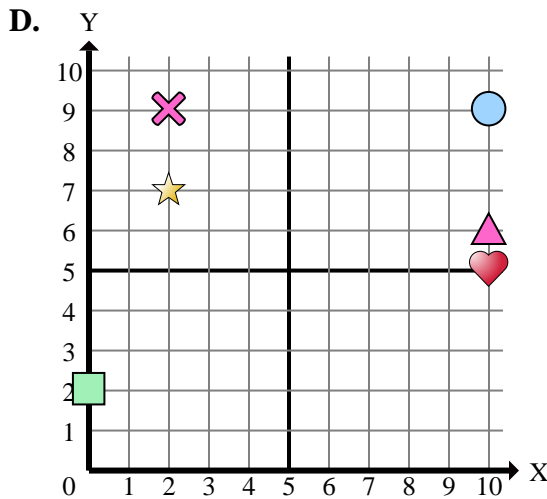
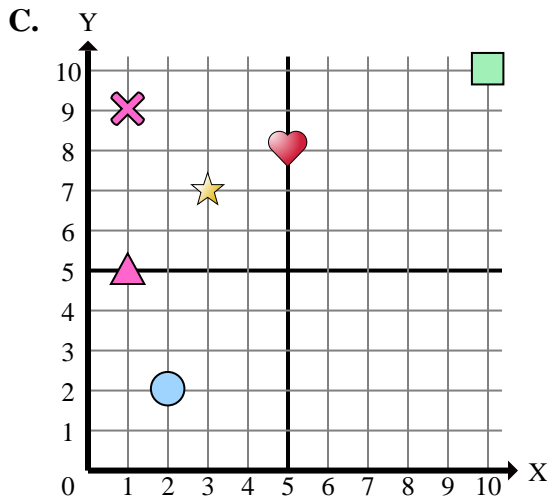
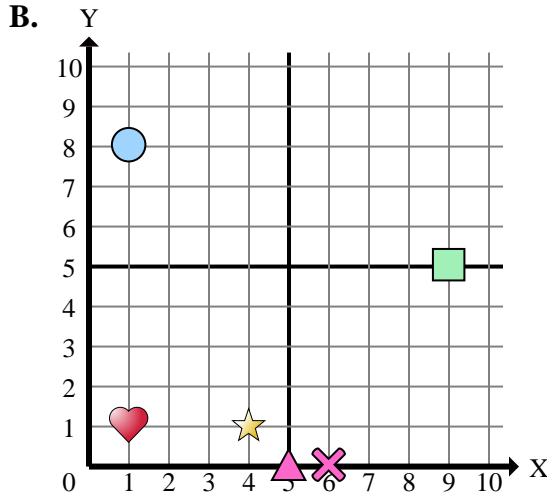
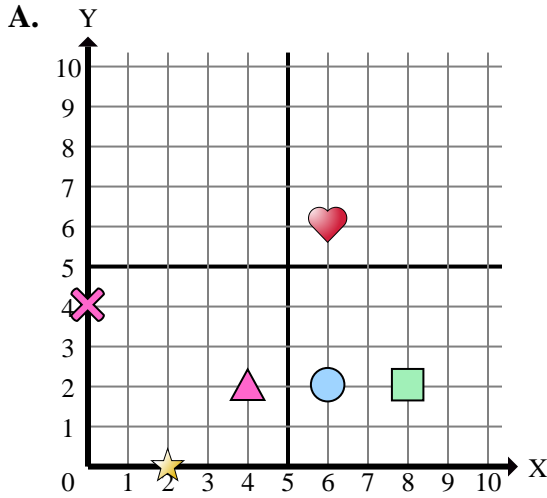
- Which coordinate plane has a shape at (1 , 8)?
- Which coordinate plane has a shape at (0 , 4)?
- Which coordinate plane has a shape at (1 , 1)?
- Which coordinate plane has a shape at (6 , 0)?
- Which coordinate plane has a shape at (10 , 5)?
- Which coordinate plane has a shape at (9 , 5)?
- Which coordinate plane has a shape at (2 , 0)?
- Which coordinate plane has a shape at (6 , 2)?
- Which coordinate plane has a shape at (4 , 2)?
- Which coordinate plane has a shape at (10 , 10)?
- Which coordinate plane has a shape at (8 , 2)?
- Which coordinate plane has a shape at (2 , 7)?
- Which coordinate plane has a shape at (1 , 5)?
- Which coordinate plane has a shape at (6 , 6)?
- Which coordinate plane has a shape at (3 , 7)?

Answers

- \_\_\_\_\_
- \_\_\_\_\_
- \_\_\_\_\_
- \_\_\_\_\_
- \_\_\_\_\_
- \_\_\_\_\_
- \_\_\_\_\_
- \_\_\_\_\_
- \_\_\_\_\_
- \_\_\_\_\_
- \_\_\_\_\_
- \_\_\_\_\_
- \_\_\_\_\_
- \_\_\_\_\_
- \_\_\_\_\_



Determine which coordinate plane answers each question.



- 1) Which coordinate plane has a shape at (1 , 8)?
- 2) Which coordinate plane has a shape at (0 , 4)?
- 3) Which coordinate plane has a shape at (1 , 1)?
- 4) Which coordinate plane has a shape at (6 , 0)?
- 5) Which coordinate plane has a shape at (10 , 5)?
- 6) Which coordinate plane has a shape at (9 , 5)?
- 7) Which coordinate plane has a shape at (2 , 0)?
- 8) Which coordinate plane has a shape at (6 , 2)?
- 9) Which coordinate plane has a shape at (4 , 2)?
- 10) Which coordinate plane has a shape at (10 , 10)?
- 11) Which coordinate plane has a shape at (8 , 2)?
- 12) Which coordinate plane has a shape at (2 , 7)?
- 13) Which coordinate plane has a shape at (1 , 5)?
- 14) Which coordinate plane has a shape at (6 , 6)?
- 15) Which coordinate plane has a shape at (3 , 7)?

Answers

1.     **B**
2.     **A**
3.     **B**
4.     **B**
5.     **D**
6.     **B**
7.     **A**
8.     **A**
9.     **A**
10.     **C**
11.     **A**
12.     **D**
13.     **C**
14.     **A**
15.     **C**