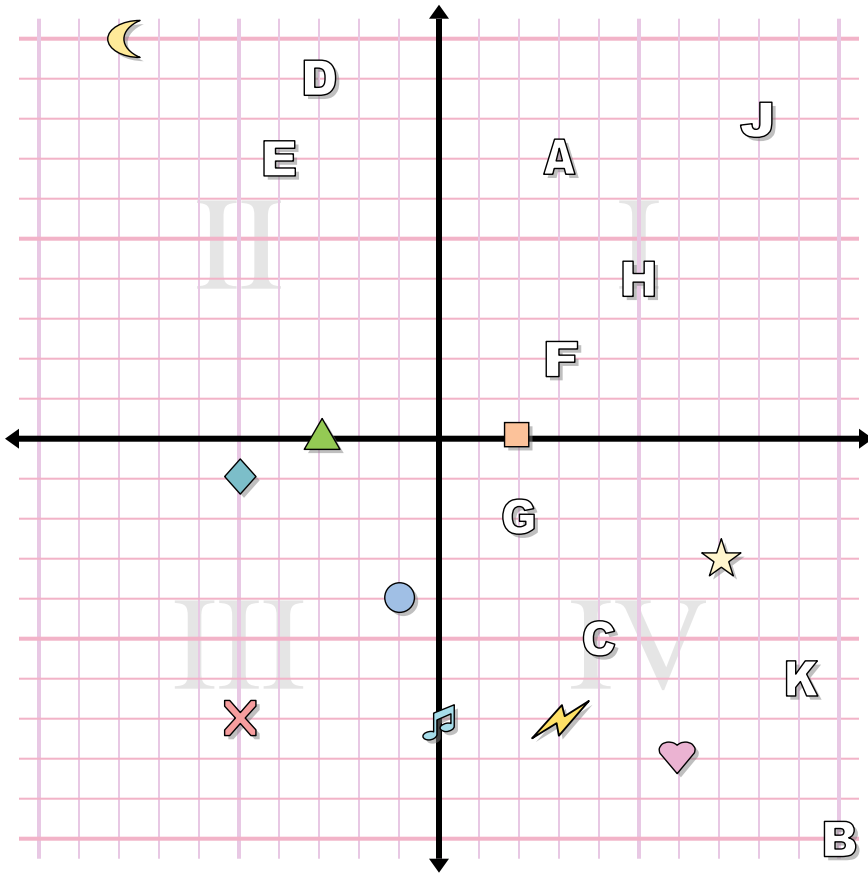




**Answers**



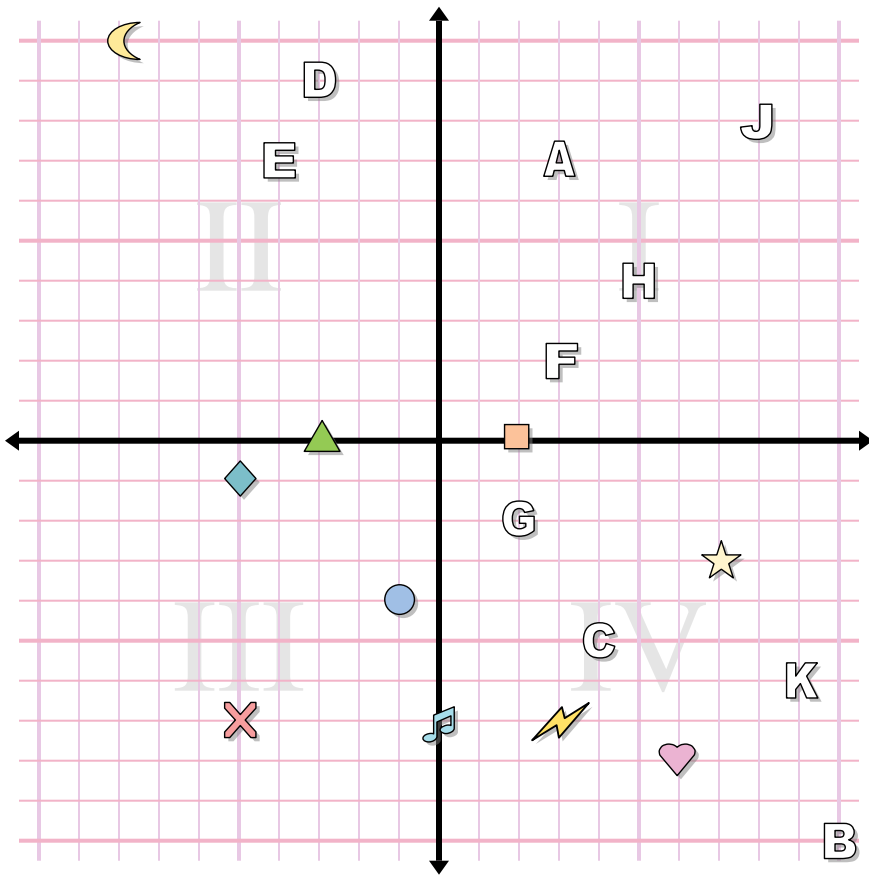
1. \_\_\_\_\_
2. \_\_\_\_\_
3. \_\_\_\_\_
4. \_\_\_\_\_
5. \_\_\_\_\_
6. \_\_\_\_\_
7. \_\_\_\_\_
8. \_\_\_\_\_
9. \_\_\_\_\_
10. \_\_\_\_\_
11. \_\_\_\_\_
12. \_\_\_\_\_
13. \_\_\_\_\_
14. \_\_\_\_\_
15. \_\_\_\_\_
16. \_\_\_\_\_
17. \_\_\_\_\_
18. \_\_\_\_\_
19. \_\_\_\_\_
20. \_\_\_\_\_

**Determine the coordinates of each figure.**

- |               |              |
|---------------|--------------|
| 1) music note | 2) circle    |
| 3) lightning  | 4) cross     |
| 5) moon       | 6) diamond   |
| 7) star       | 8) heart     |
| 9) square     | 10) triangle |

**Determine which letter is at each coordinate.**

- |              |                |
|--------------|----------------|
| 11) (-4 , 7) | 12) (2 , -2)   |
| 13) (-3 , 9) | 14) (5 , 4)    |
| 15) (8 , 8)  | 16) (3 , 7)    |
| 17) (4 , -5) | 18) (10 , -10) |
| 19) (9 , -6) | 20) (3 , 2)    |



Answers

1. (0, -7)
2. (-1, -4)
3. (3, -7)
4. (-5, -7)
5. (-8, 10)
6. (-5, -1)
7. (7, -3)
8. (6, -8)
9. (2, 0)
10. (-3, 0)
11. E
12. G
13. D
14. H
15. J
16. A
17. C
18. B
19. K
20. F

Determine the coordinates of each figure.

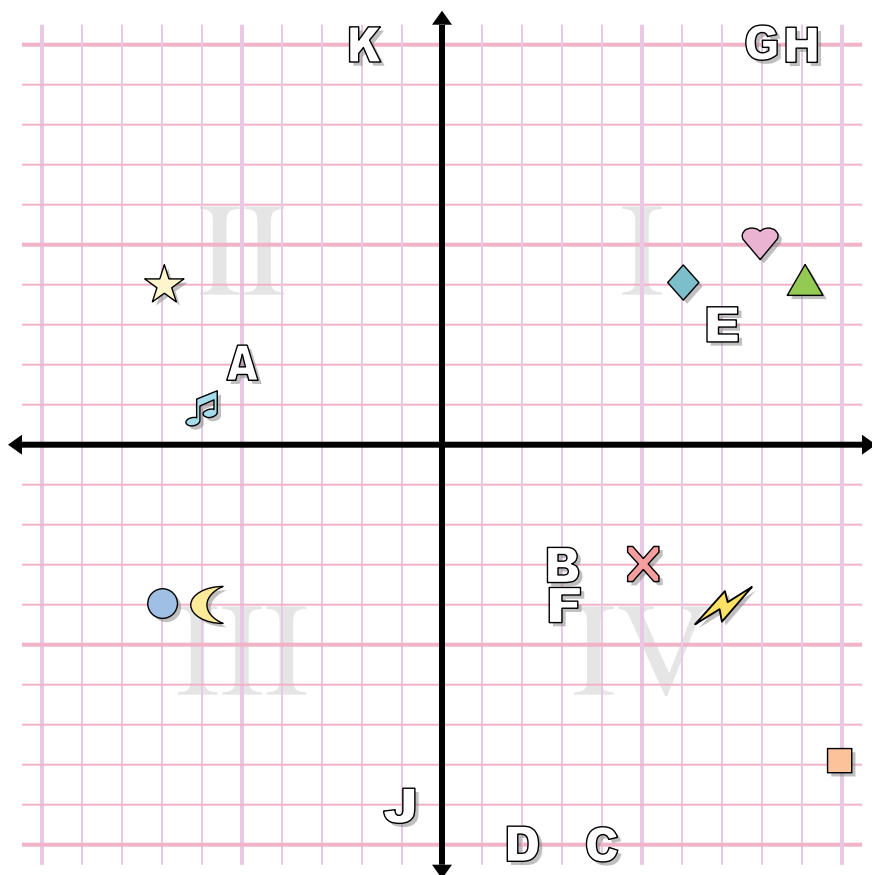
- |               |              |
|---------------|--------------|
| 1) music note | 2) circle    |
| 3) lightning  | 4) cross     |
| 5) moon       | 6) diamond   |
| 7) star       | 8) heart     |
| 9) square     | 10) triangle |

Determine which letter is at each coordinate.

- |             |               |
|-------------|---------------|
| 11) (-4, 7) | 12) (2, -2)   |
| 13) (-3, 9) | 14) (5, 4)    |
| 15) (8, 8)  | 16) (3, 7)    |
| 17) (4, -5) | 18) (10, -10) |
| 19) (9, -6) | 20) (3, 2)    |



Answers



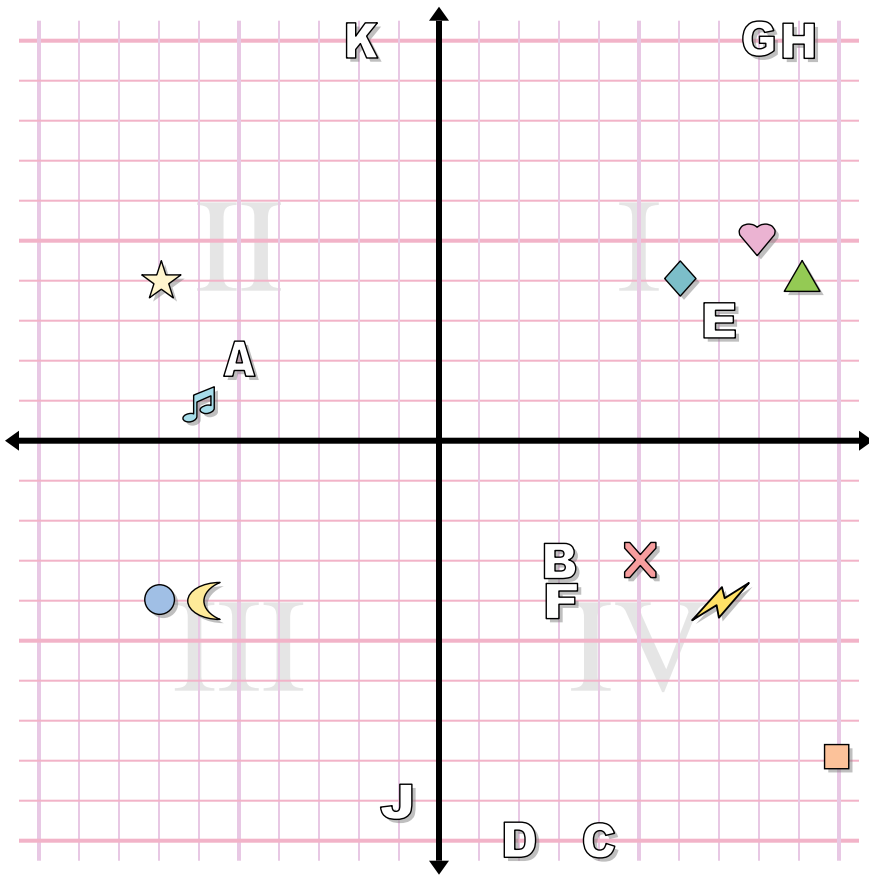
Determine the coordinates of each figure.

- 1) circle
- 2) diamond
- 3) square
- 4) heart
- 5) music note
- 6) cross
- 7) lightning
- 8) moon
- 9) triangle
- 10) star

Determine which letter is at each coordinate.

- 11) (2, -10)
- 12) (9, 10)
- 13) (7, 3)
- 14) (4, -10)
- 15) (3, -3)
- 16) (-2, 10)
- 17) (-5, 2)
- 18) (8, 10)
- 19) (-1, -9)
- 20) (3, -4)

1. \_\_\_\_\_
2. \_\_\_\_\_
3. \_\_\_\_\_
4. \_\_\_\_\_
5. \_\_\_\_\_
6. \_\_\_\_\_
7. \_\_\_\_\_
8. \_\_\_\_\_
9. \_\_\_\_\_
10. \_\_\_\_\_
11. \_\_\_\_\_
12. \_\_\_\_\_
13. \_\_\_\_\_
14. \_\_\_\_\_
15. \_\_\_\_\_
16. \_\_\_\_\_
17. \_\_\_\_\_
18. \_\_\_\_\_
19. \_\_\_\_\_
20. \_\_\_\_\_



Answers

1. (-7 , -4)
2. (6 , 4)
3. (10 , -8)
4. (8 , 5)
5. (-6 , 1)
6. (5 , -3)
7. (7 , -4)
8. (-6 , -4)
9. (9 , 4)
10. (-7 , 4)
11. D
12. H
13. E
14. C
15. B
16. K
17. A
18. G
19. J
20. F

Determine the coordinates of each figure.

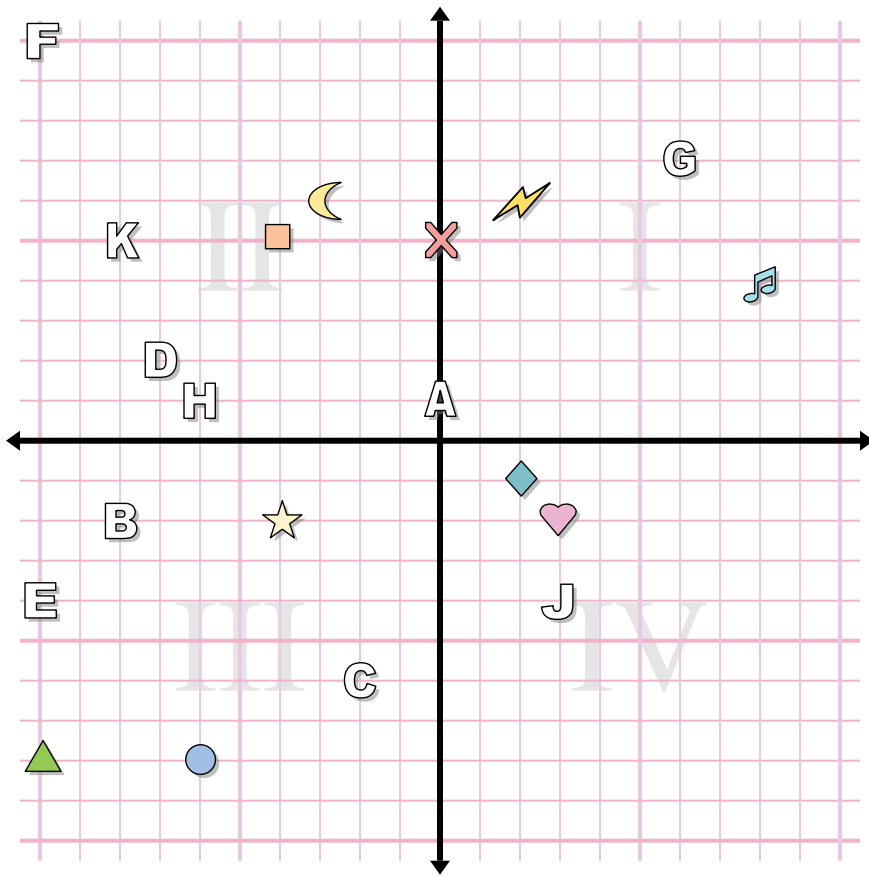
- |               |            |
|---------------|------------|
| 1) circle     | 2) diamond |
| 3) square     | 4) heart   |
| 5) music note | 6) cross   |
| 7) lightning  | 8) moon    |
| 9) triangle   | 10) star   |

Determine which letter is at each coordinate.

- |                |                |
|----------------|----------------|
| 11) ( 2 , -10) | 12) ( 9 , 10)  |
| 13) ( 7 , 3)   | 14) ( 4 , -10) |
| 15) ( 3 , -3)  | 16) ( -2 , 10) |
| 17) ( -5 , 2)  | 18) ( 8 , 10)  |
| 19) ( -1 , -9) | 20) ( 3 , -4)  |



Answers



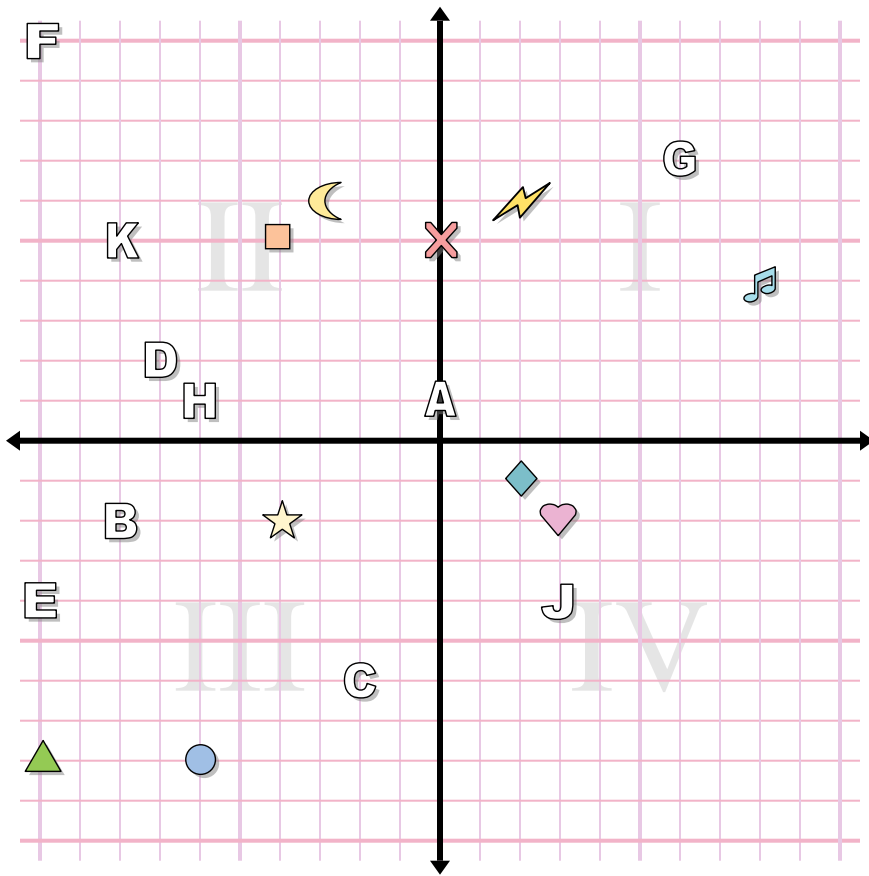
Determine the coordinates of each figure.

- |               |              |
|---------------|--------------|
| 1) triangle   | 2) moon      |
| 3) square     | 4) heart     |
| 5) star       | 6) circle    |
| 7) music note | 8) lightning |
| 9) cross      | 10) diamond  |

Determine which letter is at each coordinate.

- |              |               |
|--------------|---------------|
| 11) (3, -4)  | 12) (-6, 1)   |
| 13) (-2, -6) | 14) (-8, 5)   |
| 15) (0, 1)   | 16) (-10, 10) |
| 17) (6, 7)   | 18) (-7, 2)   |
| 19) (-8, -2) | 20) (-10, -4) |

1. \_\_\_\_\_
2. \_\_\_\_\_
3. \_\_\_\_\_
4. \_\_\_\_\_
5. \_\_\_\_\_
6. \_\_\_\_\_
7. \_\_\_\_\_
8. \_\_\_\_\_
9. \_\_\_\_\_
10. \_\_\_\_\_
11. \_\_\_\_\_
12. \_\_\_\_\_
13. \_\_\_\_\_
14. \_\_\_\_\_
15. \_\_\_\_\_
16. \_\_\_\_\_
17. \_\_\_\_\_
18. \_\_\_\_\_
19. \_\_\_\_\_
20. \_\_\_\_\_



**Answers**

1. **(-10 , -8)**
2. **(-3 , 6)**
3. **(-4 , 5)**
4. **(3 , -2)**
5. **(-4 , -2)**
6. **(-6 , -8)**
7. **(8 , 4)**
8. **(2 , 6)**
9. **(0 , 5)**
10. **(2 , -1)**
11. **J**
12. **H**
13. **C**
14. **K**
15. **A**
16. **F**
17. **G**
18. **D**
19. **B**
20. **E**

**Determine the coordinates of each figure.**

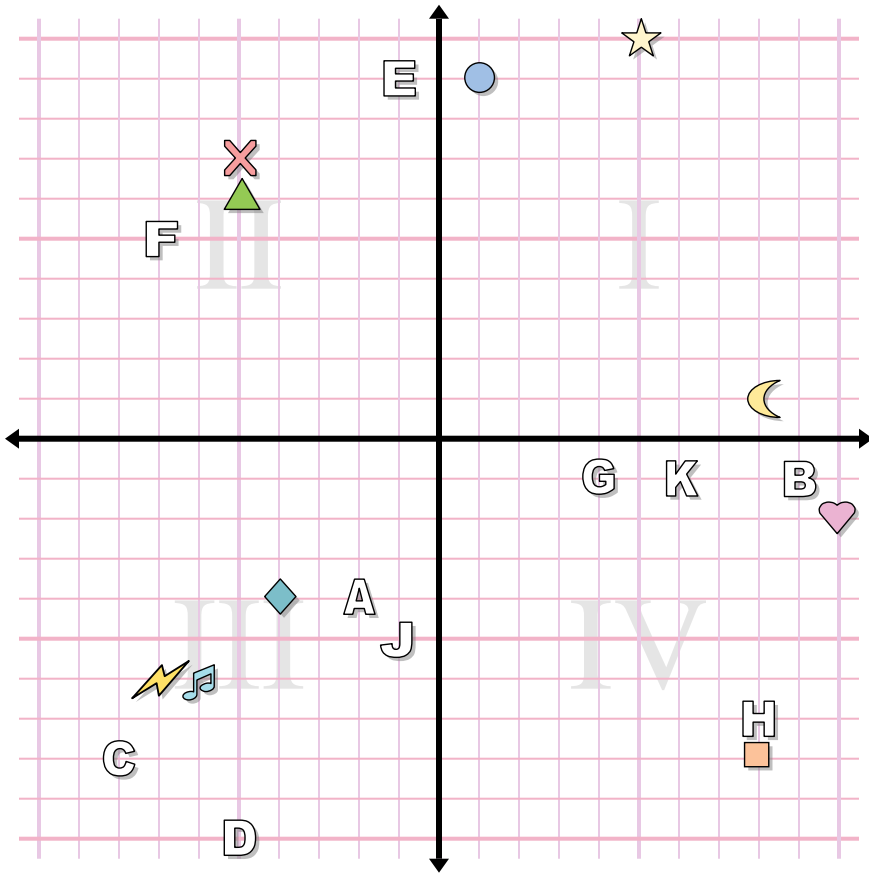
- |               |              |
|---------------|--------------|
| 1) triangle   | 2) moon      |
| 3) square     | 4) heart     |
| 5) star       | 6) circle    |
| 7) music note | 8) lightning |
| 9) cross      | 10) diamond  |

**Determine which letter is at each coordinate.**

- |               |                |
|---------------|----------------|
| 11) (3 , -4)  | 12) (-6 , 1)   |
| 13) (-2 , -6) | 14) (-8 , 5)   |
| 15) (0 , 1)   | 16) (-10 , 10) |
| 17) (6 , 7)   | 18) (-7 , 2)   |
| 19) (-8 , -2) | 20) (-10 , -4) |



Answers



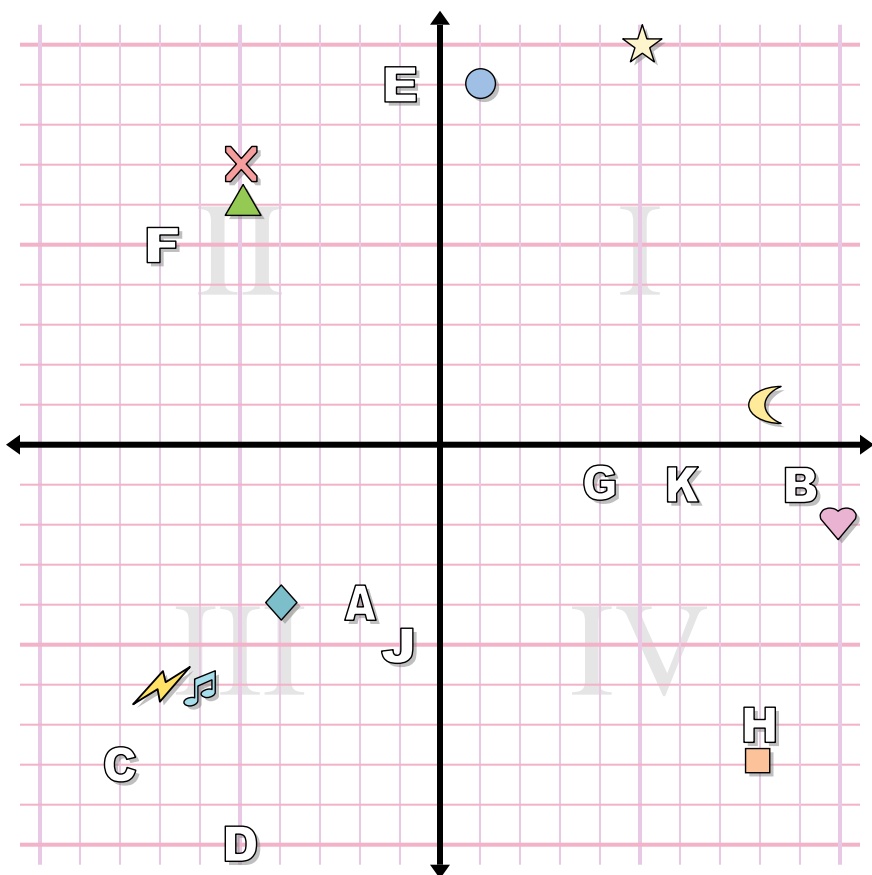
1. \_\_\_\_\_
2. \_\_\_\_\_
3. \_\_\_\_\_
4. \_\_\_\_\_
5. \_\_\_\_\_
6. \_\_\_\_\_
7. \_\_\_\_\_
8. \_\_\_\_\_
9. \_\_\_\_\_
10. \_\_\_\_\_
11. \_\_\_\_\_
12. \_\_\_\_\_
13. \_\_\_\_\_
14. \_\_\_\_\_
15. \_\_\_\_\_
16. \_\_\_\_\_
17. \_\_\_\_\_
18. \_\_\_\_\_
19. \_\_\_\_\_
20. \_\_\_\_\_

Determine the coordinates of each figure.

- |            |               |
|------------|---------------|
| 1) cross   | 2) music note |
| 3) star    | 4) circle     |
| 5) square  | 6) heart      |
| 7) diamond | 8) lightning  |
| 9) moon    | 10) triangle  |

Determine which letter is at each coordinate.

- |              |               |
|--------------|---------------|
| 11) (-2, -4) | 12) (-1, -5)  |
| 13) (8, -7)  | 14) (-1, 9)   |
| 15) (6, -1)  | 16) (-8, -8)  |
| 17) (9, -1)  | 18) (4, -1)   |
| 19) (-7, 5)  | 20) (-5, -10) |



**Answers**

1. **(-5, 7)**
2. **(-6, -6)**
3. **(5, 10)**
4. **(1, 9)**
5. **(8, -8)**
6. **(10, -2)**
7. **(-4, -4)**
8. **(-7, -6)**
9. **(8, 1)**
10. **(-5, 6)**
11. **A**
12. **J**
13. **H**
14. **E**
15. **K**
16. **C**
17. **B**
18. **G**
19. **F**
20. **D**

**Determine the coordinates of each figure.**

- |            |               |
|------------|---------------|
| 1) cross   | 2) music note |
| 3) star    | 4) circle     |
| 5) square  | 6) heart      |
| 7) diamond | 8) lightning  |
| 9) moon    | 10) triangle  |

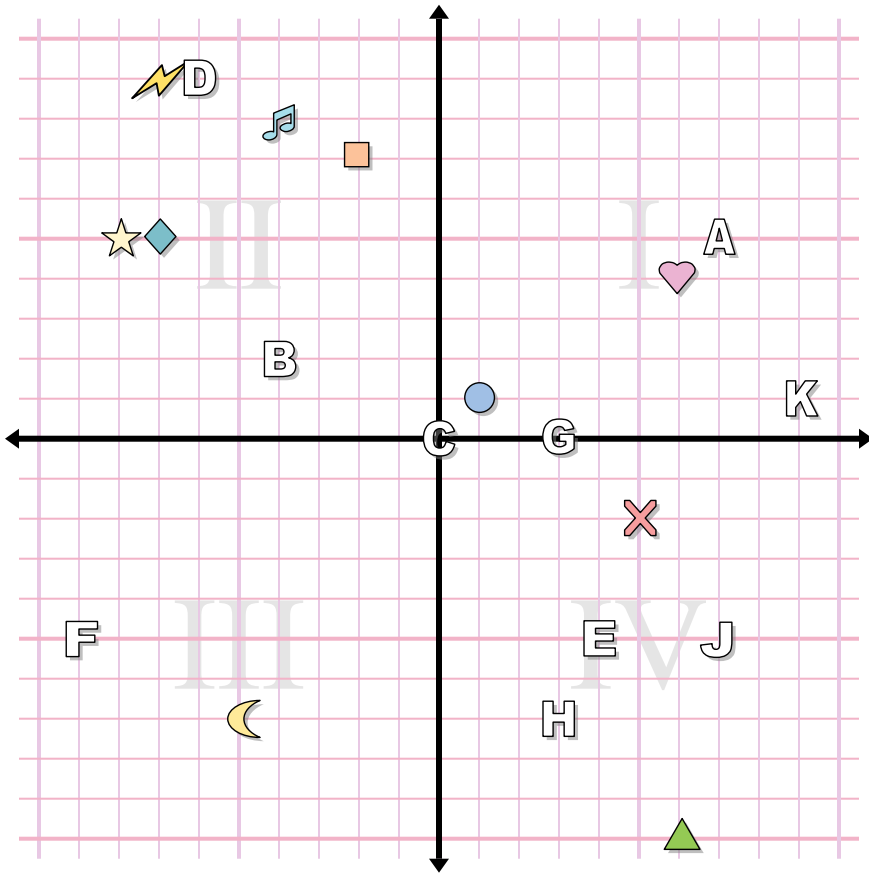
**Determine which letter is at each coordinate.**

- |              |               |
|--------------|---------------|
| 11) (-2, -4) | 12) (-1, -5)  |
| 13) (8, -7)  | 14) (-1, 9)   |
| 15) (6, -1)  | 16) (-8, -8)  |
| 17) (9, -1)  | 18) (4, -1)   |
| 19) (-7, 5)  | 20) (-5, -10) |





Answers



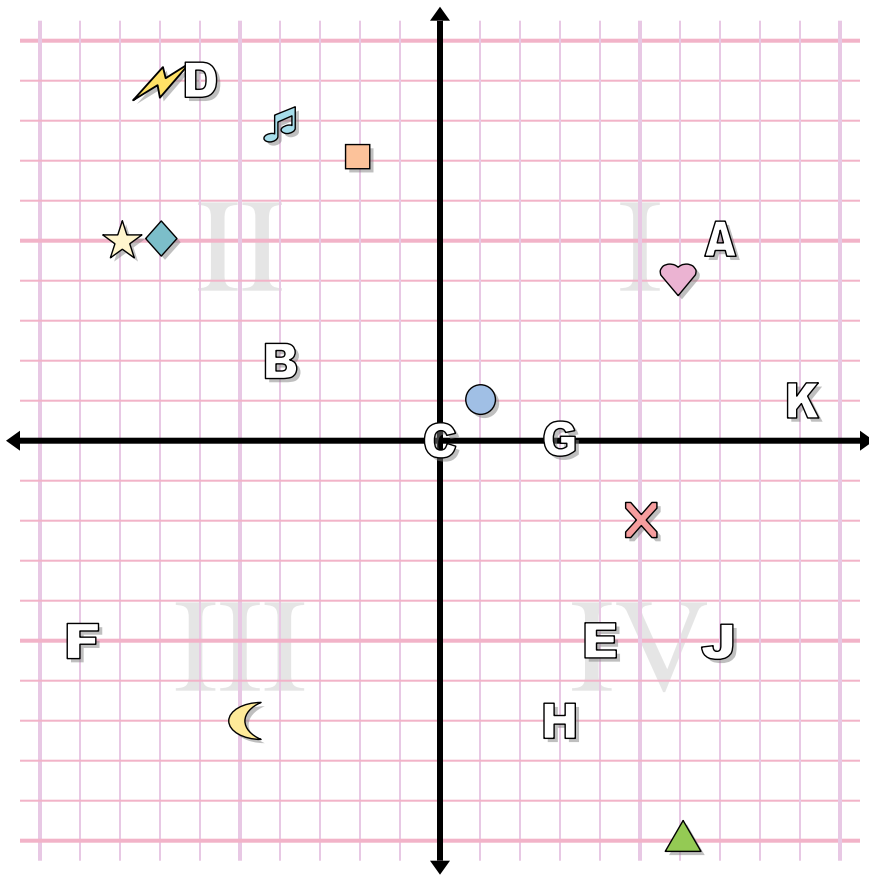
1. \_\_\_\_\_
2. \_\_\_\_\_
3. \_\_\_\_\_
4. \_\_\_\_\_
5. \_\_\_\_\_
6. \_\_\_\_\_
7. \_\_\_\_\_
8. \_\_\_\_\_
9. \_\_\_\_\_
10. \_\_\_\_\_
11. \_\_\_\_\_
12. \_\_\_\_\_
13. \_\_\_\_\_
14. \_\_\_\_\_
15. \_\_\_\_\_
16. \_\_\_\_\_
17. \_\_\_\_\_
18. \_\_\_\_\_
19. \_\_\_\_\_
20. \_\_\_\_\_

Determine the coordinates of each figure.

- |               |              |
|---------------|--------------|
| 1) cross      | 2) square    |
| 3) music note | 4) moon      |
| 5) circle     | 6) heart     |
| 7) triangle   | 8) lightning |
| 9) diamond    | 10) star     |

Determine which letter is at each coordinate.

- |               |              |
|---------------|--------------|
| 11) (-4 , 2)  | 12) (7 , -5) |
| 13) (0 , 0)   | 14) (3 , 0)  |
| 15) (3 , -7)  | 16) (4 , -5) |
| 17) (7 , 5)   | 18) (-6 , 9) |
| 19) (-9 , -5) | 20) (9 , 1)  |



Answers

1. **(5, -2)**
2. **(-2, 7)**
3. **(-4, 8)**
4. **(-5, -7)**
5. **(1, 1)**
6. **(6, 4)**
7. **(6, -10)**
8. **(-7, 9)**
9. **(-7, 5)**
10. **(-8, 5)**
11. **B**
12. **J**
13. **C**
14. **G**
15. **H**
16. **E**
17. **A**
18. **D**
19. **F**
20. **K**

Determine the coordinates of each figure.

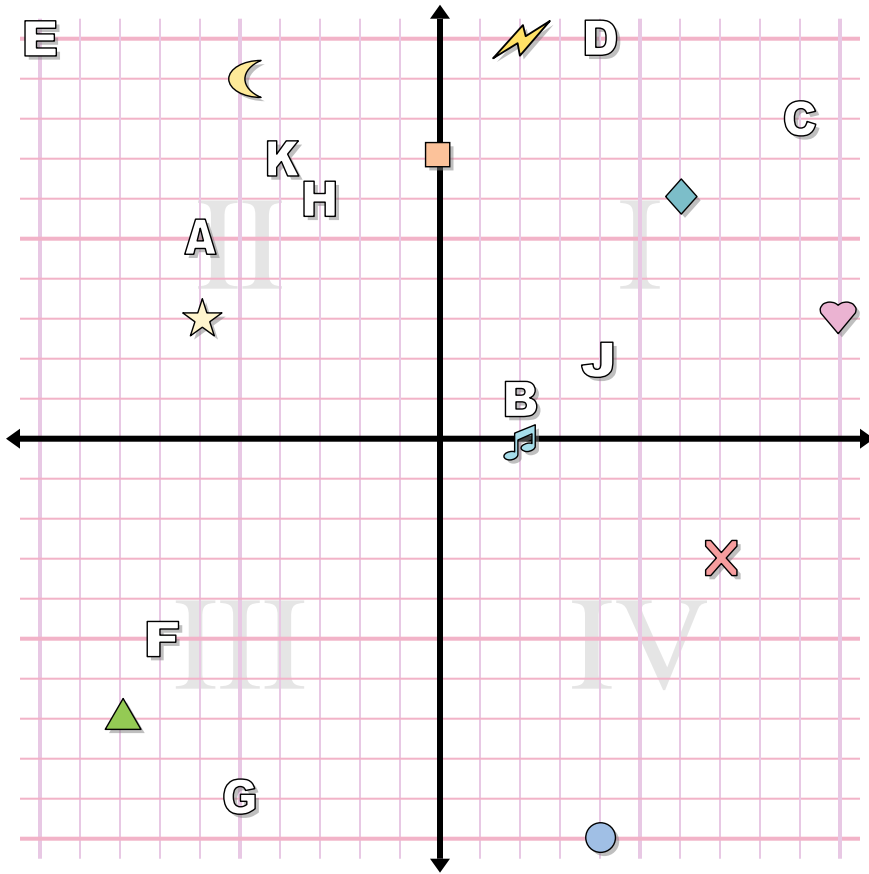
- |               |              |
|---------------|--------------|
| 1) cross      | 2) square    |
| 3) music note | 4) moon      |
| 5) circle     | 6) heart     |
| 7) triangle   | 8) lightning |
| 9) diamond    | 10) star     |

Determine which letter is at each coordinate.

- |              |             |
|--------------|-------------|
| 11) (-4, 2)  | 12) (7, -5) |
| 13) (0, 0)   | 14) (3, 0)  |
| 15) (3, -7)  | 16) (4, -5) |
| 17) (7, 5)   | 18) (-6, 9) |
| 19) (-9, -5) | 20) (9, 1)  |



Answers



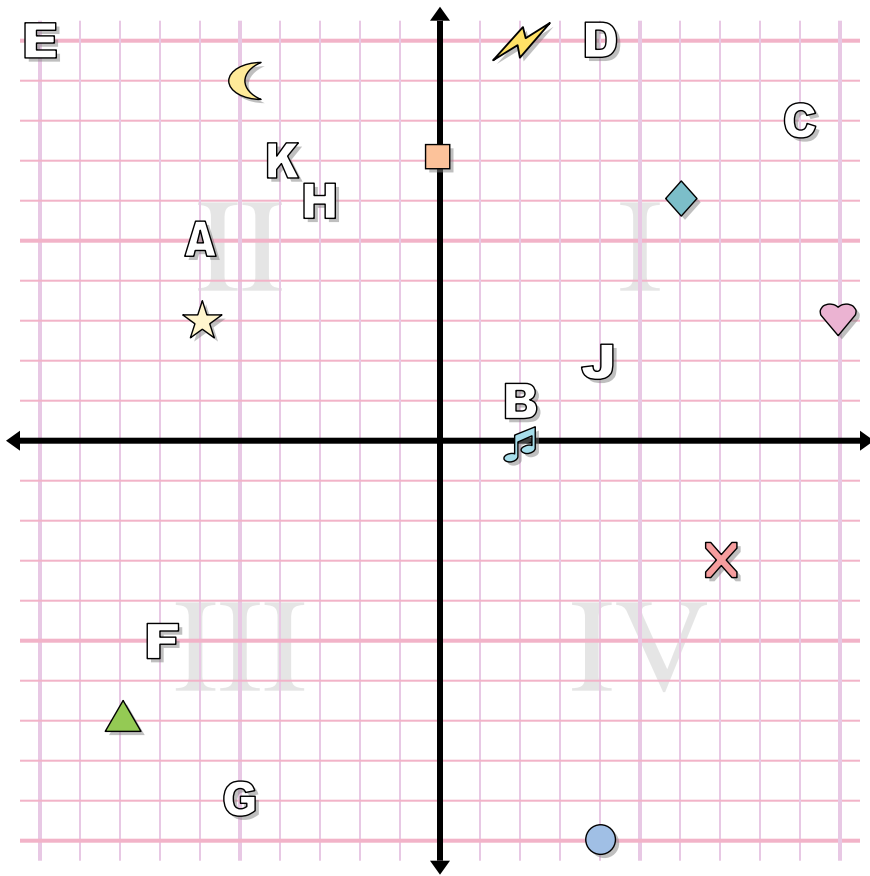
1. \_\_\_\_\_
2. \_\_\_\_\_
3. \_\_\_\_\_
4. \_\_\_\_\_
5. \_\_\_\_\_
6. \_\_\_\_\_
7. \_\_\_\_\_
8. \_\_\_\_\_
9. \_\_\_\_\_
10. \_\_\_\_\_
11. \_\_\_\_\_
12. \_\_\_\_\_
13. \_\_\_\_\_
14. \_\_\_\_\_
15. \_\_\_\_\_
16. \_\_\_\_\_
17. \_\_\_\_\_
18. \_\_\_\_\_
19. \_\_\_\_\_
20. \_\_\_\_\_

Determine the coordinates of each figure.

- |              |               |
|--------------|---------------|
| 1) star      | 2) moon       |
| 3) heart     | 4) diamond    |
| 5) lightning | 6) triangle   |
| 7) circle    | 8) music note |
| 9) square    | 10) cross     |

Determine which letter is at each coordinate.

- |               |                |
|---------------|----------------|
| 11) (-3 , 6)  | 12) (-4 , 7)   |
| 13) (-5 , -9) | 14) (-7 , -5)  |
| 15) (-6 , 5)  | 16) (9 , 8)    |
| 17) (4 , 10)  | 18) (4 , 2)    |
| 19) (2 , 1)   | 20) (-10 , 10) |



**Answers**

1. **(-6 , 3)**
2. **(-5 , 9)**
3. **(10 , 3)**
4. **(6 , 6)**
5. **(2 , 10)**
6. **(-8 , -7)**
7. **(4 , -10)**
8. **(2 , 0)**
9. **(0 , 7)**
10. **(7 , -3)**
11. **H**
12. **K**
13. **G**
14. **F**
15. **A**
16. **C**
17. **D**
18. **J**
19. **B**
20. **E**

**Determine the coordinates of each figure.**

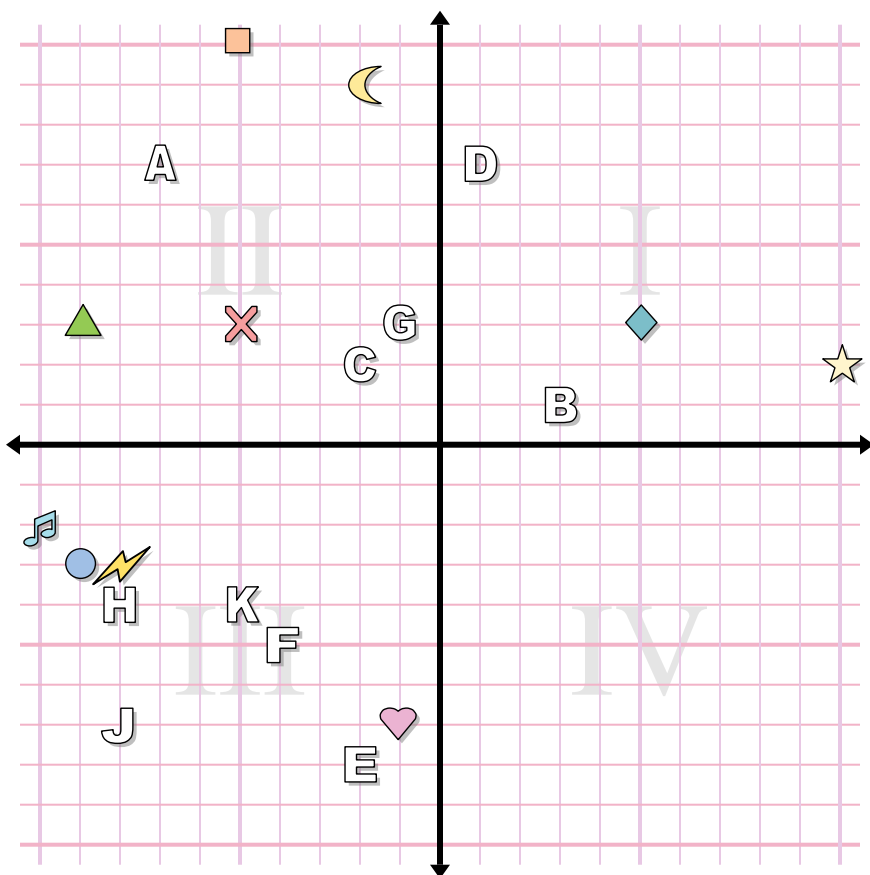
- |              |               |
|--------------|---------------|
| 1) star      | 2) moon       |
| 3) heart     | 4) diamond    |
| 5) lightning | 6) triangle   |
| 7) circle    | 8) music note |
| 9) square    | 10) cross     |

**Determine which letter is at each coordinate.**

- |               |                |
|---------------|----------------|
| 11) (-3 , 6)  | 12) (-4 , 7)   |
| 13) (-5 , -9) | 14) (-7 , -5)  |
| 15) (-6 , 5)  | 16) (9 , 8)    |
| 17) (4 , 10)  | 18) (4 , 2)    |
| 19) (2 , 1)   | 20) (-10 , 10) |



Answers



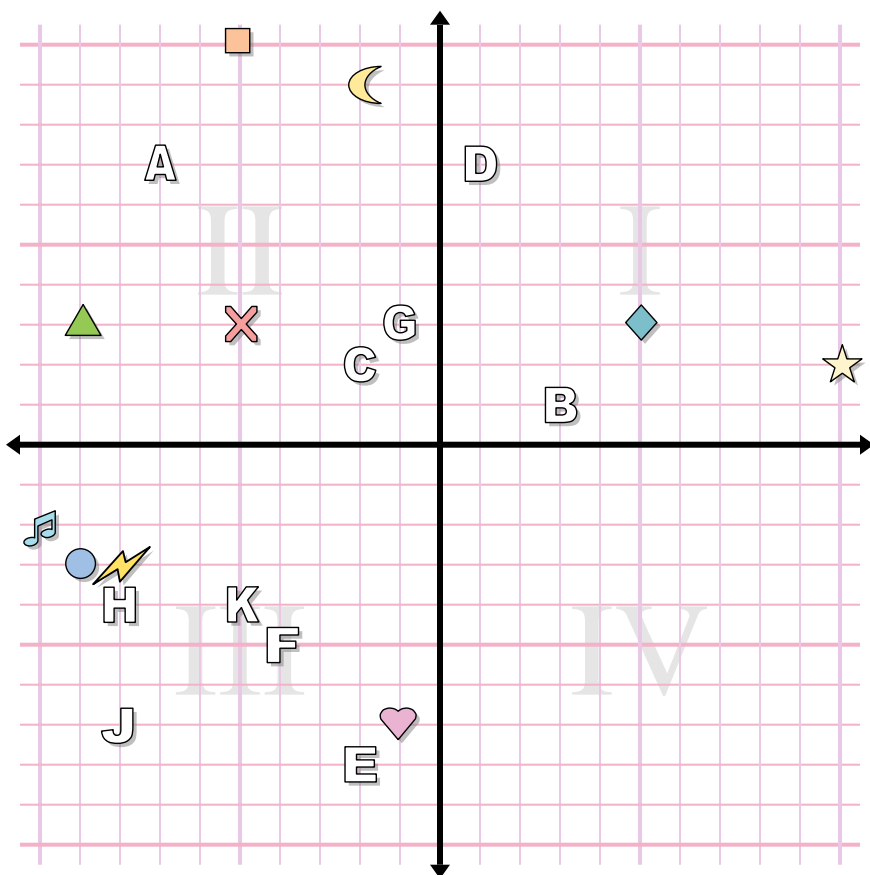
1. \_\_\_\_\_
2. \_\_\_\_\_
3. \_\_\_\_\_
4. \_\_\_\_\_
5. \_\_\_\_\_
6. \_\_\_\_\_
7. \_\_\_\_\_
8. \_\_\_\_\_
9. \_\_\_\_\_
10. \_\_\_\_\_
11. \_\_\_\_\_
12. \_\_\_\_\_
13. \_\_\_\_\_
14. \_\_\_\_\_
15. \_\_\_\_\_
16. \_\_\_\_\_
17. \_\_\_\_\_
18. \_\_\_\_\_
19. \_\_\_\_\_
20. \_\_\_\_\_

Determine the coordinates of each figure.

- |               |              |
|---------------|--------------|
| 1) diamond    | 2) star      |
| 3) triangle   | 4) moon      |
| 5) music note | 6) lightning |
| 7) square     | 8) heart     |
| 9) circle     | 10) cross    |

Determine which letter is at each coordinate.

- |              |              |
|--------------|--------------|
| 11) (-7, 7)  | 12) (-4, -5) |
| 13) (-8, -4) | 14) (-2, -8) |
| 15) (-8, -7) | 16) (-1, 3)  |
| 17) (-5, -4) | 18) (3, 1)   |
| 19) (-2, 2)  | 20) (1, 7)   |



**Answers**

1. (5, 3)
2. (10, 2)
3. (-9, 3)
4. (-2, 9)
5. (-10, -2)
6. (-8, -3)
7. (-5, 10)
8. (-1, -7)
9. (-9, -3)
10. (-5, 3)
11. A
12. F
13. H
14. E
15. J
16. G
17. K
18. B
19. C
20. D

**Determine the coordinates of each figure.**

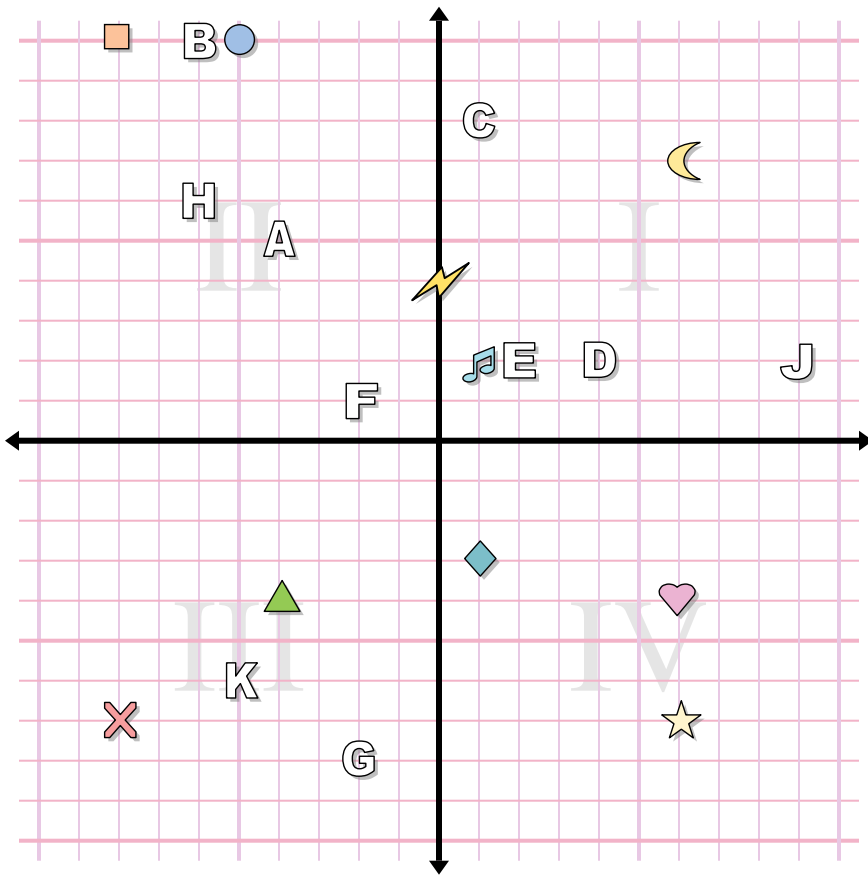
- |               |              |
|---------------|--------------|
| 1) diamond    | 2) star      |
| 3) triangle   | 4) moon      |
| 5) music note | 6) lightning |
| 7) square     | 8) heart     |
| 9) circle     | 10) cross    |

**Determine which letter is at each coordinate.**

- |              |              |
|--------------|--------------|
| 11) (-7, 7)  | 12) (-4, -5) |
| 13) (-8, -4) | 14) (-2, -8) |
| 15) (-8, -7) | 16) (-1, 3)  |
| 17) (-5, -4) | 18) (3, 1)   |
| 19) (-2, 2)  | 20) (1, 7)   |



Answers



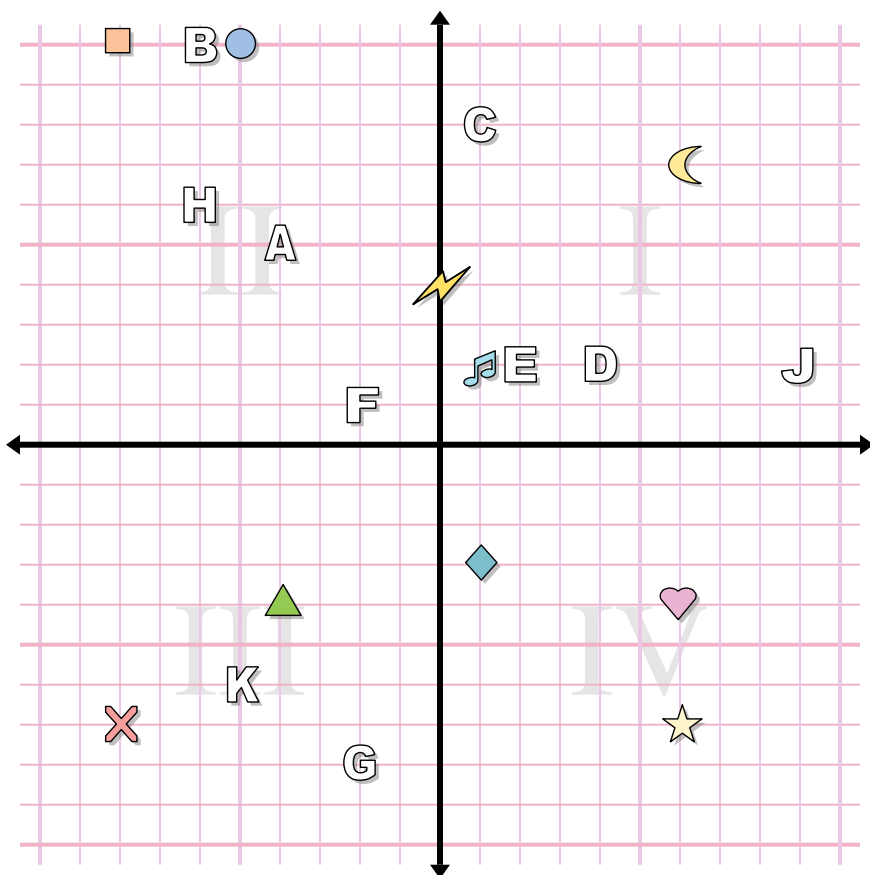
1. \_\_\_\_\_
2. \_\_\_\_\_
3. \_\_\_\_\_
4. \_\_\_\_\_
5. \_\_\_\_\_
6. \_\_\_\_\_
7. \_\_\_\_\_
8. \_\_\_\_\_
9. \_\_\_\_\_
10. \_\_\_\_\_
11. \_\_\_\_\_
12. \_\_\_\_\_
13. \_\_\_\_\_
14. \_\_\_\_\_
15. \_\_\_\_\_
16. \_\_\_\_\_
17. \_\_\_\_\_
18. \_\_\_\_\_
19. \_\_\_\_\_
20. \_\_\_\_\_

Determine the coordinates of each figure.

- |               |             |
|---------------|-------------|
| 1) star       | 2) cross    |
| 3) music note | 4) square   |
| 5) lightning  | 6) moon     |
| 7) circle     | 8) heart    |
| 9) triangle   | 10) diamond |

Determine which letter is at each coordinate.

- |               |               |
|---------------|---------------|
| 11) (-4 , 5)  | 12) (-2 , 1)  |
| 13) (-5 , -6) | 14) (-6 , 6)  |
| 15) (9 , 2)   | 16) (4 , 2)   |
| 17) (1 , 8)   | 18) (-6 , 10) |
| 19) (2 , 2)   | 20) (-2 , -8) |



**Answers**

1. (6, -7)
2. (-8, -7)
3. (1, 2)
4. (-8, 10)
5. (0, 4)
6. (6, 7)
7. (-5, 10)
8. (6, -4)
9. (-4, -4)
10. (1, -3)
11. A
12. F
13. K
14. H
15. J
16. D
17. C
18. B
19. E
20. G

**Determine the coordinates of each figure.**

- |               |             |
|---------------|-------------|
| 1) star       | 2) cross    |
| 3) music note | 4) square   |
| 5) lightning  | 6) moon     |
| 7) circle     | 8) heart    |
| 9) triangle   | 10) diamond |

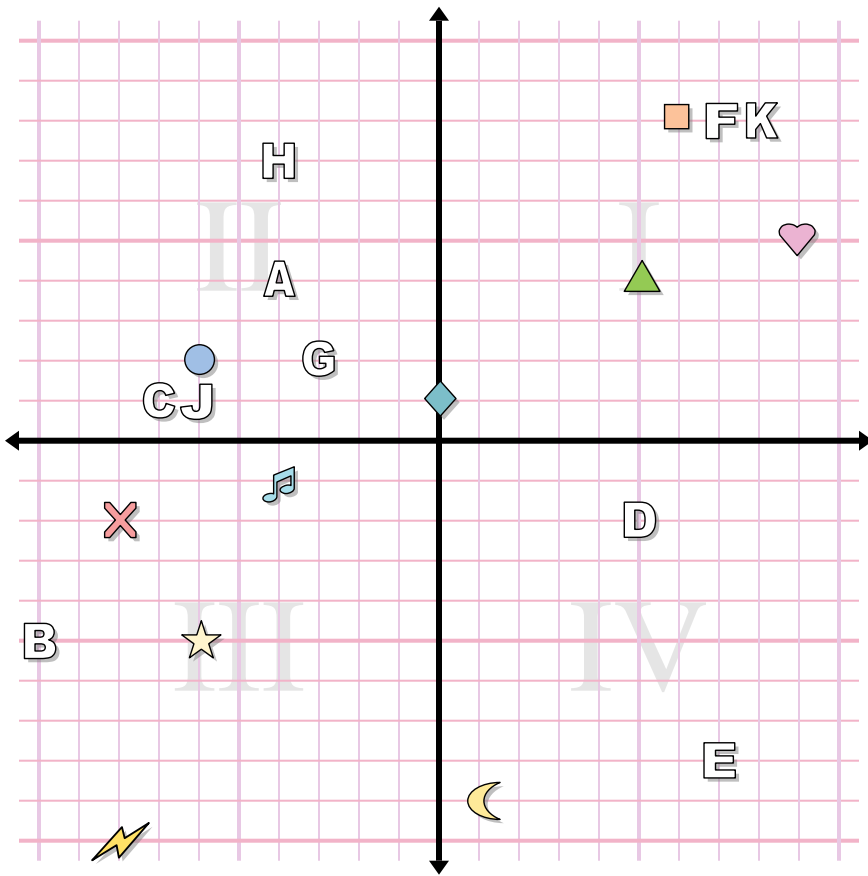
**Determine which letter is at each coordinate.**

- |              |              |
|--------------|--------------|
| 11) (-4, 5)  | 12) (-2, 1)  |
| 13) (-5, -6) | 14) (-6, 6)  |
| 15) (9, 2)   | 16) (4, 2)   |
| 17) (1, 8)   | 18) (-6, 10) |
| 19) (2, 2)   | 20) (-2, -8) |





Answers



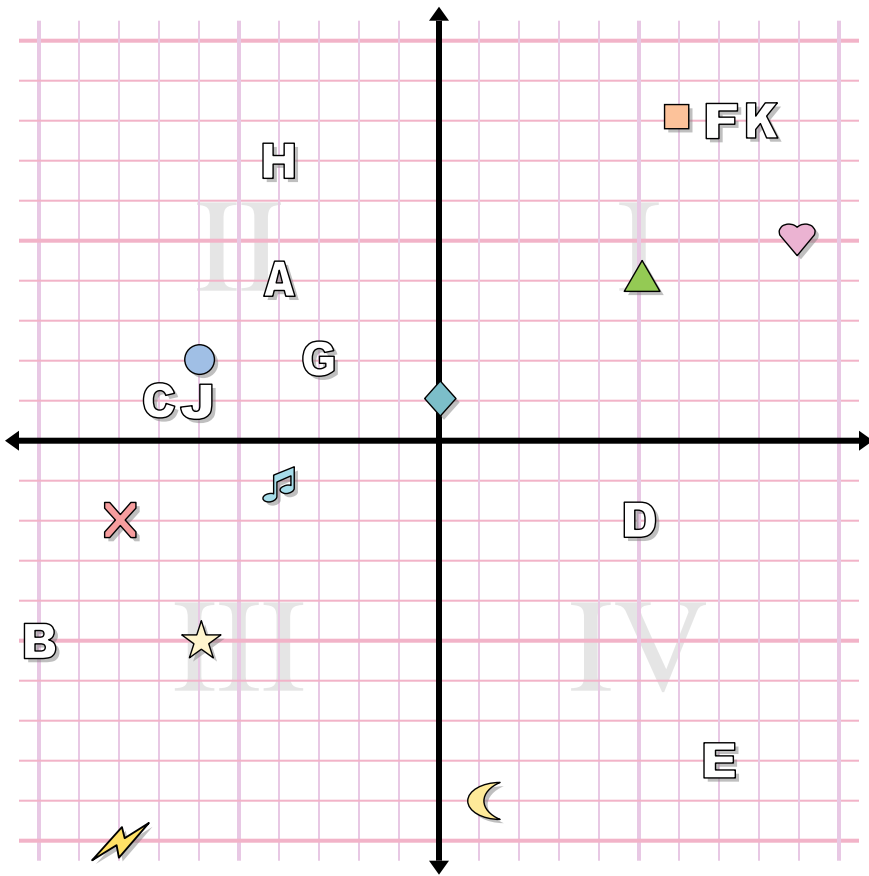
1. \_\_\_\_\_
2. \_\_\_\_\_
3. \_\_\_\_\_
4. \_\_\_\_\_
5. \_\_\_\_\_
6. \_\_\_\_\_
7. \_\_\_\_\_
8. \_\_\_\_\_
9. \_\_\_\_\_
10. \_\_\_\_\_
11. \_\_\_\_\_
12. \_\_\_\_\_
13. \_\_\_\_\_
14. \_\_\_\_\_
15. \_\_\_\_\_
16. \_\_\_\_\_
17. \_\_\_\_\_
18. \_\_\_\_\_
19. \_\_\_\_\_
20. \_\_\_\_\_

Determine the coordinates of each figure.

- |               |             |
|---------------|-------------|
| 1) music note | 2) triangle |
| 3) cross      | 4) heart    |
| 5) lightning  | 6) square   |
| 7) circle     | 8) diamond  |
| 9) moon       | 10) star    |

Determine which letter is at each coordinate.

- |                |              |
|----------------|--------------|
| 11) (-3 , 2)   | 12) (8 , 8)  |
| 13) (-6 , 1)   | 14) (7 , -8) |
| 15) (5 , -2)   | 16) (-4 , 4) |
| 17) (-10 , -5) | 18) (-7 , 1) |
| 19) (7 , 8)    | 20) (-4 , 7) |



Answers

1. **(-4, -1)**
2. **(5, 4)**
3. **(-8, -2)**
4. **(9, 5)**
5. **(-8, -10)**
6. **(6, 8)**
7. **(-6, 2)**
8. **(0, 1)**
9. **(1, -9)**
10. **(-6, -5)**
11. **G**
12. **K**
13. **J**
14. **E**
15. **D**
16. **A**
17. **B**
18. **C**
19. **F**
20. **H**

Determine the coordinates of each figure.

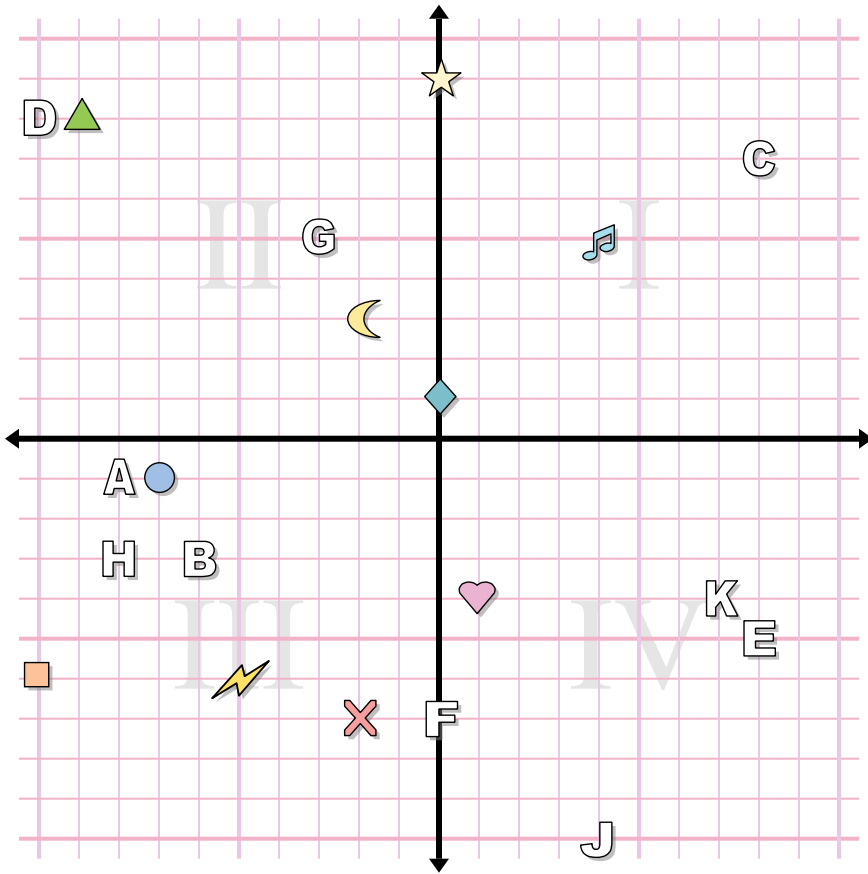
- |               |             |
|---------------|-------------|
| 1) music note | 2) triangle |
| 3) cross      | 4) heart    |
| 5) lightning  | 6) square   |
| 7) circle     | 8) diamond  |
| 9) moon       | 10) star    |

Determine which letter is at each coordinate.

- |               |             |
|---------------|-------------|
| 11) (-3, 2)   | 12) (8, 8)  |
| 13) (-6, 1)   | 14) (7, -8) |
| 15) (5, -2)   | 16) (-4, 4) |
| 17) (-10, -5) | 18) (-7, 1) |
| 19) (7, 8)    | 20) (-4, 7) |



Answers



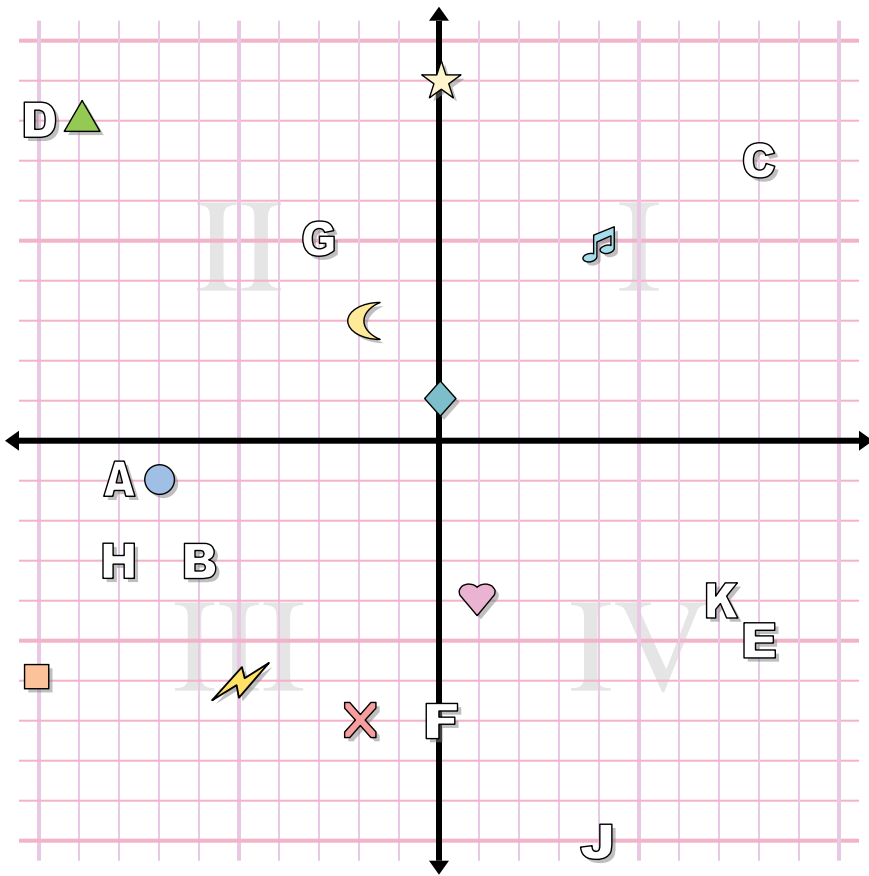
1. \_\_\_\_\_
2. \_\_\_\_\_
3. \_\_\_\_\_
4. \_\_\_\_\_
5. \_\_\_\_\_
6. \_\_\_\_\_
7. \_\_\_\_\_
8. \_\_\_\_\_
9. \_\_\_\_\_
10. \_\_\_\_\_
11. \_\_\_\_\_
12. \_\_\_\_\_
13. \_\_\_\_\_
14. \_\_\_\_\_
15. \_\_\_\_\_
16. \_\_\_\_\_
17. \_\_\_\_\_
18. \_\_\_\_\_
19. \_\_\_\_\_
20. \_\_\_\_\_

Determine the coordinates of each figure.

- |             |               |
|-------------|---------------|
| 1) moon     | 2) music note |
| 3) triangle | 4) square     |
| 5) circle   | 6) cross      |
| 7) heart    | 8) diamond    |
| 9) star     | 10) lightning |

Determine which letter is at each coordinate.

- |              |              |
|--------------|--------------|
| 11) (-6, -3) | 12) (-10, 8) |
| 13) (8, -5)  | 14) (4, -10) |
| 15) (-3, 5)  | 16) (-8, -3) |
| 17) (0, -7)  | 18) (7, -4)  |
| 19) (-8, -1) | 20) (8, 7)   |



Answers

1. **(-2 , 3)**
2. **(4 , 5)**
3. **(-9 , 8)**
4. **(-10 , -6)**
5. **(-7 , -1)**
6. **(-2 , -7)**
7. **(1 , -4)**
8. **(0 , 1)**
9. **(0 , 9)**
10. **(-5 , -6)**
11. **B**
12. **D**
13. **E**
14. **J**
15. **G**
16. **H**
17. **F**
18. **K**
19. **A**
20. **C**

Determine the coordinates of each figure.

- |             |               |
|-------------|---------------|
| 1) moon     | 2) music note |
| 3) triangle | 4) square     |
| 5) circle   | 6) cross      |
| 7) heart    | 8) diamond    |
| 9) star     | 10) lightning |

Determine which letter is at each coordinate.

- |               |               |
|---------------|---------------|
| 11) (-6 , -3) | 12) (-10 , 8) |
| 13) (8 , -5)  | 14) (4 , -10) |
| 15) (-3 , 5)  | 16) (-8 , -3) |
| 17) (0 , -7)  | 18) (7 , -4)  |
| 19) (-8 , -1) | 20) (8 , 7)   |