



Draw a circle at the coordinates listed.

1) (4, 4)



2) (10, 5)



3) (9, 7)



4) (2, 4)



5) (3, 9)



6) (6, 4)



7) (5, 8)



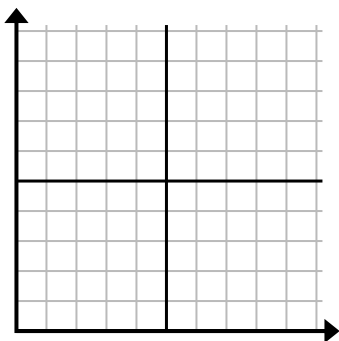
8) (1, 2)



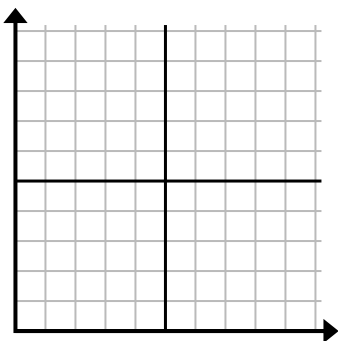
9) (2, 5)



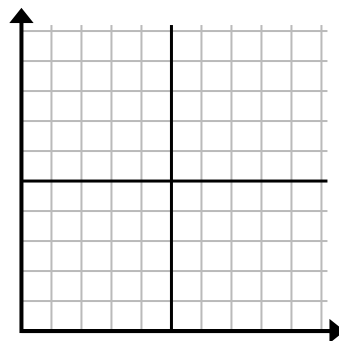
10) (4, 2)



11) (1, 6)



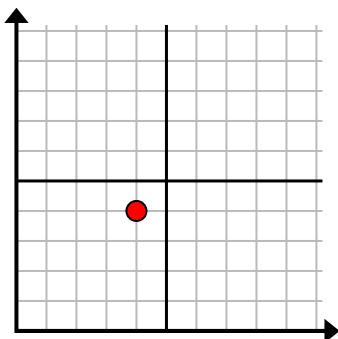
12) (10, 1)



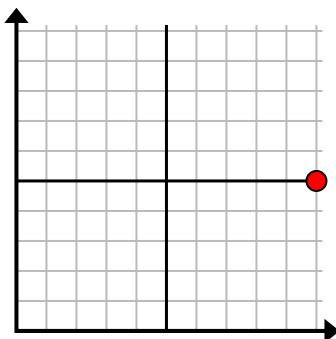


Draw a circle at the coordinates listed.

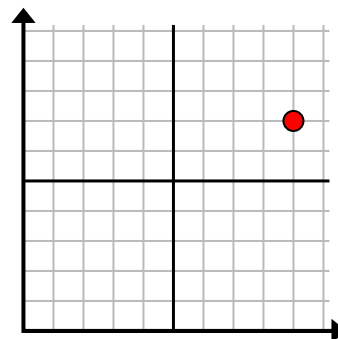
1) (4, 4)



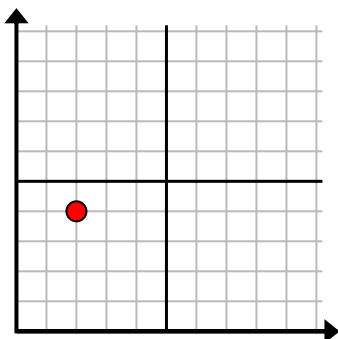
2) (10, 5)



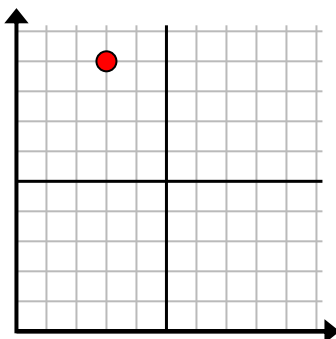
3) (9, 7)



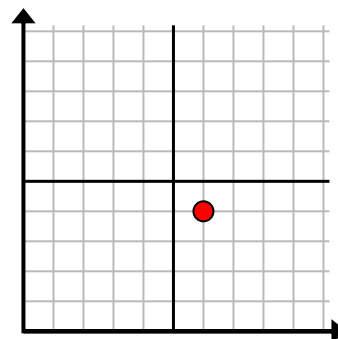
4) (2, 4)



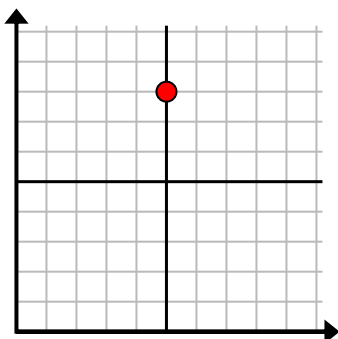
5) (3, 9)



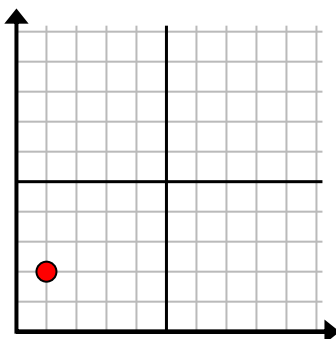
6) (6, 4)



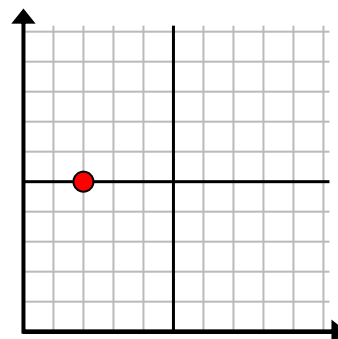
7) (5, 8)



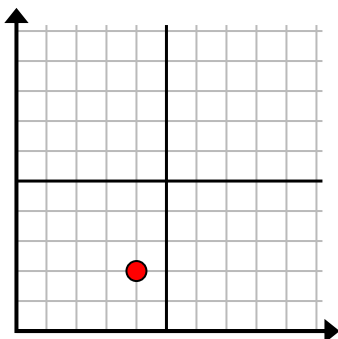
8) (1, 2)



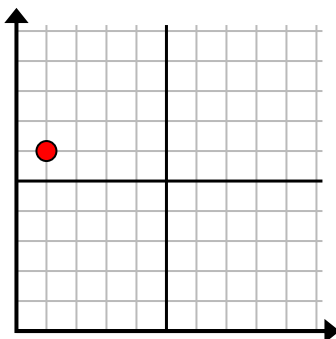
9) (2, 5)



10) (4, 2)



11) (1, 6)



12) (10, 1)

