



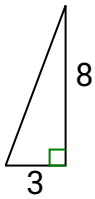
Identifying Same Slope

Name: _____

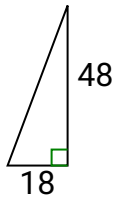
Determine which choice has the same slope as the one shown.

Answers

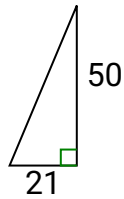
1)



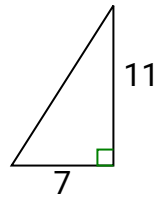
A.



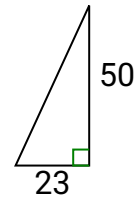
B.



C.



D.



1. _____

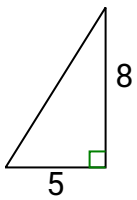
2. _____

3. _____

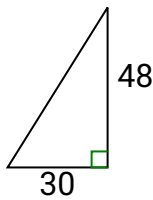
4. _____

5. _____

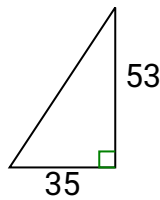
2)



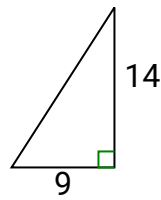
A.



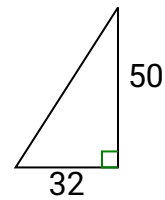
B.



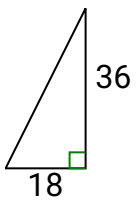
C.



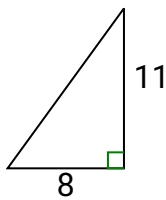
D.



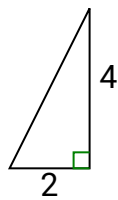
3)



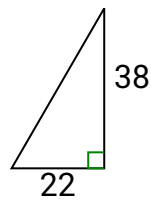
A.



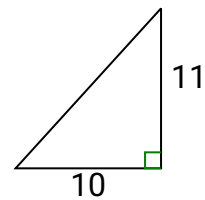
B.



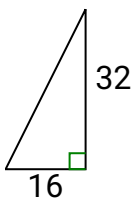
C.



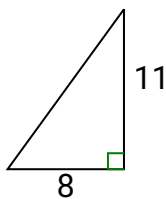
D.



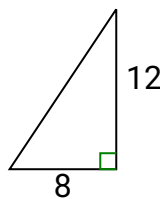
4)



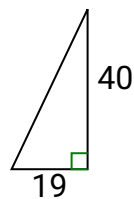
A.



B.



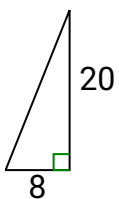
C.



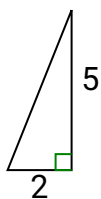
D.



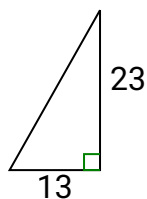
5)



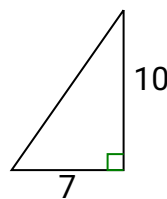
A.



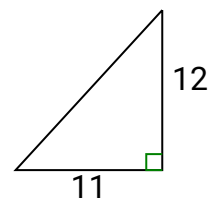
B.



C.



D.





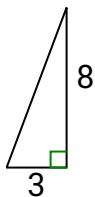
Identifying Same Slope

Name: **Answer Key**

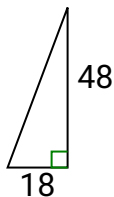
Determine which choice has the same slope as the one shown.

Answers

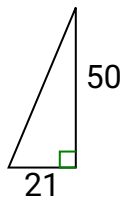
1)



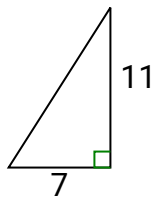
A.



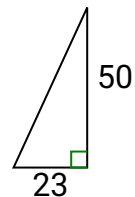
B.



C.

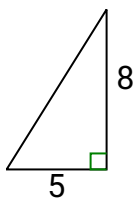


D.

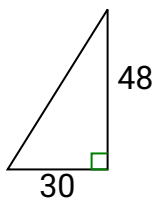


1. **A**

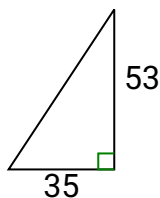
2)



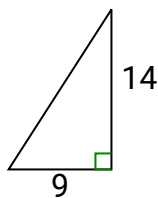
A.



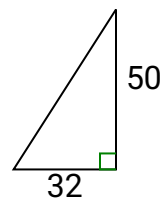
B.



C.



D.



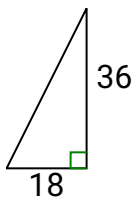
2. **A**

3. **B**

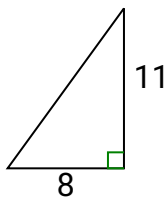
4. **D**

5. **A**

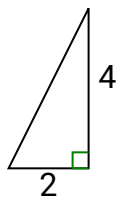
3)



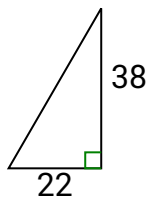
A.



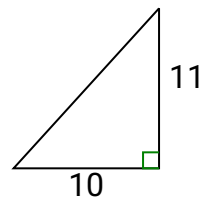
B.



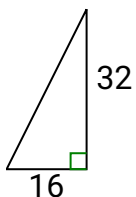
C.



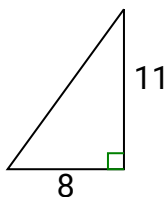
D.



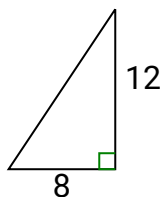
4)



A.



B.



C.



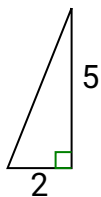
D.



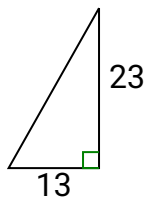
5)



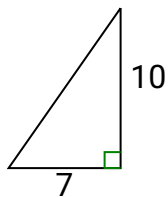
A.



B.



C.



D.

