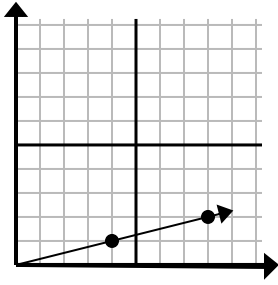




Determine which choice represents a point on the line if it were to continue.

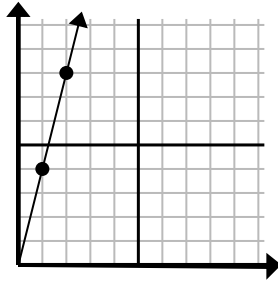
Answers

1)



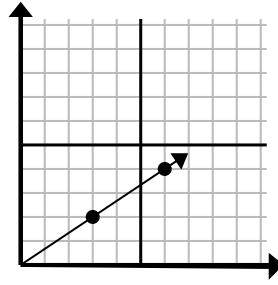
- A. (10, 4)
- B. (13, 5)
- C. (12, 3)
- D. (9, 3)

2)



- A. (3, 9)
- B. (7, 8)
- C. (5, 5)
- D. (3, 12)

3)



- A. (12, 8)
- B. (9, 6)
- C. (18, 12)
- D. (11, 3)

1. _____

2. _____

3. _____

4. _____

5. _____

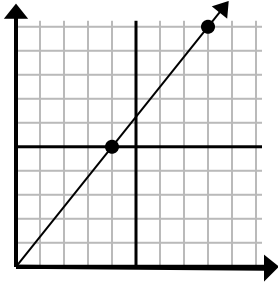
6. _____

7. _____

8. _____

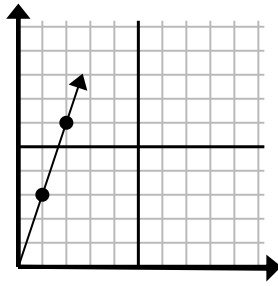
9. _____

4)



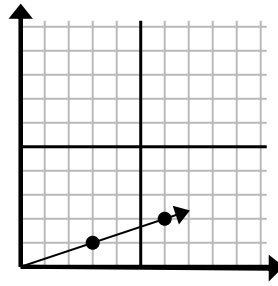
- A. (9, 9)
- B. (12, 15)
- C. (12, 7)
- D. (28, 35)

5)



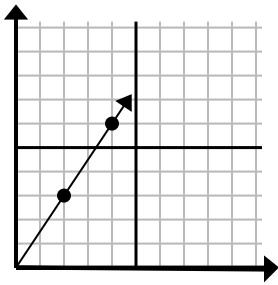
- A. (3, 9)
- B. (4, 12)
- C. (3, 5)
- D. (7, 4)

6)



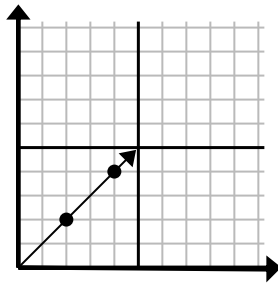
- A. (9, 3)
- B. (11, 4)
- C. (11, 5)
- D. (15, 5)

7)



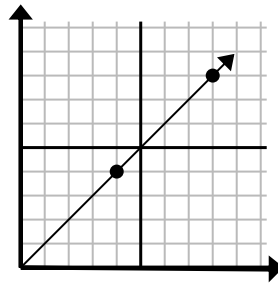
- A. (8, 7)
- B. (6, 4)
- C. (6, 9)
- D. (12, 18)

8)



- A. (6, 6)
- B. (8, 8)
- C. (10, 10)
- D. (14, 14)

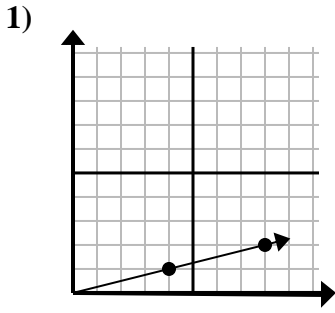
9)



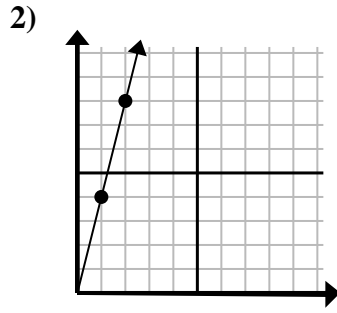
- A. (24, 24)
- B. (12, 12)
- C. (28, 28)
- D. (20, 20)



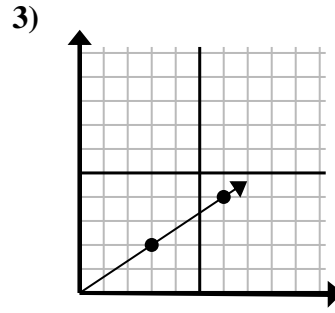
Determine which choice represents a point on the line if it were to continue.



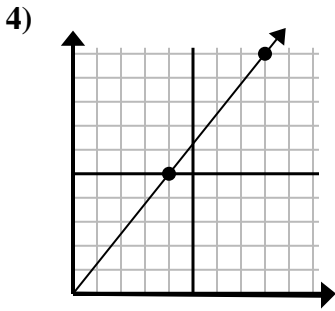
- A. (10, 4)
- B. (13, 5)
- C. (12, 3)
- D. (9, 3)



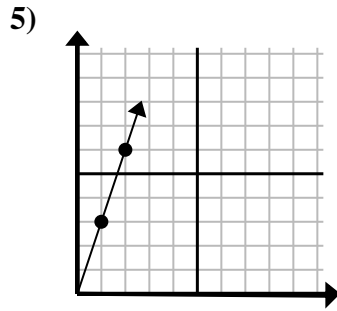
- A. (3, 9)
- B. (7, 8)
- C. (5, 5)
- D. (3, 12)



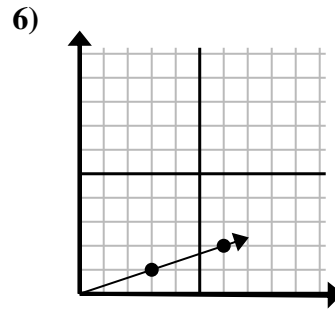
- A. (12, 8)
- B. (9, 6)
- C. (18, 12)
- D. (11, 3)



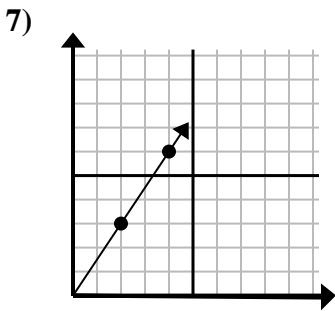
- A. (9, 9)
- B. (12, 15)
- C. (12, 7)
- D. (28, 35)



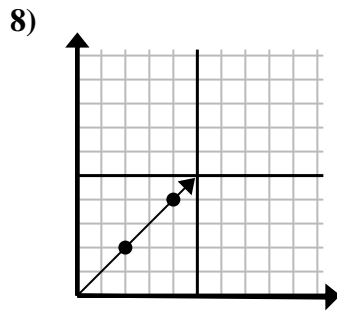
- A. (3, 9)
- B. (4, 12)
- C. (3, 5)
- D. (7, 4)



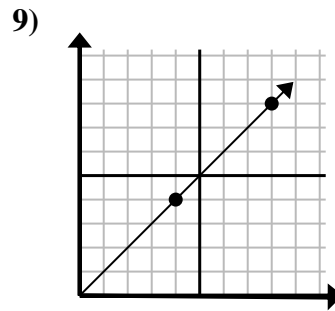
- A. (9, 3)
- B. (11, 4)
- C. (11, 5)
- D. (15, 5)



- A. (8, 7)
- B. (6, 4)
- C. (6, 9)
- D. (12, 18)



- A. (6, 6)
- B. (8, 8)
- C. (10, 10)
- D. (14, 14)



- A. (24, 24)
- B. (12, 12)
- C. (28, 28)
- D. (20, 20)

Answers

- 1. **C**
- 2. **D**
- 3. **B**
- 4. **B**
- 5. **A**
- 6. **A**
- 7. **C**
- 8. **A**
- 9. **B**