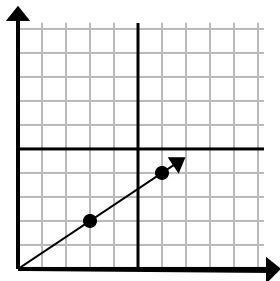




Determine which choice represents a point on the line if it were to continue.

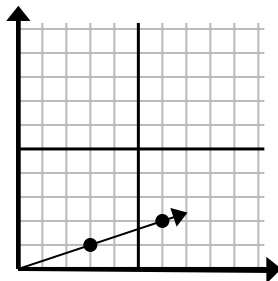
Answers

1)



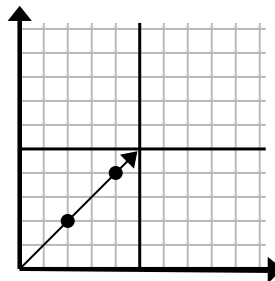
- A. (21 , 14)
- B. (12 , 8)
- C. (9 , 6)
- D. (15 , 10)

2)



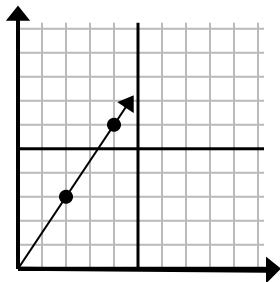
- A. (18 , 6)
- B. (12 , 4)
- C. (9 , 3)
- D. (10 , 3)

3)



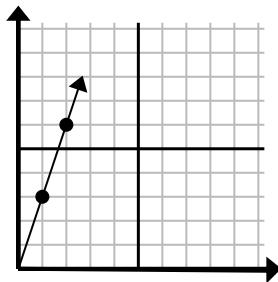
- A. (6 , 6)
- B. (12 , 12)
- C. (7 , 7)
- D. (8 , 4)

4)



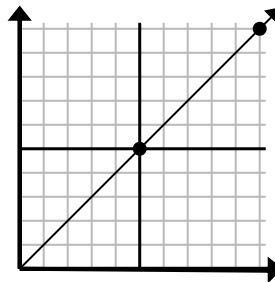
- A. (6 , 9)
- B. (14 , 21)
- C. (7 , 5)
- D. (8 , 7)

5)



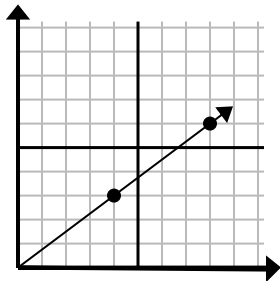
- A. (5 , 4)
- B. (4 , 8)
- C. (7 , 21)
- D. (3 , 9)

6)



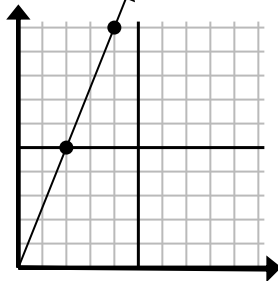
- A. (15 , 6)
- B. (30 , 30)
- C. (15 , 15)
- D. (35 , 35)

7)



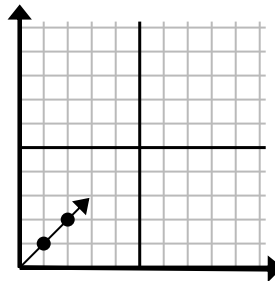
- A. (10 , 5)
- B. (10 , 6)
- C. (12 , 9)
- D. (28 , 21)

8)



- A. (12 , 30)
- B. (8 , 20)
- C. (6 , 15)
- D. (8 , 6)

9)



- A. (3 , 3)
- B. (3 , 2)
- C. (6 , 6)
- D. (6 , 3)

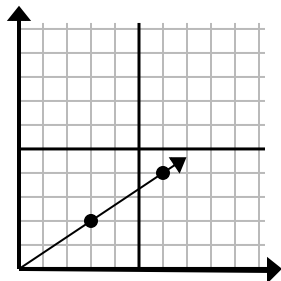
1. _____
2. _____
3. _____
4. _____
5. _____
6. _____
7. _____
8. _____
9. _____



Determine which choice represents a point on the line if it were to continue.

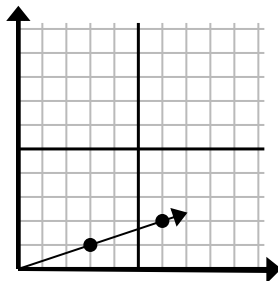
Answers

1)



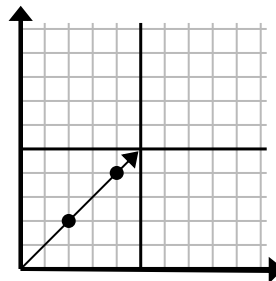
- A. (21 , 14)
B. (12 , 8)
C. (9 , 6)
D. (15 , 10)

2)



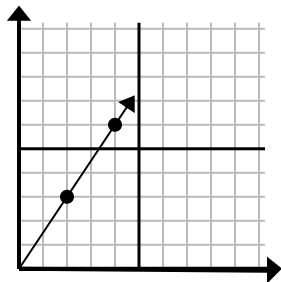
- A. (18 , 6)
B. (12 , 4)
C. (9 , 3)
D. (10 , 3)

3)



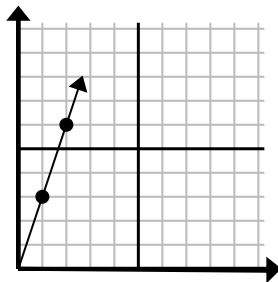
- A. (6 , 6)
B. (12 , 12)
C. (7 , 7)
D. (8 , 4)

4)



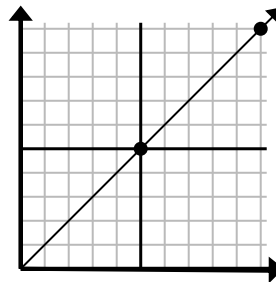
- A. (6 , 9)
B. (14 , 21)
C. (7 , 5)
D. (8 , 7)

5)



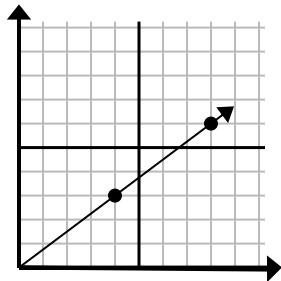
- A. (5 , 4)
B. (4 , 8)
C. (7 , 21)
D. (3 , 9)

6)



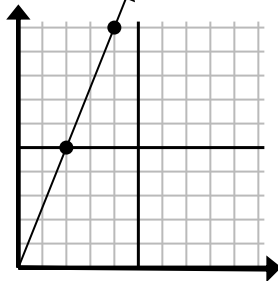
- A. (15 , 6)
B. (30 , 30)
C. (15 , 15)
D. (35 , 35)

7)



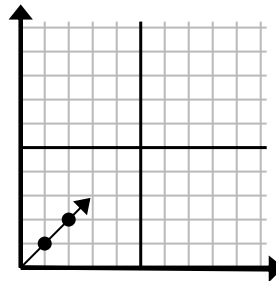
- A. (10 , 5)
B. (10 , 6)
C. (12 , 9)
D. (28 , 21)

8)



- A. (12 , 30)
B. (8 , 20)
C. (6 , 15)
D. (8 , 6)

9)



- A. (3 , 3)
B. (3 , 2)
C. (6 , 6)
D. (6 , 3)

1. **C**
2. **C**
3. **A**
4. **A**
5. **D**
6. **C**
7. **C**
8. **C**
9. **A**