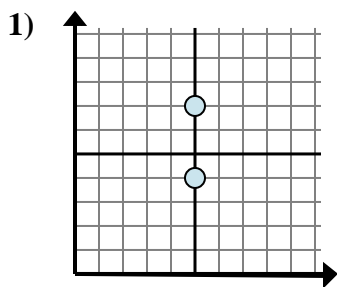


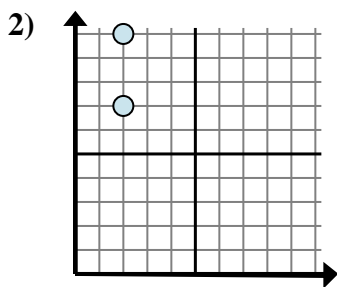


Determine which expression best shows the distance between the two points.

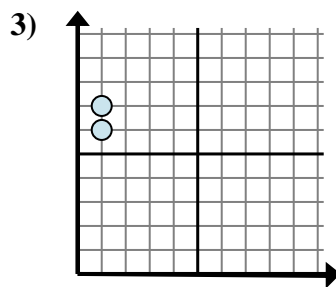
Answers



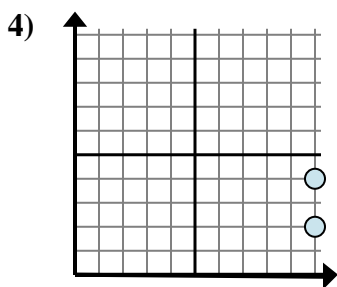
- A. $5 - 5$
- B. $7 - 4$
- C. $7 - 5$
- D. $5 - 4$



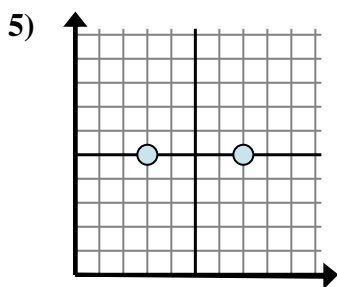
- A. $10 - 2$
- B. $2 - 10$
- C. $2 - 2$
- D. $10 - 7$



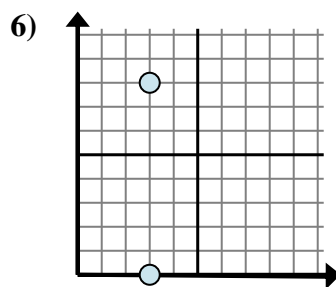
- A. $7 - 6$
- B. $1 - 6$
- C. $6 - 1$
- D. $1 - 1$



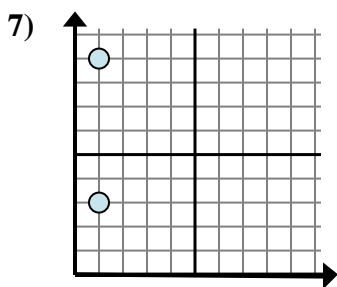
- A. $10 - 4$
- B. $10 - 4$
- C. $2 - 10$
- D. $4 - 2$



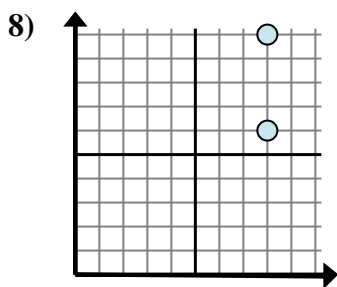
- A. $7 - 5$
- B. $7 - 3$
- C. $5 - 7$
- D. $3 - 7$



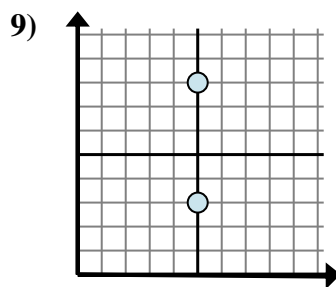
- A. $3 - 3$
- B. $8 - 0$
- C. $3 - 0$
- D. $0 - 8$



- A. $9 - 1$
- B. $9 - 3$
- C. $1 - 1$
- D. $1 - 1$



- A. $8 - 6$
- B. $8 - 6$
- C. $10 - 8$
- D. $10 - 6$

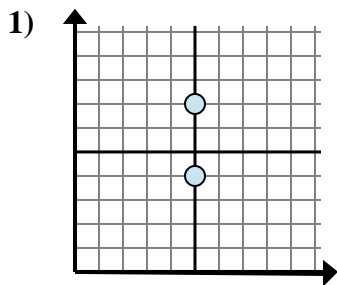


- A. $8 - 3$
- B. $5 - 5$
- C. $8 - 5$
- D. $5 - 8$

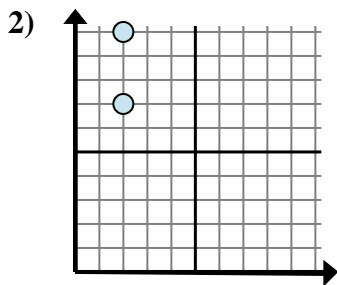
1. _____
2. _____
3. _____
4. _____
5. _____
6. _____
7. _____
8. _____
9. _____



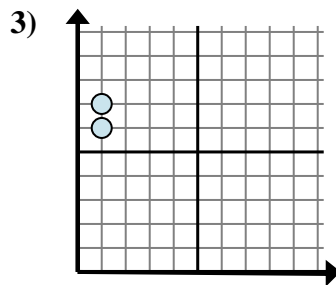
Determine which expression best shows the distance between the two points.



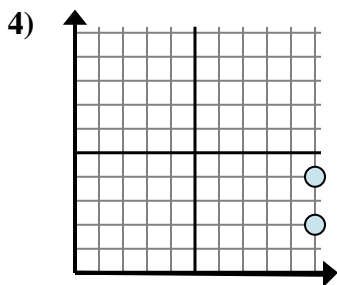
- A. $5 - 5$
- B. $7 - 4$
- C. $7 - 5$
- D. $5 - 4$



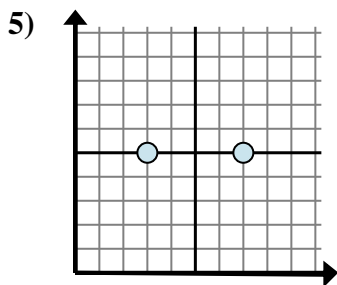
- A. $10 - 2$
- B. $2 - 10$
- C. $2 - 2$
- D. $10 - 7$



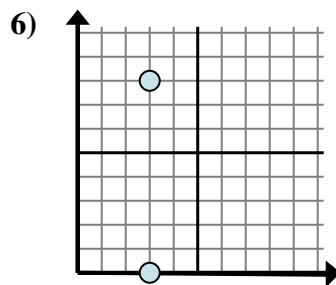
- A. $7 - 6$
- B. $1 - 6$
- C. $6 - 1$
- D. $1 - 1$



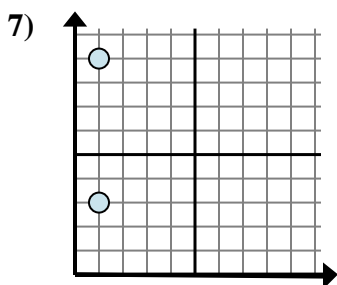
- A. $10 - 4$
- B. $10 - 4$
- C. $2 - 10$
- D. $4 - 2$



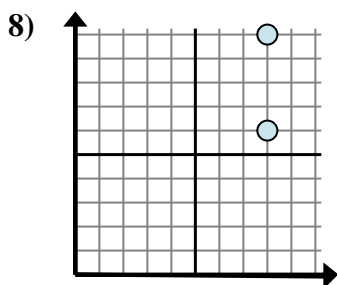
- A. $7 - 5$
- B. $7 - 3$
- C. $5 - 7$
- D. $3 - 7$



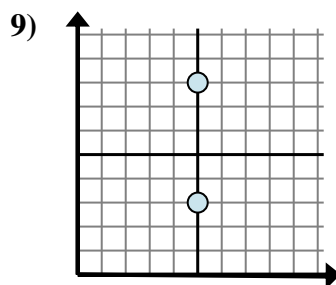
- A. $3 - 3$
- B. $8 - 0$
- C. $3 - 0$
- D. $0 - 8$



- A. $9 - 1$
- B. $9 - 3$
- C. $1 - 1$
- D. $1 - 1$



- A. $8 - 6$
- B. $8 - 6$
- C. $10 - 8$
- D. $10 - 6$



- A. $8 - 3$
- B. $5 - 5$
- C. $8 - 5$
- D. $5 - 8$

Answers

1. **B**

2. **D**

3. **A**

4. **D**

5. **B**

6. **B**

7. **B**

8. **D**

9. **A**